

1 Choose the correct answer:

7

a $\mathbb{Z}^+ \cup \{0\} = \dots\dots\dots$

• \mathbb{Z}^-

• \mathbb{N}

• \mathbb{Z}

• \mathbb{Z}^+

b If $2x = -4$, then $x \in \dots\dots\dots$

• \mathbb{N}

• \emptyset

• \mathbb{Z}^+

• \mathbb{Z}^-

c The circumference of the circle = $\dots\dots\dots \times \pi$

• r

• $2r$

• r^2

• $r + 2$

d A die is tossed once, then the probability of getting the number 3 = $\dots\dots\dots$

• 0

• $\frac{1}{6}$

• $\frac{3}{6}$

• 1

e The number which satisfies the inequality $x > -3$ is $\dots\dots\dots$

• -2

• -3

• -4

• -5

f The total surface area of a cube is 150 cm^2 , then its side length is $\dots\dots\dots$ cm.

• 25

• 4

• 5

• 6

g $2^5 \times 2^2 = \dots\dots\dots$

• 2^7

• 4^7

• 1

• 2^3

2 Complete each of the following:

6

a $\frac{2^3 \times 2^5}{2^2} = \dots\dots\dots$

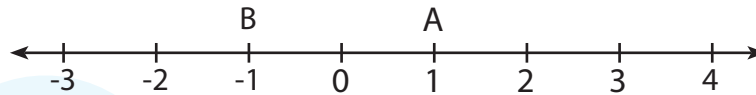
b The set of counting numbers $C \dots\dots\dots \mathbb{N}$

c The probability of the impossible event = $\dots\dots\dots$

d If $x - 7 = 9$, $x \in \mathbb{N}$, then $x = \dots\dots\dots$

e The perimeter of the base of a cuboid is 10 cm and its height is 4 cm. Then its lateral area = cm^2 .

f In the following figure the distance between points A and B = units.



3 Choose the correct answer:

7

a $\left| \frac{6-7}{2} \right|$ Z

- \in • \notin • \subset • $\not\subset$

b If A (2, 3) and B (6, 3), then the length of \overline{AB} is length units.

- 2 • 3 • 4 • 5

c $(-1)^7 + (-1)^6 =$

- 0 • -1 • 1 • -2

d $\{0\}$ N

- \in • \notin • \subset • $\not\subset$

e When tossing a die once and observing the upper face, then the probability of getting a number greater than 6 =

- \emptyset • 0 • $\frac{1}{6}$ • $\frac{1}{3}$

f The sum of the measures of the accumulative angles at the center of the circle =

- 0° • 180° • 90° • 360°

g If the set of substitution is $\{1, 2, 3, 4\}$, then the solution set of the equation $x + 6 = 10$ is

- $\{1\}$ • $\{2\}$ • $\{3\}$ • $\{4\}$

4 Answer the following:

20

- a Find the solution set in Z of the equation: $2x + 11 = 3$

.....

.....

.....

- b Use the distribution property to find the result of:

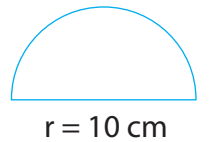
$$37 \times 17 + 37 \times (-17)$$

.....

.....

.....

- c Find the area of the opposite figure ($\pi \approx 3.14$)



.....

- d The following table shows the percentages of production of chickens in four farms within a month. Represent these data by circular sectors:

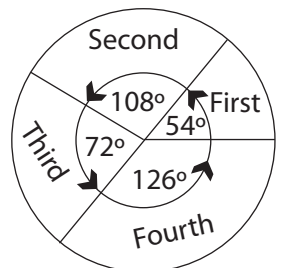
First	Second	Third	Fourth
15%	30%	20%	35%

.....

.....

.....

.....



1 Choose the correct answer:

a $Z^+ \cap Z^- = \dots\dots\dots$

• Z^+

• Z^-

• \emptyset

• N

b The greatest negative integer is $\dots\dots\dots$

• 0

• -1

• 1

• -100

c If $7x = -14$, then $x = \dots\dots\dots$

• 7

• -2

• -7

• -21

d The degree of the equation $x^3 - 4x^2 = 12$ is $\dots\dots\dots$

• 3rd

• 2nd

• 1st

• 4th

e The image of the point $(-3, 5)$ by translation $(x + 3, y - 5)$ is $\dots\dots\dots$

• $(6, 10)$

• $(0, 5)$

• $(0, 0)$

• $(3, 0)$

f When tossing a coin once, the probability of getting a head is $\dots\dots\dots$

• $\frac{1}{2}$

• 1

• $\frac{3}{4}$

• $\frac{1}{4}$

g In the opposite figure:

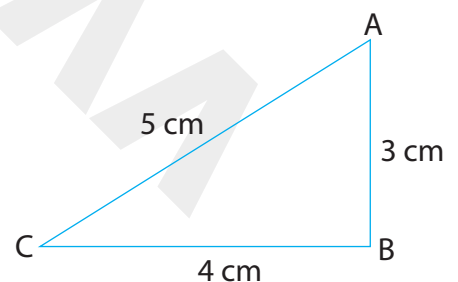
The area of $\triangle ABC = \dots\dots\dots \text{cm}^2$

• 12

• 6

• 10

• 7.5



2 Complete each of the following:

a The image of the point $(-2, -7)$ by translation $(x - 3, y + 4)$ is $\dots\dots\dots$.

b $|-24| \div (-8) = \dots\dots\dots$

c A cuboid, its dimensions are 3 cm, 4 cm and 5 cm, then its lateral area = $\dots\dots\dots \text{cm}^2$.

d If $2y = 8$, then $y + 3 = \dots\dots\dots$

e The smallest non-negative integer number is

f If the probability of selecting a successful student in a classroom is 0.7, then the probability of selecting a failed student is

7

3 Choose the correct answer:

a $Z^+ - Z^- = \dots\dots\dots$

- ☐ Z ☐ N ☐ \emptyset ☐ Z^+

b If $x = -1$, $y = 2$, then the value of $x + y = \dots\dots\dots$

- ☐ 2 ☐ 3 ☐ 1 ☐ -1

c All the following numbers satisfy the inequality $x > -3$ except

- ☐ 0 ☐ -1 ☐ -2 ☐ -4

d The multiplicative identity in \mathbf{Z} is

- ☐ zero ☐ 1 ☐ -1 ☐ 2

e The area of a circle with radius 10 cm = cm^2 .

($\pi \approx 3.14$)

- ☐ 31.4 ☐ 314 ☐ 3.14 ☐ .0314

f If A is an event of the sample space of a random experiment, then: $0 \leq P(A) \leq \dots\dots\dots$

- ☐ 0 ☐ 1 ☐ -1 ☐ 2

g The image of the point (4, 6) by translation $(x + 1, y - 3)$ is

- ☐ (5, 7) ☐ (6, 5) ☐ (2, 5) ☐ (5, 3)

4 Answer the following:

20

- a Find the result:

$$\frac{2^3 \times (-2)^4}{2^5}$$

.....

- b Find the solution set of the following inequality in Z :

$$2x + 1 \geq 5$$

Answer:

.....
.....
.....
.....

- c A box in the shape of a cuboid, its length is 10 cm, its width is 5 cm and its height is 8 cm. Find its lateral area and its total area.

Answer:

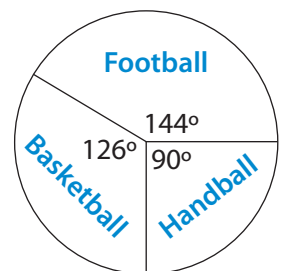
.....
.....
.....

- d The following table shows the percentages of the favorite sports in a school. Represent these data by the circular sectors.

Football	Basketball	Handball
40%	35%	25%

Answer:

.....
.....
.....
.....
.....



1 Choose the correct answer:

a $-7 \dots -2$

• $>$

• $<$

• $=$

• \leq

b If $x + 2 = |-5|$, then $x = \dots$

• -7

• 7

• 3

• -3

c $(-2)^3 > \dots$

• $(-2)^2$

• 3^2

• $(-3)^3$

• 3^3

d The smallest positive integer is \dots

• 0

• 1

• -1

• 2

e $Z - N = \dots$

• Z^+

• $\{0\}$

• Z^-

• 0

f If $P(A) = 1$, then A is called \dots event.

• a possible

• an impossible

• a certain

• otherwise

g If the edge length of a cube is 4 cm, then its lateral area is $\dots \text{cm}^2$

• 96

• 64

• 16

• 24

2 Complete each of the following:

a $9(4 + (-3)) = \dots \times \dots + \dots \times \dots = \dots$

b $-|-3| + 4 + (-8) = \dots$

c If $x \in \{2, -2\} \cap \{4, -2\}$, then $x = \dots$

d If the probability of occurrence of the event A is $\frac{5}{7}$, then the probability of non-occurrence of the event $A = \dots$

e The image of the point $(-3, 4)$ by translation $(0, -4)$ is

f The height of a cuboid whose lateral area is 120 cm^2 and its base dimensions are 4 cm and 6 cm = cm

7

3 Choose the correct answer:

a If $2x = |-8|$, then $x = \dots\dots\dots$

- ☐ -8 ☐ 8 ☐ 4 ☐ -4

b $(3)^8 \div (-3)^5 = \dots\dots\dots$

- ☐ $(3)^3$ ☐ $(-3)^{13}$ ☐ 3 ☐ $(-3)^3$

c If $\left| \frac{x}{3} \right| = 4$, then $x = \dots\dots\dots$

- ☐ ± 12 ☐ -12 ☐ 12 ☐ otherwise

d The solution set of inequality $2 \leq x < 3$, where $x \in \mathbb{N}$ is

- ☐ $\{5\}$ ☐ $\{2\}$ ☐ $\{2, 1.5\}$ ☐ $\{2, 3\}$

e A cube of edge length 6 cm , its total area = cm^2 .

- ☐ 36 ☐ 72 ☐ 144 ☐ 216

f If a circular sector represents $\frac{1}{3}$ of a circle, then the measure of its central angle =

- ☐ 120° ☐ 90° ☐ 60° ☐ 180°

g The probability of getting a number divisible by 3 when rolling a fair die once is

- ☐ $\frac{1}{2}$ ☐ $\frac{1}{3}$ ☐ $\frac{1}{6}$ ☐ $\frac{2}{3}$

4 Answer the following questions:

- a Find the solution set of the following inequality:

$$3x - 2 < 7 \quad x \in \mathbb{N}$$

Answer:

.....

.....

.....

.....

- b Use the properties of addition in \mathbb{Z} to find the result of:

$$(-116) + 190 + 116$$

(State the property used in each step.)

Answer:

.....

.....

.....

.....

- c In the coordinate plane, represent the points A (0 , 1), B (2 , 1) and C (2 , 4), then **find**:

1 The length of \overline{BC} .

2 The image of $\triangle ABC$ by translation (0 , 2)

Answer:

1

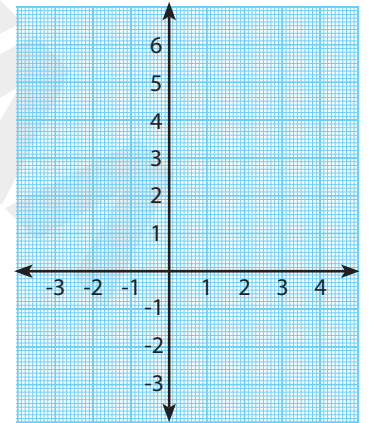
2

.....

.....

.....

.....



- c A box contains 8 white balls, and 12 red balls where all balls are identical.

If a ball is drawn randomly, calculate the probability of the following:

1 Drawing a white ball.

2 Drawing a red ball.

Answer:

1

2

1 Choose the correct answer:

a $\mathbb{Z}^+ \cup \{0\} = \dots\dots\dots$

• \mathbb{Z}^-

• \mathbb{N}

• \mathbb{Z}

• \mathbb{Z}^+

b If $2x = -4$, then $x \in \dots\dots\dots$

• \mathbb{N}

• \emptyset

• \mathbb{Z}^+

• \mathbb{Z}^-

c The circumference of the circle = $\dots\dots\dots \times \pi$

• r

• $2r$

• r^2

• $r + 2$

d A die is tossed once, then the probability of getting the number 3 = $\dots\dots\dots$

• 0

• $\frac{1}{6}$

• $\frac{3}{6}$

• 1

e The number which satisfies the inequality $x > -3$ is $\dots\dots\dots$

• -2

• -3

• -4

• -5

f The total surface area of a cube is 150 cm^2 , then its side length is $\dots\dots\dots \text{ cm}$.

• 25

• 4

• 5

• 6

g $2^5 \times 2^2 = \dots\dots\dots$

• 2^7

• 4^7

• 1

• 2^3

2 Complete each of the following:

a $\frac{2^3 \times 2^5}{2^2} = \frac{2^8}{2^2} = 2^6$

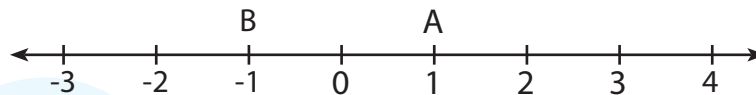
b The set of counting numbers $\mathbb{C} \subset \mathbb{N}$

c The probability of the impossible event = 0

d If $x - 7 = 9$, $x \in \mathbb{N}$, then $x = 16$

e The perimeter of the base of a cuboid is 10 cm and its height is 4 cm. Then its lateral area = 40 cm².

f In the following figure the distance between points A and B = 2 units.



3 Choose the correct answer:

7

a $\left| \frac{6-7}{2} \right|$ Z

- \in • \notin • \subset • $\not\subset$

b If A (2, 3) and B (6, 3), then the length of \overline{AB} is length units.

- 2 • 3 • 4 • 5

c $(-1)^7 + (-1)^6 =$

- 0 • -1 • 1 • -2

d $\{0\}$ N

- \in • \notin • \subset • $\not\subset$

e When tossing a die once and observing the upper face, then the probability of getting a number greater than 6 =

- \emptyset • 0 • $\frac{1}{6}$ • $\frac{1}{3}$

f The sum of the measures of the accumulative angles at the center of the circle =

- 0° • 180° • 90° • 360°

g If the set of substitution is {1, 2, 3, 4}, then the solution set of the equation $x + 6 = 10$ is

- {1} • {2} • {3} • {4}

4 Answer the following:

20

- a Find the solution set in Z of the equation: $2x + 11 = 3$

$$2x + 11 - 11 = 3 - 11$$

$$2x = -8$$

$$x = -\frac{8}{2}$$

$$x = -4$$

$$S.S. = \{-4\}$$

- b Use the distribution property to find the result of:

$$37 \times 17 + 37 \times (-17)$$

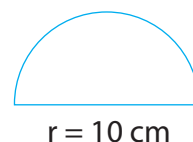
$$= 37 (17 + (-17))$$

$$= 37 \times 0$$

$$= 0$$

- c Find the area of the opposite figure ($\pi \approx 3.14$)

$$\text{The area of the figure} = \frac{1}{2} \times 3.14 \times (10)^2 = 157 \text{ cm}^2$$



- d The following table shows the percentages of production of chickens in four farms within a month. Represent these data by circular sectors:

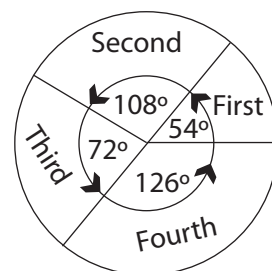
First	Second	Third	Fourth
15%	30%	20%	35%

$$\text{The measure angle of the first sector is } \frac{15}{100} \times 360^\circ = 54^\circ$$

$$\text{The measure angle of the second sector is } \frac{30}{100} \times 360^\circ = 108^\circ$$

$$\text{The measure angle of the third sector is } \frac{20}{100} \times 360^\circ = 72^\circ$$

$$\text{The measure angle of the fourth sector is } \frac{35}{100} \times 360^\circ = 126^\circ$$



1 Choose the correct answer:

a $Z^+ \cap Z^- = \dots\dots\dots$

• Z^+

• Z^-

• \emptyset

• N

b The greatest negative integer is $\dots\dots\dots$

• 0

• -1

• 1

• -100

c If $7x = -14$, then $x = \dots\dots\dots$

• 7

• -2

• -7

• -21

d The degree of the equation $x^3 - 4x^2 = 12$ is $\dots\dots\dots$

• 3rd

• 2nd

• 1st

• 4th

e The image of the point $(-3, 5)$ by translation $(x + 3, y - 5)$ is $\dots\dots\dots$

• $(6, 10)$

• $(0, 5)$

• $(0, 0)$

• $(3, 0)$

f When tossing a coin once, the probability of getting a head is $\dots\dots\dots$

• $\frac{1}{2}$

• 1

• $\frac{3}{4}$

• $\frac{1}{4}$

g In the opposite figure:

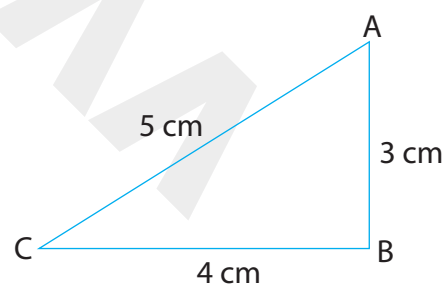
The area of $\triangle ABC = \dots\dots\dots \text{cm}^2$

• 12

• 6

• 10

• 7.5



2 Complete each of the following:

a The image of the point $(-2, -7)$ by translation $(x - 3, y + 4)$ is $(-5, -3)$.

b $|-24| \div (-8) = \underline{-3}$

c A cuboid, its dimensions are 3 cm, 4 cm and 5 cm, then its lateral area = 70 cm^2 .

d If $2y = 8$, then $y + 3 = \underline{7}$

e The smallest non-negative integer number is 0

f If the probability of selecting a successful student in a classroom is 0.7, then the probability of selecting a failed student is 0.3

7

3 Choose the correct answer:

a $Z^+ - Z^- = \dots\dots\dots$

- ☐ Z ☐ N ☐ \emptyset ☒ Z^+

b If $x = -1$, $y = 2$, then the value of $x + y = \dots\dots\dots$

- ☐ 2 ☐ 3 ☒ 1 ☐ -1

c All the following numbers satisfy the inequality $x > -3$ except $\dots\dots\dots$

- ☐ 0 ☐ -1 ☐ -2 ☒ -4

d The multiplicative identity in \mathbf{Z} is $\dots\dots\dots$

- ☐ zero ☒ 1 ☐ -1 ☐ 2

e The area of a circle with radius 10 cm = $\dots\dots\dots$ cm².

($\pi \approx 3.14$)

- ☐ 31.4 ☒ 314 ☐ 3.14 ☐ .0314

f If A is an event of the sample space of a random experiment, then: $0 \leq P(A) \leq \dots\dots\dots$

- ☐ 0 ☒ 1 ☐ -1 ☐ 2

g The image of the point (4, 6) by translation $(x + 1, y - 3)$ is $\dots\dots\dots$

- ☐ (5, 7) ☐ (6, 5) ☐ (2, 5) ☒ (5, 3)

4 Answer the following:

- a Find the result:

$$\frac{2^3 \times (-2)^4}{2^5}$$

$$= \frac{2^3 \times 2^4}{2^5} = \frac{2^7}{2^5} = 2^2 = 4$$

- b Find the solution set of the following inequality in Z :

$$2x + 1 \geq 5$$

Answer: $2x + 1 \geq 5$

$$2x + 1 - 1 \geq 5 - 1$$

$$2x \geq 4$$

$$x \geq 2$$

$$S.S = \{ 2, 3, 4, \dots \}$$

- c A box in the shape of a cuboid, its length is 10 cm, its width is 5 cm and its height is 8 cm. **Find** its lateral area and its total area.

Answer:

$$\text{The lateral area} = 2 (L + W) \times h = 2 (10 + 5) \times 8 = 30 \times 8 = 240 \text{ cm}^2$$

$$\text{The area of the two bases} = 2 \times L \times W = 2 \times 10 \times 5 = 100 \text{ cm}^2$$

$$\text{The total area} = \text{The lateral surface area} + \text{the area of two bases} = 240 + 100 = 340 \text{ cm}^2$$

- d The following table shows the percentages of the favorite sports in a school. Represent these data by the circular sectors.

Football	Basketball	Handball
40%	35%	25%

Answer:

The measure of the central angle of football

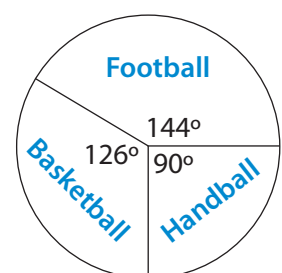
$$= \frac{40}{100} \times 360^\circ = 144^\circ$$

The measure of the central angle of basketball

$$= \frac{35}{100} \times 360^\circ = 126^\circ$$

The measure of the central angle of handball

$$= \frac{25}{100} \times 360^\circ = 90^\circ$$



1 Choose the correct answer:

a $-7 \dots -2$

• $>$

• $<$

• $=$

• \leq

b If $x + 2 = |-5|$, then $x = \dots$

• -7

• 7

• 3

• -3

c $(-2)^3 > \dots$

• $(-2)^2$

• 3^2

• $(-3)^3$

• 3^3

d The smallest positive integer is \dots

• 0

• 1

• -1

• 2

e $Z - N = \dots$

• Z^+

• $\{0\}$

• Z^-

• 0

f If $P(A) = 1$, then A is called \dots event.

• a possible

• an impossible

• a certain

• otherwise

g If the edge length of a cube is 4 cm, then its lateral area is \dots cm^2

• 96

• 64

• 16

• 24

2 Complete each of the following:

a $9(4 + (-3)) = \underline{9} \times \underline{4} + \underline{9} \times \underline{-3} = \underline{9}$

b $-|-3| + 4 + (-8) = \underline{-7}$

c If $x \in \{2, -2\} \cap \{4, -2\}$, then $x = \underline{-2}$

d If the probability of occurrence of the event A is $\frac{5}{7}$, then the probability of non-occurrence of the event $A = \underline{\frac{2}{7}}$

e The image of the point $(-3, 4)$ by translation $(0, -4)$ is $(-3, 0)$.

f The height of a cuboid whose lateral area is 120 cm^2 and its base dimensions are 4 cm and $6 \text{ cm} = 6 \text{ cm}$

3 Choose the correct answer:

7

a If $2x = |-8|$, then $x = \dots\dots\dots$

- ☐ -8 ☐ 8 ☒ 4 ☐ -4

b $(3)^8 \div (-3)^5 = \dots\dots\dots$

- ☐ $(3)^3$ ☐ $(-3)^{13}$ ☐ 3 ☒ $(-3)^3$

c If $\left|\frac{x}{3}\right| = 4$, then $x = \dots\dots\dots$

- ☒ ± 12 ☐ -12 ☐ 12 ☐ otherwise

d The solution set of inequality $2 \leq x < 3$, where $x \in \mathbb{N}$ is $\dots\dots\dots$

- ☐ $\{5\}$ ☒ $\{2\}$ ☐ $\{2, 1.5\}$ ☐ $\{2, 3\}$

e A cube of edge length 6 cm , its total area = $\dots\dots\dots \text{ cm}^2$.

- ☐ 36 ☐ 72 ☐ 144 ☒ 216

f If a circular sector represents $\frac{1}{3}$ of a circle, then the measure of its central angle = $\dots\dots\dots$

- ☒ 120° ☐ 90° ☐ 60° ☐ 180°

g The probability of getting a number divisible by 3 when rolling a fair die once is $\dots\dots\dots$

- ☐ $\frac{1}{2}$ ☒ $\frac{1}{3}$ ☐ $\frac{1}{6}$ ☐ $\frac{2}{3}$

4 Answer the following questions:

- a Find the solution set of the following inequality:

$$3x - 2 < 7 \quad x \in \mathbb{N}$$

Answer:

$$3x - 2 + 2 < 7 + 2$$

$$3x < 9$$

$$x < 3$$

$$\text{S.S.} = \{2, 1, 0\}$$

- b Use the properties of addition in \mathbb{Z} to find the result of:

$$(-116) + 190 + 116 \quad (\text{State the property used in each step.})$$

Answer:

$$-116 + 116 + 190$$

(commutative property)

$$= [-116 + 116] + 190$$

(associative and additive inverse)

$$= 0 + 190$$

(the additive neutral)

$$= 190$$

(closure property)

- c In the coordinate plane, represent the points A (0, 1), B (2, 1) and C (2, 4), then **find**:

- 1 The length of \overline{BC} .
- 2 The image of $\triangle ABC$ by translation (0, 2)

Answer:

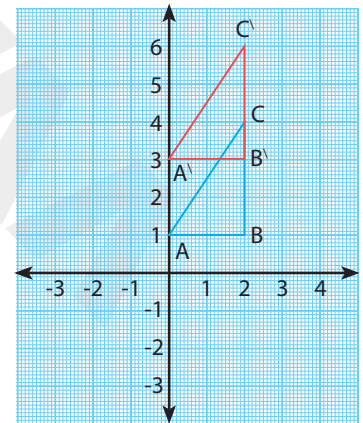
- 1 The length of $\overline{BC} = 3$ units length

- 2 The image of $\triangle ABC$ by translation (0, 2) is $A'B'C'$

$$\text{Such that } A(0, 1) \xrightarrow{(0, 2)} A'(0, 3)$$

$$B(2, 1) \xrightarrow{(0, 2)} B'(2, 3)$$

$$C(2, 4) \xrightarrow{(0, 2)} C'(2, 6)$$



- c A box contains 8 white balls, and 12 red balls where all balls are identical.

If a ball is drawn randomly, calculate the probability of the following:

- 1 Drawing a white ball.
- 2 Drawing a red ball.

Answer:

- 1 The probability of drawing a white ball $= \frac{8}{20} = \frac{2}{5}$

- 2 The probability of drawing a red ball $= \frac{12}{20} = \frac{3}{5}$

Model Tests from the School Book

Model Test

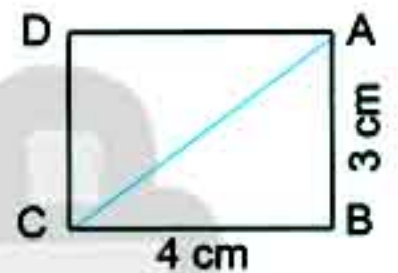
1

1 Choose the correct answer:

- 1) $(-1)^8 + (-1)^9 = \dots\dots\dots$ (0 or -1 or 1 or -2)
- 2) The image of the point $(-3, 4)$ by translation $(x, y - 4)$ is $\dots\dots\dots$
 $((-3, 0)$ or $(-7, 4)$ or $(-3, 8)$ or $(-1, 4))$
- 3) $\{0\} \dots\dots\dots \mathbb{N}$ (\in or \notin or \subset or $\not\subset$)
- 4) When tossing a die once and observing the upper face, then the probability of getting a number greater than 6 = $\dots\dots\dots$ (\emptyset or 0 or $\frac{1}{6}$ or $\frac{1}{3}$)

2 Complete the following:

- 1) $\left| \frac{5-11}{3} \right| \dots\dots\dots \mathbb{Z}$ by using (\in or \notin or \subset or $\not\subset$)
- 2) If $x + 6 = 2$ where $x \in \mathbb{Z}$, then $x = \dots\dots\dots$
- 3) In the opposite figure ABCD is a rectangle, then the area of $\triangle ABC = \dots\dots\dots \text{cm}^2$.
- 4) A box contains 5 white balls, 3 blue balls and 8 red balls. All of the balls are identical. If a ball is chosen randomly when you close eyes, then the probability that the chosen ball is red = $\dots\dots\dots$



- 3 a) Find the result: $(4 \times 3^2) \div 3^2 - (7 \times 3) \dots\dots\dots$
- b) Find the solution set of the inequality: $x - 2 \geq 3$ where $x \in \mathbb{Z} \dots\dots\dots$

- 4 a) A cuboid box with a square base of side length 10 cm and its height is 7 cm.
Find the lateral surface area of the box.

- b) The circumference of a circle is 88 cm, find its area.

- 5 a) Find the solution set of the equation $3x + 9 = 3$ where $x \in \mathbb{Z}$.
- b) The following table shows the percentage of the production of a factory of house electric sets.

Types of the sets	Washing machine	Oven	Heater	Mixer
Percentage of production	30%	40%	15%	15%

Represent these data using the circular sectors.

Model Test

2

1 Choose the correct answer:

- 1) If $2x = 6$, then $x \in \dots\dots\dots$ (\mathbb{N} or \emptyset or \mathbb{Z}^+ or \mathbb{Z}^-)
 2) The circumference of the circle = $\dots\dots\dots \times \pi$ (r or $2r$ or r^2 or $r+2$)
 3) A die is tossed once, then the probability of getting the number 5 = $\dots\dots\dots$ (0 or $\frac{1}{6}$ or $\frac{5}{6}$ or 1)
 4) The number which satisfies the inequality $x > -2$ is $\dots\dots\dots$ (-1 or -2 or -3 or -4)

2 Complete the following:

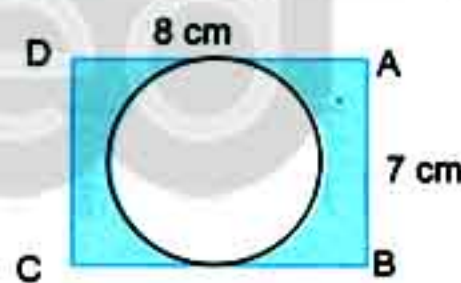
- 1) $\frac{2^3 \times 2^5}{2^2} = \dots\dots\dots$
 2) The set of the counting numbers (\mathbb{C}) $\dots\dots\dots \mathbb{N}$
 3) The total surface area of a cube is 150 cm^2 , then its side length is $\dots\dots\dots \text{ cm}$.
 4) The result of a mathematics test of October for 6th grade in a school is recorded in the following table:

Excellent	Very good	Good	Weak
8	18	16	6

Then, the probability that a student obtains good = $\dots\dots\dots$

- 3 1) Find the value of $(6 \times -5) - ((2 \times 3) + 3)$
 2) Find the solution set of the inequality $x - 2 \geq 3$ where $x \in \mathbb{Z}$, then represent the solution on the number line.

- 4 a) Find the solution set of the equation $2x + 9 = 5$ where, $x \in \mathbb{Z}$.
 b) In the opposite figure ABCD is a rectangle, its length is 8 cm and its width is 7 cm. Calculate the area of the shaded part.



- 5 a) On the coordinate plane, determine the following points A (2,3), B (4,3) and C (4,7) then find:
 1) The length of BC = $\dots\dots\dots$ length units.
 2) The image of ΔABC by translation $(0, -4)$.
 b) The following table shows the percentage of a number of students who participated in school activities.

Activity	Cultural	Sports	Social	Arts
Percentage of students	5%	45%	15%	35%

Represent these previous data by the circular sectors.

Model Test

3

(for students with special needs)

1 Complete the following:

1) $|3| = \dots\dots\dots$

2) The probability of the impossible event = $\dots\dots\dots$ 3) If $x + 2 = 3$, $x \in \mathbb{N}$, then $x = \dots\dots\dots$ 4) The perimeter of the base of a cuboid is 10 cm, its height is 4 cm. Then its lateral area = $\dots\dots \text{cm}^2$.

2 Choose the correct answer:

1) $2^5 \times 2^2 = \dots\dots\dots$

(2^7 or 4^7 or 1)2) The surface area of a circle = $\pi \times \dots\dots\dots$ (r or r^2 or $2r$)

3) $\mathbb{Z}^+ \cup \{0\} = \dots\dots\dots$

(\mathbb{Z}^- or \mathbb{N} or \mathbb{Z})4) When tossing a die once, then probability of getting an odd number = $\dots\dots\dots$ ($\frac{1}{6}$ or $\frac{1}{3}$ or $\frac{1}{2}$)

3 Put (✓) true or (X) false:

1) $|-5| + 5 = 10$

()

2) If $3x = 9$, then $x = -3$

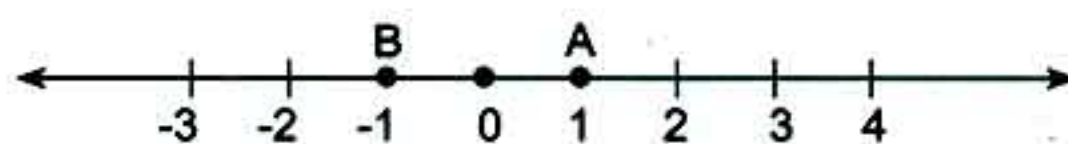
()

3) The probability of the sure event = zero.

()

4) In the following figure the distance between points A and B = 2 units.

()



4 Join from column (A) to column (B):

	A	B
1	The sum of the measures of the angles of the sectors about the centre of the circle =	\in
2	$2 \dots\dots\dots \mathbb{Z}^+$	360°
3	The solution set of the inequality $x + 2 < 5, x \in \mathbb{N}$, is	$(4, 4)$
4	The image of the point $(3, 2)$ by translation $(1, 2)$ is	$\{0, 1, 2\}$

5 Complete the following:

- a) The length of the edges of a cube is 4 cm. Calculate its total area and lateral area:

The total area = $6 \times \dots\dots\dots$

The lateral area = $4 \times \dots\dots\dots$

- b) Find the result: $\frac{2^3 \times (-2)^4}{2^5} = \frac{2^{\dots\dots\dots}}{2^5} = 2^{\dots\dots\dots} = \dots\dots\dots$

24 Examinations from Different Governorates 2018/2019

(Note: Show your steps at the 3rd question in each exam.)

1

Cairo - EL-Sahel Educational Zone

1 Choose the correct answer:

- 1) $\mathbb{Z}^- \cap \mathbb{N} = \dots\dots\dots$ (\mathbb{Z} or \mathbb{N} or \mathbb{Z}^- or \emptyset)
- 2) The additive inverse of $(-3)^2$ is $\dots\dots\dots$ ($(3)^2$ or $(-2)^3$ or $-(3)^2$ or $\frac{1}{9}$)
- 3) The equation $x^2 + 1 = 3$ is of the $\dots\dots\dots$ degree. (first or second or third or fourth)
- 4) If a fair die is thrown once, then the probability of getting the number 5 equals $\dots\dots\dots$. ($\frac{5}{6}$ or Zero or $\frac{1}{6}$ or 1)
- 5) If $a = 2$, $b = -4$, then $3ab = \dots\dots\dots$ (-10 or -24 or 2 or -12)
- 6) If A (2, 3) and B (6, 3), then the length of \overline{AB} is $\dots\dots\dots$ length units. (2 or 3 or 4 or 5)
- 7) A circle of diameter length 10 cm, its area = $\dots\dots\dots \pi \text{ cm}^2$. (100 or 50 or 25 or 5)
- 8) If $x = -2$, $y = |-3|$, then $x + y = \dots\dots\dots$ (-5 or 1 or 5 or 6)
- 9) The image of the point $\dots\dots\dots$ by translation $(x - 3, y + 4)$ is $(-5, -3)$.
($(-2, -7)$ or $(-2, 7)$ or $(-8, 7)$ or $(-8, 15)$)
- 10) $2^3 \times 2^2 = \dots\dots\dots$ (4^6 or 4^5 or 2^6 or 2^5)
- 11) If the probability of success of a student is 0.8, then the probability of his failure is $\dots\dots\dots$. (80% or 0.4 or 1 or 0.2)
- 12) If the set of substitution is $\{1, 2, 3, 4\}$, then the solution set of the equation $x + 6 = 10$ is $\dots\dots\dots$ ($\{1\}$ or $\{2\}$ or $\{3\}$ or $\{4\}$)

2 Complete each of the following:

- 13) A cube, the area of its face = 9 cm^2 , then its total surface area = $\dots\dots\dots \text{ cm}^2$
- 14) $\mathbb{Z} - \mathbb{Z}^+ = \dots\dots\dots$
- 15) The image of the point $(-2, 5)$ by translation $(1, -3)$ is $\dots\dots\dots$.

- 16) If $2x = 6$ then $6x = \dots\dots\dots$.
- 17) The sum of measures of the angles of the sectors around the centre of the circle = $\dots\dots\dots^\circ$.
- 18) If the perimeter of the base of a cuboid is 10 cm, its height is 5 cm, then its lateral area = $\dots\dots\dots \text{cm}^2$.
- 19) If $-x > 3$, then $x < \dots\dots\dots$.
- 20) The total area of a cuboid is 132 cm^2 and its lateral area is 112 cm^2 , then the area of its base is $\dots\dots\dots \text{cm}^2$.

3 Answer the following questions:

- 21) Find the solution set of the equation $3x - 7 = 11$, where $x \in \mathbb{Z}$.
- 22) A circle of diameter length 14 cm is divided into 7 equal circular sectors, calculate the surface area of one sector where $(\pi = \frac{22}{7})$.
- 23) Find the solution set of the inequality $x - 2 \leq 3$ where $x \in \mathbb{N}$.
- 24) If the perimeter of the base of a cube is 28 cm:
- Calculate its lateral area.
 - Calculate its total surface area.
- 25) The following table shows the percentages of a number of students participating in the school activities.

Activities	Arts	Sports	Computer
Percentages	25%	40%	35%

Represent these data by circular sectors (pie chart).

2

Cairo - Heliopolis Directorate - St. Joseph's School

1 Choose the correct answer:

- 1) $\mathbb{Z} - \mathbb{Z} = \dots\dots\dots$ (\mathbb{Z} or \mathbb{Z}^+ or $\{0\}$ or \mathbb{N})
- 2) $2^3 + 1^3 = \dots\dots\dots$ (3^3 or 3^6 or 3^2 or 3^9)
- 3) The image of the point $(-3, -3)$ by translation 3 units in the positive direction of y-axis is $\dots\dots\dots$ ($(0, 0)$ or $(0, -3)$ or $(-3, 0)$ or $(-3, 3)$)
- 4) The measure of an angle of the sector which represents third of the circle = $\dots\dots\dots^\circ$ (30 or 60 or 120 or 180)
- 5) The number that satisfies the inequality $x > -2$ is $\dots\dots\dots$ (-1 or -2 or -3 or -4)
- 6) If $a < b$, then $-3a \dots\dots\dots -3b$ ($<$ or $>$ or $=$ or \leq)
- 7) When tossing a fair die once, then the probability of getting the number 3 is $\dots\dots\dots$ ($\frac{1}{2}$ or $\frac{1}{3}$ or $\frac{1}{6}$ or 1)
- 8) If $2x + |-3| = 1$, then $x = \dots\dots\dots$ (2 or -1 or -4 or 8)
- 9) The lateral area of the cube of edge length 10 cm is $\dots\dots\dots \text{cm}^2$. (40 or 400 or 600 or 1000)
- 10) The additive inverse of $(-1)^6$ is $\dots\dots\dots$ ($(1)^6$ or $(-1)^7$ or $(-1)^8$ or $(-1)^0$)
- 11) $|-4| + (-2) \dots\dots\dots \mathbb{N}$ (\in or \notin or \subset or \supset)
- 12) The circumference of the circle = $\dots\dots\dots$ (πr or $2\pi r$ or πr^2 or $2\pi r^2$)

2 Complete the following:

- 13) The lateral area of the cuboid = the perimeter of base $\times \dots\dots\dots$
- 14) The greatest negative integer is $\dots\dots\dots$
- 15) The probability of the impossible event = $\dots\dots\dots$
- 16) $\frac{(-3)^7 \times (-3)^2}{(-3)^6} = (-3)^x$, then $x = \dots\dots\dots$
- 17) If A $(-3, 2)$ and B $(-3, -4)$, then the length of $\overline{AB} = \dots\dots\dots$ length unit(s).
- 18) $3 \times (-5) = (-5) \times 3$ is called $\dots\dots\dots$ property
- 19) $\{x : x \in \mathbb{Z}, -2 < x \leq 1\} = \dots\dots\dots$ in listing method.
- 20) The image of the point $(0, -2)$ by translation $(x - 3, y + 2)$ is $\dots\dots\dots$

3 Answer the following questions:

21) Find the solution set in \mathbb{Z} of the equation: $2x + 11 = 3$

.....

.....

22) Use the properties of addition and multiplication to find the result of:
 $37 \times 17 + 37 \times (-17)$

.....

.....

23) A carpet in the shape of a circle of radius length 3.5 m. If the price of one metre square of this carpet is 100 pounds, then find the price of the whole carpet. ($\pi \approx \frac{22}{7}$)

.....

.....

24) Find the total area of a cuboid box of dimensions 3 cm, 2 cm and 6 cm.

.....

.....

25) The following table shows the percentages of a number of students participating in some favourite school activities:

Activities	Sports	Reading	Music
Percentages	25%	35%	40%

Represent these data by a pie chart.

3

Cairo - El-Sayed Aisha - Rod El-Farag Educational Zone

1 Choose the correct answer:

- 1) $-5 \dots \mathbb{Z}^+$ (\in or \notin or \subset or \supset)
- 2) If $2x = 8$, then $x + 1 = \dots$ (4 or 2 or 16 or 5)
- 3) A circle of diameter 8 cm, its area = $\dots \pi \text{ cm}^2$ (4 or 8 or 16 or 64)
- 4) If $a = -3$, $b = 2$, then $(a)^b = \dots$ (-6 or 9 or -9 or -8)
- 5) $(-1)^{13} + (-1)^{10} = \dots$ (0 or 2 or 1 or -2)
- 6) The number that satisfies the inequality $x > -4$ is \dots (-5 or -6 or -4 or -3)
- 7) If the area of one face of a cube is 9 cm^2 , then its total area = $\dots \text{ cm}^2$. (12 or 27 or 36 or 54)
- 8) The probability of the impossible event is \dots (0 or 1 or -1 or 2)
- 9) If A (2, 7), B (2, 3), then the length of $\overline{AB} = \dots$ units. (3 or 4 or 5 or 7)
- 10) $9^7 + 9^5 = \dots$ (9^{14} or 9^2 or 9^{zero} or 9^{35})
- 11) The equation $3x^3 - 6 = 14$ is of the \dots degree. (first or second or third or fourth)
- 12) The measure of the angle of the circular sector which represents $\frac{1}{4}$ from the area of a circle is \dots (30° or 60° or 90° or 45°)

2 Complete the following:

- 13) The image of the point (-1, 4) by translation $(x + 1, y - 3)$ is \dots .
- 14) $\mathbb{Z}^+ \cap \mathbb{Z}^- = \dots$
- 15) A fair die is thrown once, then the probability of getting the number 5 is \dots
- 16) The lateral area of the cuboid = perimeter of base $\times \dots$
- 17) $\frac{(-2)^7 \times (-2)^5}{-2^{10}} = \dots$
- 18) The sum edge lengths of cube is 48 cm, then its lateral area = $\dots \text{ cm}^2$.
- 19) If $x = -2$, $y = |4|$, then $xy = \dots$
- 20) The cuboid of lateral area 120 cm^2 and perimeter base 20 cm, its height = $\dots \text{ cm}$.

3 Answer the following questions:

21) Use the distributive property to find: $32 \times 117 - 32 \times 17$

.....

.....

22) Find the S.S. of the inequality $2x - 2 \geq 4$, where $x \in \mathbb{Z}$.

.....

.....


23) A cuboid box with a square base of side length 10 cm and its height is 6 cm.

Find its lateral area and total area.

.....

.....

24) In the Cartesian coordinate plane locate the points A (1, 1), B (-3, -1), C (0, -2), then draw the image of $\triangle ABC$ by translation $(x + 5, y - 1)$ on graph.



25) From the following table:

Farm	1 st	2 nd	3 rd	4 th
Percentage of the production	40%	25%	20%	15%

Represent these data by a pie chart.

.....

.....

.....

4

Cairo - Al-Zeitoun Educational Administration - Gomhoria Language School

1 Choose the correct answer:

- 1) $(-1)^3 \dots\dots\dots (3)^{\text{zero}}$ ($<$ or $=$ or $>$ or \geq)
- 2) $|-5| + 4 \dots\dots\dots \mathbb{Z}$ (\in or \notin or \subset or \subsetneq)
- 3) The smallest non-negative number is $\dots\dots\dots$ (1 or 0 or -1 or -2)
- 4) $x + 1 = 7$ is of the $\dots\dots\dots$ degree (zero or 1st or 2nd or 3rd)
- 5) The solution set of the inequality $-2 \leq x < -1$ is $\dots\dots\dots$,
($\{-2, -1\}$ or $\{-1\}$ or $\{-2\}$ or \emptyset)
- 6) The additive inverse of $|-3|$ is $\dots\dots\dots$ (0 or 3 or -1 or -3)
- 7) $\frac{25-5}{4} \dots\dots\dots \mathbb{Z}$. (\in or \notin or \subset or \subsetneq)
- 8) The image of the point $(4, -2)$ by translation $(x + 2, y - 1)$ is $\dots\dots\dots$
($(4, -2)$ or $(2, -1)$ or $(6, -3)$ or $(-2, -1)$)
- 9) A circle of diameter 10 cm, its area = $\dots\dots\dots \pi \text{ cm}^2$. (25 or 100 or 3.14 or 31.4)
- 10) The lateral area of a cuboid of length 3 cm, width 2 cm and height 4 cm
is $\dots\dots\dots \text{cm}^2$ (20 or 24 or 40 or 52)
- 11) If the probability of the pupils who succeeded in a classroom is 0.7, then the
probability of the pupils who are expected to fail is $\dots\dots\dots$
(0.3 or 0.1 or 12 or 28)
- 12) $P(\emptyset) = \dots\dots\dots$ (1 or 0 or $\frac{1}{2}$ or $\frac{5}{3}$)

2 Complete the following:

- 13) The solution set of inequality $x - 1 < 0$ in \mathbb{N} is $\dots\dots\dots$
- 14) $\mathbb{Z}^+ - \mathbb{Z}^- = \dots\dots\dots$
- 15) A circle its circumference is 88 cm, then its radius length = $\dots\dots\dots$ cm. ($\pi \approx \frac{22}{7}$)
- 16) $\frac{2^2 \times 2^5}{2^3} = \dots\dots\dots$
- 17) A cube of volume 1000 cm^3 , its side length is $\dots\dots\dots$ cm.
- 18) Having A $(-2, 1)$ and B $(3, 1)$, then the length of $\overline{AB} = \dots\dots\dots$ length unit(s).
- 19) The probability of the certain event = $\dots\dots\dots$
- 20) If the area of one face of a cube is 9 cm^2 , then its total area = $\dots\dots\dots$

3 Answer the following questions:

21) Use the distribution property to find: $3 \times (-2) + 3 \times 5$

.....

.....

.....

22) Find the solution set in \mathbb{N} : $3x - 2 = -17$

.....

.....

.....

23) The sum of edge lengths of a cube is 144 cm. Find its lateral area and its total area.

.....

.....

.....

24) Find the area of the shaded part: $(\pi \approx \frac{22}{7})$

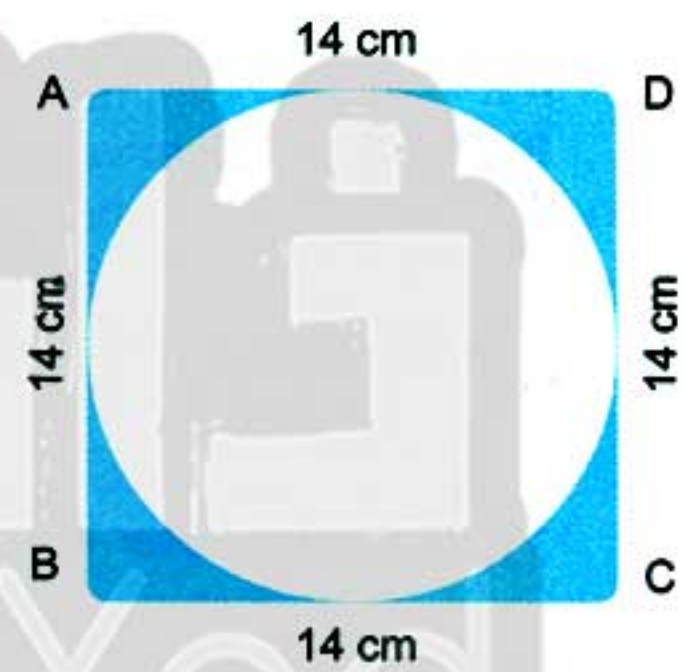
.....

.....

.....

.....

.....



25) The following table shows the number of students participating in school activities.

Activities	Cultural	Sports	Social	Arts
Percentages	25%	50%	15%	10%

Represent these data by a pie chart.

5 Cairo - El-Marg Educational Directorate - El-Shams Language School

1 Choose the correct answer:

- 1) When tossing a coin once, then the probability of getting a head is
(0 or 1 or 0.5)
- 2) If the area of one face of a cube is 9 cm^2 , then its total surface area is cm^2
(36 or 54 or 81)
- 3) $\mathbb{Z}^+ \cap \mathbb{Z}^- = \dots\dots\dots$
(\mathbb{Z} or \emptyset or \mathbb{Z})
- 4) The measure of the central angle of the circular sector which represents $\frac{1}{12}$ from the area of the circle =
(90° or 60° or 30°)
- 5) $(-1)^8 + (-1)^9 + (-1)^{\text{zero}} = \dots\dots\dots$
(-1 or 1 or 0)
- 6) If a dice is tossed once, then the probability of getting a prime number =
($\frac{1}{3}$ or $\frac{1}{2}$ or 1)
- 7) If $4x = 24$, $x \in \mathbb{Z}$, then $x = \dots\dots\dots$
(12 or 24 or 6)
- 8) The multiplicative neutral element in \mathbb{Z} is
(0 or 1 or 2)
- 9) $|-5| + 3 \dots\dots\dots \mathbb{Z}$
(\in or \subset or \notin)
- 10) The image of the point $(-1, 2)$ by translation $(-2, 3)$ is
($(0, 5)$ or $(1, 3)$ or $(-3, 5)$)
- 11) If the diameter length of a circle is 20 cm, then its area = cm^2 . where $(\pi = 3.14)$
(314 or 3.14 or 0.314)
- 12) $5 \times |-4| = \dots\dots\dots$
(20 or -20 or 9)
- 13) $5^7 + 5^5 = \dots\dots\dots$
(5^{12} or 5^2 or 5^0)
- 14) $\emptyset \dots\dots\dots \{a, b\}$
(\in or \subset or \notin)

2 Complete the following:

- 15) $3 \times (-2) = (-2) \times 3$ is called property.
- 16) $(-4) \times [(4) + (-4)] = \dots\dots\dots$
- 17) If A (2, 4) and B (2, -1), then the length of $\overline{AB} = \dots\dots\dots$ units.
- 18) If the sum of edge lengths of a cube is 96 cm, then its lateral area = cm^2 .
- 19) If the equation: $x^2 - 3 = 6$ is of the degree.
- 20) If $x \in \{2, -2\} \cap \{4, -2\}$, then $x = \dots\dots\dots$

21) $\frac{5^3 \times 5^4}{5^7} = \dots\dots\dots$

22) If the probability of the appearance of the event A is $\frac{5}{7}$, then the probability of the non-appearance of the event A =

3 Answer the following questions:

23) a) Find the solution set in \mathbb{Z} of the equation: $2x + 1 = -9$

.....
.....

b) Find the solution set in \mathbb{Z} of the inequality: $3x - 2 \leq 7$

.....
.....

24) A cuboid its length is 6 cm, its width is 4 cm and its height is 8 cm. Find its lateral area and its total area.

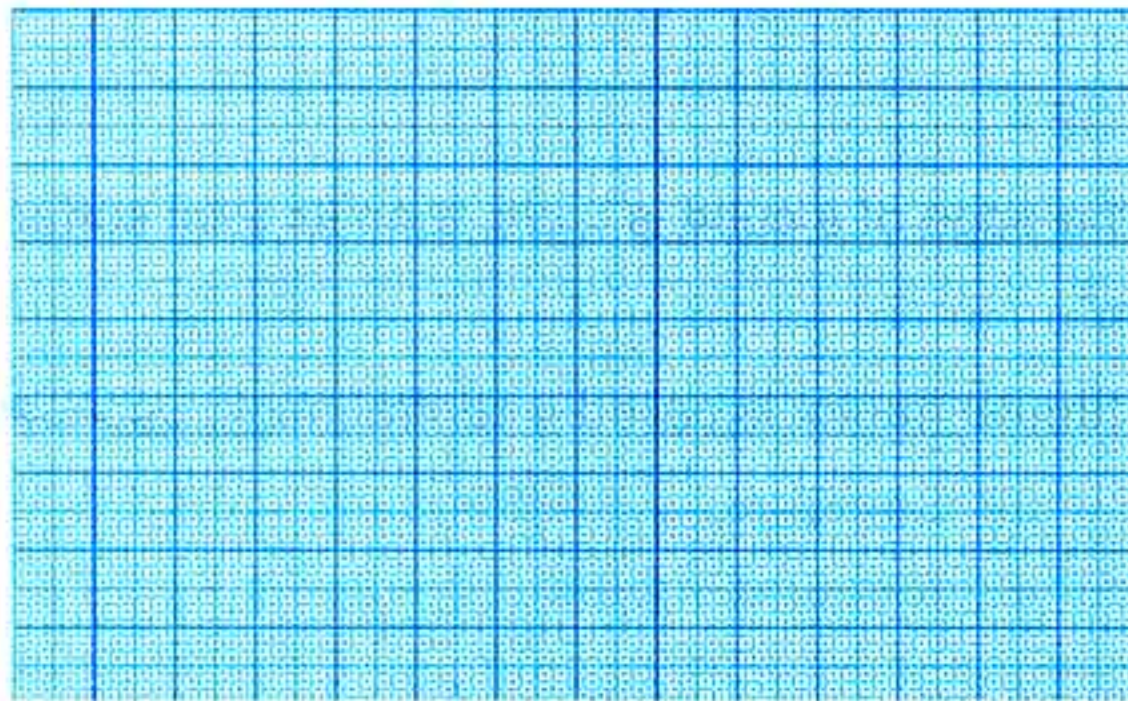
.....
.....

25) The following table shows the percentages of the favourite sport for the pupils in one of the schools:

Favourite sports	Football	Handball	Basketball
Percentage	50%	30%	20%

Represent these data by circular sectors.

26) On the coordinate plane, determine the points A (2 , 2), B (1, 0), C(3 , 0) , D (4 , 2), then find its image by translation (x, y + 4) and what is the name of the shape ABCD?



6

Giza - 6th October Directorate - Sun Gate L.Schools

1 Choose the correct answer from those given:

- 1) The integer number which is included between -2 and 3 is (3 or -3 or -4 or -1)
- 2) $\frac{-5}{7}$ \mathbb{Z} (\notin or \subset or $\not\subset$ or \in)
- 3) $(-1)^2 + 1 =$ (-2 or 0 or 1 or 2)
- 4) The image of the point $(-3, 4)$ by translation $(0, -4)$ is
[$(-3, 0)$ or $(-7, 4)$ or $(-3, 8)$ or $(-1, 4)$]
- 5) $\{\text{Zero}\} \subset$ (\mathbb{Z}^+ or \mathbb{Z} or \emptyset or \mathbb{Z})
- 6) A cube of edge length 6 cm, its total area = cm^2 (36 or 72 or 144 or 216)
- 7) A die is thrown once, then the probability of getting the number $5 =$
(0 or $\frac{1}{6}$ or $\frac{5}{6}$ or 1)
- 8) If the length of the radius of a circle is 10 cm, then its surface area equals cm^2 . ($\pi \approx 3.14$) (3.14 or 31.4 or 314 or 3140)
- 9) If $x - 1 = 2$, then $x =$ where $x \in \mathbb{N}$ (3 or 1 or -1 or -3)
- 10) $|-7| + 7 =$ (-14 or zero or 7 or 14)
- 11) If the total area of a cube is 600 cm^2 , then its edge length = cm
(5 or 10 or 6 or 100)
- 12) The measure of the angle for the circular sector of half a circle is
(90° or 120° or 180° or 270°)

2 Complete each of the following:

- 13) The probability of the impossible event =
- 14) $\mathbb{Z}^+ \cap \mathbb{Z}^- =$
- 15) $32 \times 85 + 15 \times 32 =$
- 16) If the length of the edge of a cube is 4 cm, then its total surface area equals cm^2 .
- 17) The angle of a circular sector is called a central angle because its vertex is of the circle.

18) The solution set of the inequality: $x + 1 < 5$, $x \in \mathbb{N}$ is

19) If $x \in \{2, -3\} \cap \{5, -3\}$, then $x = \dots\dots\dots$

20) The lateral area of a cuboid =

3 Answer the following questions:

21) Find the result of each of the following:

a) $(-5) \times [7 + (-5)]$

b) $\frac{7^4 \times 7^5}{7^7}$

22) Find the solution set of the inequality: $2x - 3 < 1$ where $x \in \mathbb{N}$ and represent it on the number line.

23) Find the solution set, where $x \in \mathbb{Z}$: $x + 4 > 5$.

24) In the coordinate plane, represent the points A (0, 1), B (2, 1) and C (2, 4), then find:

a) The length of \overline{BC} .

b) The image of $\triangle ABC$ by translation (0, 2).

25) The following table shows the number of students participating in some activities:

Activities	Cultural	Sports	Social	Arts
Percentages	10%	40%	15%	35%

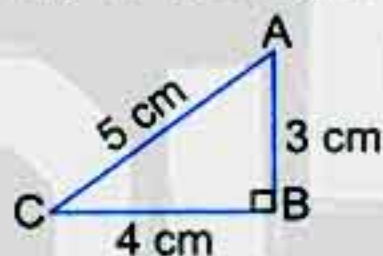
Represent these data by a pie graph.

7

Giza - Al-Haram Educational Area

1 Choose the correct answer:

- 1) $\mathbb{Z}^+ \cap \mathbb{Z}^- = \dots\dots\dots$ (\mathbb{Z}^+ or \mathbb{Z}^- or \emptyset or \mathbb{N})
- 2) The greatest negative integer is $\dots\dots\dots$. (0 or -1 or 1 or 2)
- 3) If $7x = -14$, then $x = \dots\dots\dots$. (7 or -2 or -7 or -21)
- 4) The degree of the equation $x^3 - 4x^2 = 12$ is $\dots\dots\dots$. (3^{rd} or 2^{nd} or 1^{st} or 4^{th})
- 5) All the following numbers satisfy the inequality $x > -3$ except $\dots\dots\dots$. (0 or -1 or -2 or -4)
- 6) The image of the point $(-3, 5)$ by translation $(x + 3, y - 5)$ is $\dots\dots\dots$. ((6, 10) or (0, 5) or (0, 0) or (3, 0))
- 7) If $x = -1$, $y = 2$, then the value of $x + y = \dots\dots\dots$. (2 or 3 or 1 or -1)
- 8) $(-1)^8 + (-1)^9 = \dots\dots\dots$. (1 or Zero or 2 or -2)
- 9) When tossing a coin the probability of getting a head is $\dots\dots\dots$. ($\frac{1}{2}$ or 1 or $\frac{3}{4}$ or $\frac{1}{4}$)
- 10) In the opposite figure:
Area of $\triangle ABC = \dots\dots\dots \text{cm}^2$ (12 or 6 or 10 or 7.5)
- 11) If a circular sector represents $\frac{1}{3}$ of a circle, then the measure of its central angle = $\dots\dots\dots$. (120° or 90° or 60° or 180°)
- 12) A cube its edge length is 3 cm, then its total area = $\dots\dots\dots \text{cm}^2$. (54 or 36 or 27 or 9)



2 Complete the following:

- 13) If $a = 3$, $b = -2$, then the value of: $-3ab = \dots\dots\dots$
- 14) If $x - 3 = 4$, then $x = \dots\dots\dots$
- 15) If $x = (3, 2)$, $y = (3, -4)$, then the length of $\overline{xy} = \dots\dots\dots$ units.
- 16) A cuboid, its dimensions are 3 cm, 4 cm and 5 cm, then its lateral area = $\dots\dots\dots \text{cm}^2$.
- 17) If $2y = 8$, then $y + 3 = \dots\dots\dots$
- 18) The probability of the impossible event = $\dots\dots\dots$
- 19) A circle, its radius length is 7 cm and then its circumference = $\dots\dots\dots \pi$ cm.
- 20) The lateral area of the cube = area of one face $\times \dots\dots\dots$

3 Answer the following questions:


21) Simplify: $\frac{7^5 \times 7}{7^4}$ (Show the steps.)

.....

.....

.....

22) In the Cartesian coordinate plane, draw ΔABC where A (1, 1), B (4, 1) and C (4, 4), then find the image of ΔABC by translation (1, -2)

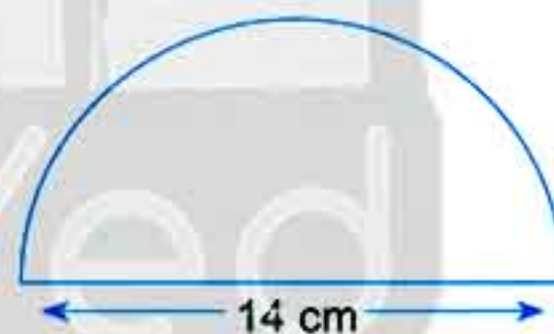


23) Find the area of the given figure. ($\pi \approx \frac{22}{7}$)

.....

.....

.....



24) Find the solution set of each of the following:

a) $2x + 9 = 13$ ($x \in \mathbb{Z}$)

b) $x - 1 < 2$ ($x \in \mathbb{N}$)

25) The following table shows the percentage of production of a factory of home electric appliances.

Kinds of appliances	Washing machine	Heater	Oven	Mixer
Percentage	25%	25%	20%	30%

Represent these data by circular sectors.

8

Giza - Orman Private School

1 Choose the correct answer:

- 1) $\mathbb{Z} - \mathbb{N} = \dots\dots\dots$ (\mathbb{Z}^+ or \mathbb{Z}^- or \mathbb{Z} or \mathbb{N})
- 2) $(-1)^8 \dots\dots\dots (-1)^9$ ($>$ or $<$ or $=$ or \leq)
- 3) The area of the square = side length $\times \dots\dots\dots$
(side length or diagonal or height or width)
- 4) If the length of the radius of a circle is 10 cm, then its surface area equals $\dots\dots\dots \text{cm}^2$.
Given that ($\pi = 3.14$) (3.14 or 31.4 or 314 or 3140)
- 5) If $x - 2 = -4$, then $x = \dots\dots\dots$ where $x \in \mathbb{Z}$ (2 or 4 or -2 or -4)
- 6) A circle of diameter length 10 cm, its circumference = $\dots\dots \pi$ cm. (5 or 10 or 15 or 25)
- 7) The probability of the impossible event = $\dots\dots\dots$ (zero or 1 or 0.5 or 1.2)
- 8) The number which satisfies the inequality: $x > -2$ is $\dots\dots\dots$ (-1 or -2 or -3 or -4)
- 9) The image of the point $(-3, 4)$ by translation $(x, y - 4)$ is $\dots\dots\dots$
($(-3, 0)$ or $(-7, 4)$ or $(-3, 8)$ or $(-1, 4)$)
- 10) The smallest non-negative integer number is $\dots\dots\dots$ (1 or 0 or -1 or 2)
- 11) If $x - 1 = 2$, then $x = \dots\dots\dots$ (3 or 13 or 17 or 11)
- 12) The equation: $3x^3 + 5 = 5$ is of the $\dots\dots\dots$ degree. (first or second or third or fourth)
- 13) The height of a cuboid whose total area is 120 cm^2 and the dimensions of its base are 4 cm and 6 cm equals $\dots\dots\dots \text{cm}$. (3 or 6 or 6.3 or 3.6)
- 14) The probability of getting a number divisible by 3 in an experiment of rolling a fair die once is $\dots\dots\dots$. (0 or $\frac{1}{3}$ or $\frac{1}{2}$ or 1)

2 Complete each of the following:

- 15) The perimeter of the rectangle = $\dots\dots\dots$
- 16) $\mathbb{Z}^+ \cap \mathbb{Z}^- = \dots\dots\dots$

- 17) The probability of the sure event =
- 18) The additive identity element in \mathbb{Z} is
- 19) The lateral area of a cube = the area of one face \times
- 20) The equation: $5x^2 - 3 = 17$ is of the degree.

3 Answer the following questions:

- 21) Find the result of: $\frac{(-2)^7 \times (-2)^5}{(-2)^9}$
- 22) Find the solution set of the equation:
 $2x - 3 = -9$, where $x \in \mathbb{Z}$
- 23) Find the solution set of the inequality:
 $2x - 1 \leq 5$, where $x \in \mathbb{N}$, then represent the solution set on the number line.
- 24) A circle, its circumference is 88 cm, **calculate** the area of its surface where $(\pi \approx \frac{22}{7})$.
- 25) A cuboid whose total area is 132 cm^2 and its lateral area is 112 cm^2 . **Calculate** the area of its base.
- 26) The following table shows the percentages of production of chickens on four farms within one month:

Farms	First	Second	Third	Fourth
Percentages of production	15%	30%	20%	35%

Represent these data by circular sectors.

9

Alexandria - Mathematics Inspection

1 Complete the following:

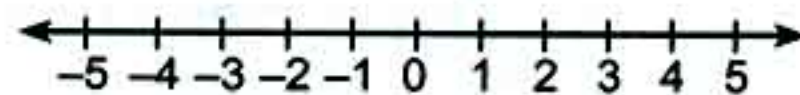
- 1) If $x = |-8|$, then $x = \dots\dots\dots$
- 2) If a dice is rolled once, then the probability of getting a number ≤ 5 is $\dots\dots\dots$
- 3) 3 km = $\dots\dots\dots$ metres.
- 4) The height of the cuboid whose lateral area is 150 cm^2 and the dimensions of its base are 6 cm and 9 cm is $\dots\dots\dots$ cm.
- 5) If $2x = -6$, $x \in \mathbb{Z}$, then the set of solution is $\dots\dots\dots$.
- 6) The surface area of the semi-circle is $\dots\dots\dots \pi \text{ cm}^2$.
- 7) The number which if it is added to its double, the result will be 9 is $\dots\dots\dots$
- 8) The image of the point (2, -1) by translation 3 units in the positive direction of x-axis is $\dots\dots\dots$

2 Choose the correct answer:

- 9) $(3)^8 + (-3)^5 = \dots\dots\dots$ $((-3)^3 \text{ or } (3)^3 \text{ or } (-3) \text{ or } 3)$
- 10) If $\left|\frac{x}{3}\right| = 4$, then $x = \dots\dots\dots$ $(12 \text{ or } (-12) \text{ or } -12 \text{ only or } 12 \text{ only or others})$
- 11) The solution set of inequality $2 \leq x < 3$, where $x \in \mathbb{N}$ is $\dots\dots\dots$ $(\{5\} \text{ or } \{2\} \text{ or } \{2, 1.5\} \text{ or } \{2, 3\})$
- 12) The ratio between the total area and lateral area of a cube = $\dots\dots\dots$ $(1:4 \text{ or } 2:3 \text{ or } 3:2 \text{ or } 4:1)$
- 13) $\frac{81}{3} \dots\dots\dots \mathbb{Z}^+$ $(\in \text{ or } \notin \text{ or } \varnothing \text{ or } \subset)$
- 14) The solution set of the inequality $x < 0$ in \mathbb{Z} is $\dots\dots\dots$ $(\mathbb{Z}^+ \text{ or } \mathbb{Z}^- \text{ or } \mathbb{N} \text{ or } \emptyset)$
- 15) If the probability of failure of a student is 0.23, then the probability of his success = $\dots\dots\dots$ $(1 \text{ or } 0.23 \text{ or } 0.77 \text{ or } 7.7)$
- 16) $36 \times 65 + 15 \times (-36) = 36 (65 \dots\dots\dots 15)$ $(- \text{ or } + \text{ or } \times \text{ or } +)$
- 17) If \emptyset is the empty set, then $P(\emptyset) = \dots\dots\dots$ $(1 \text{ or } 0 \text{ or } 0.5 \text{ or } \emptyset)$
- 18) The circle whose diameter length is 14 cm, its area = $\dots\dots\dots$ where $(\pi \approx \frac{22}{7})$ $(44 \text{ cm}^2 \text{ or } 154 \text{ cm}^2 \text{ or } 154 \text{ cm or } 44 \text{ cm})$
- 19) The number which satisfies the equation: $x + 3 = -17$, where $x \in \mathbb{Z}$ is $\dots\dots\dots$ $(15 \text{ or } -5 \text{ or } 5 \text{ or } -20)$
- 20) If A (-4, 4), B (1, 4), then the length of $\overline{AB} = \dots\dots\dots$ units $(-5 \text{ or } 5 \text{ or } 3 \text{ or } -3)$

3 Answer the following questions:

- 21) Find the solution set of the inequality $2x - 2 \leq 4$, where $x \in \mathbb{Z}$, then represent the solution set on the number line.



- 22) If $a = -2$, $b = -3$, $c = 0$, then find the value of: $-(a + b)^c$.

- 23) The total area of a cube is 468 cm^2 , find:

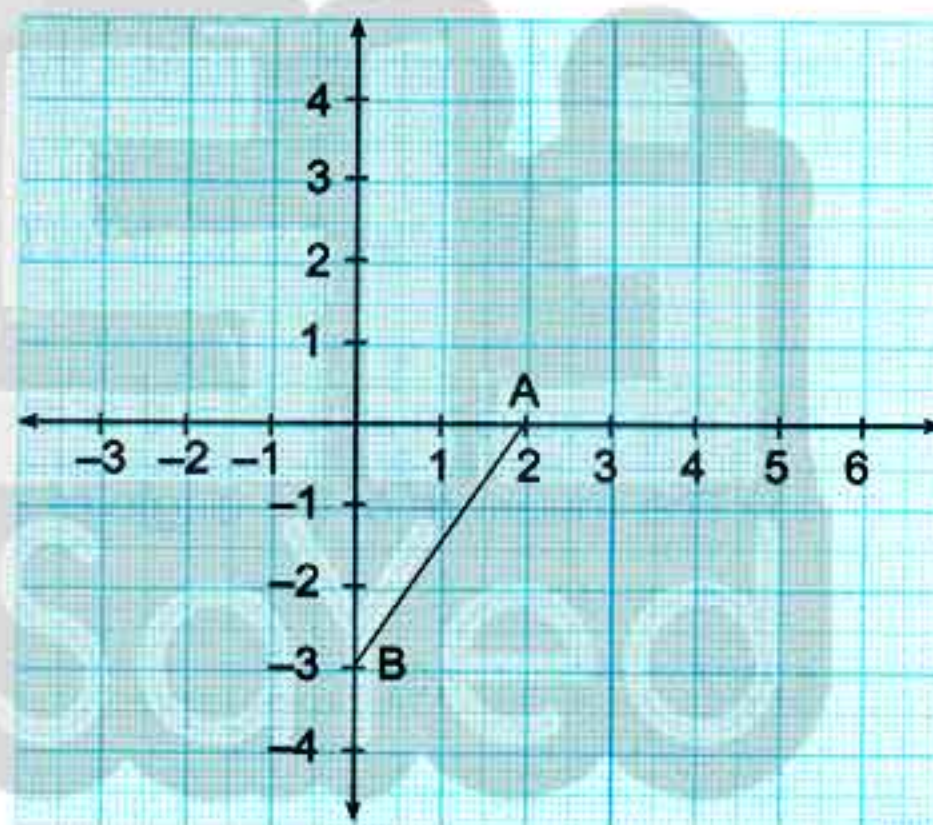
- 1) The area of one face
- 2) The lateral area

- 24) On the coordinate plane,

find and draw the image of \overline{AB}

by translation $(2, -1)$

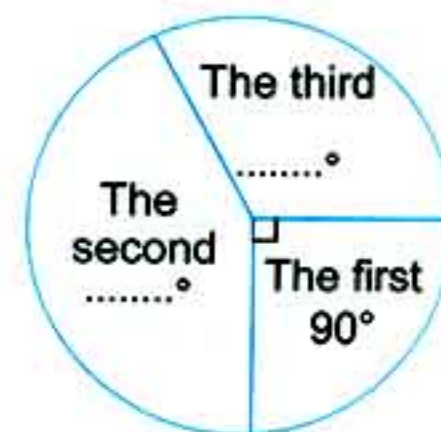
$A' = (\dots, \dots)$, $B' = (\dots, \dots)$



- 25) The following table shows the percentage of production of three farms.

Farms	The first	The second	The third
The percentage	%.....	%.....	30%

Complete the previous table and find the measures of the central angles of the opposite circular sectors.



10

Alexandria - El-Montazah Educational Zone

1 Choose the correct answer:

- 1) $(-1)^7 + (-1)^4 = \dots\dots\dots$ (zero or 1 or -1 or 11)
- 2) The image of the point $(2, -3)$ by translation $(x - 1, y)$ is $\dots\dots\dots$.
 $((1, -3) \text{ or } (2, -1) \text{ or } (2, -4) \text{ or } (-1, -3))$
- 3) $0 \dots\dots\dots \mathbb{Z}$. (\in or \notin or \subset or $\not\subset$)
- 4) The symbolic expression for "x is less than or equal to 2" is $\dots\dots\dots$.
 $(x > 2 \text{ or } x < 2 \text{ or } x \leq 2 \text{ or } x = 2)$
- 5) If a regular die is tossed once, then the probability of the appearance of the number 4 = $\dots\dots\dots$. (zero or $\frac{4}{6}$ or $\frac{1}{6}$ or 4)
- 6) The area of the circle whose radius length is 7 cm = $\dots\dots\dots \text{ cm}^2$.
 $(7\pi \text{ or } 14\pi \text{ or } 42\pi \text{ or } 49\pi)$
- 7) The neutral element of addition in \mathbb{Z} is $\dots\dots\dots$. (1 or 0 or -1 or 2)
- 8) The number which satisfies the inequality $4 > x > -2$ of the following is $\dots\dots\dots$.
 $(4 \text{ or } -4 \text{ or } -1 \text{ or } -2)$
- 9) If $x + 2 = 5$, where $x \in \mathbb{Z}^-$, then the solution set of the equation is $\dots\dots\dots$.
 $(\emptyset \text{ or } \{3\} \text{ or } \{-3\} \text{ or } 0)$
- 10) The equation $x^2 + 3^2 = 9$ is of the $\dots\dots\dots$ degree. (second or third or fourth or fifth)
- 11) The measure of the angle of a circular sector whose area is $\frac{1}{4}$ the area of the circle is $\dots\dots\dots$.
 $(360^\circ \text{ or } 180^\circ \text{ or } 270^\circ \text{ or } 90^\circ)$
- 12) $2 \dots\dots\dots |-13|$. ($>$ or $=$ or \geq or $<$)

2 Complete the following:

- 13) The circumference of a circle = $\dots\dots\dots \times \pi$
- 14) The result of $5 + [(3 - 1) + 2]$ is $\dots\dots\dots$
- 15) $\frac{4^4 \times 4^3}{4^6} = \dots\dots\dots$
- 16) If $x - 3 = 12$, then $x = \dots\dots\dots$, where $x \in \mathbb{Z}$
- 17) If the perimeter of one face of a cube is 40 cm, then its lateral area = $\dots\dots\dots \text{ cm}^2$
- 18) When tossing a coin once, then the probability of getting a head = $\dots\dots\dots$
- 19) The set of integers $\mathbb{Z} = \mathbb{Z}^+ \cup \dots\dots\dots \cup \mathbb{Z}^-$
- 20) The image of the point $(1, -2)$ by translation $(\dots\dots\dots, \dots\dots\dots)$ is the point $(0, 0)$

3 Answer the following questions:

21) Find in \mathbb{Z} the solution set of the equation $2x - 1 = -3$

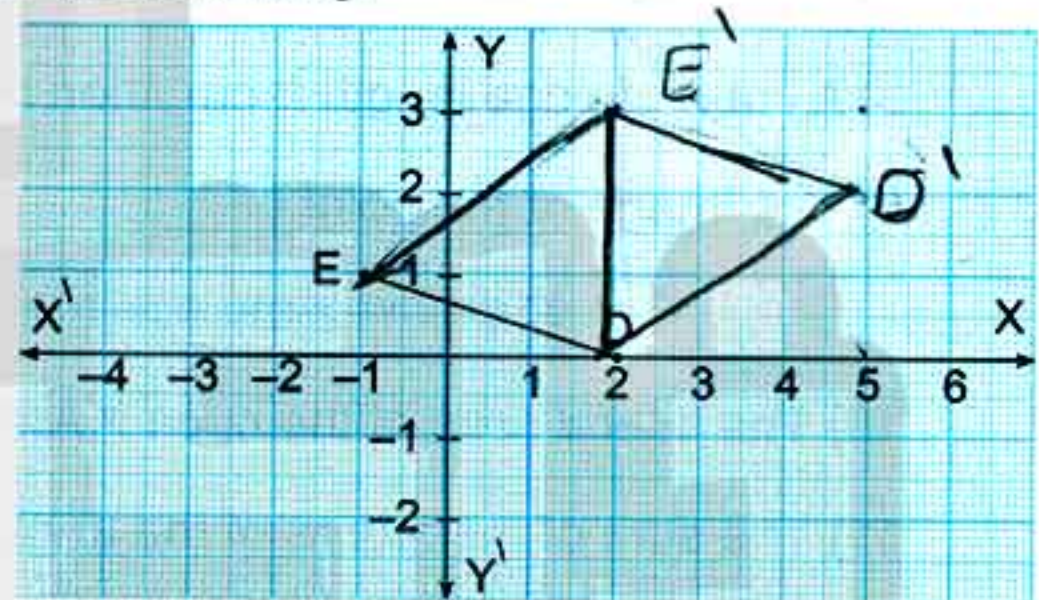
22) If the lateral area of a cube is 36 cm^2 , calculate its total area.

23) Use the properties of multiplication in integers to calculate $4 \times (-33) \times 25$

24) In the opposite coordinate plane, determine the following:

- a) The image of \overline{DE} where $D'(5, 2)$
 $D(2, 0)$ and $E(-1, 1)$ $E'(2, 3)$
 by translation $(x + 3, y + 2)$.

- b) What is the name of
 the shape $DD'E'E$?



25) The following table shows the number of students participating in the school activities.

Activities	Sports	Arts	Cultural
Percentage	45%	25%	30%

Represent the data above by the circular sectors.

11

Alexandria - East Educational Directorate

1 Choose the correct answer:

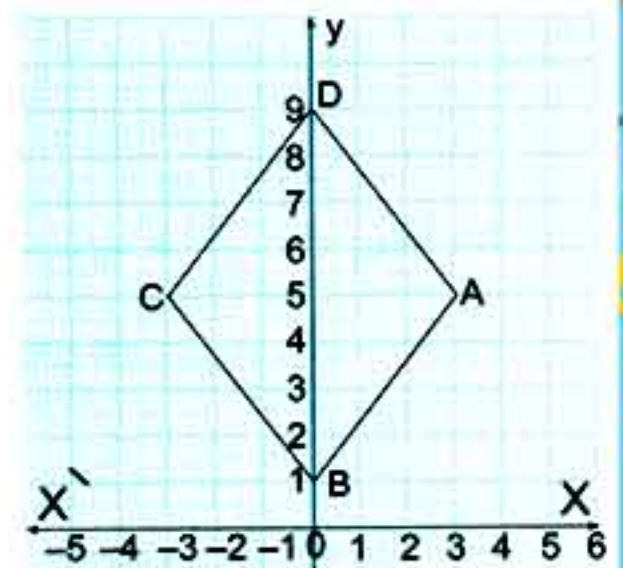
- 1) $\mathbb{Z} = \mathbb{N} \cup \dots\dots\dots$ ($\{0\}$ or \emptyset or \mathbb{Z}^+ or \mathbb{Z})
- 2) $\{0\} \dots\dots\dots \mathbb{Z}$ (\in or \notin or \subset or $\not\subset$)
- 3) If $x \in \{2, 5, -3\} \cap \{-5, -2, -3\}$, then $x = \dots\dots\dots$ (-5 or -3 or -2 or 2)
- 4) $(9)^2 \dots\dots\dots (-3)^4$ ($>$ or $<$ or $=$ or \geq)
- 5) $(-7) \dots\dots\dots (-|-5|)$ ($>$ or $<$ or $=$ or \geq)
- 6) The solution set of the equation: $x - 2 = 3$ in \mathbb{Z} is $\dots\dots\dots$ (5 or 1 or $\{5\}$ or $\{3\}$)
- 7) The number which satisfies the inequality $x + 4 > 2$ is $\dots\dots\dots$ (-1 or -2 or -3 or -4)
- 8) A cube of edge length 6 cm; then its lateral area = $\dots\dots\dots \text{cm}^2$ (216 or 180 or 144 or 108)
- 9) The image of the point $(\dots\dots\dots, \dots\dots\dots)$ by translation $(x - 3, y + 4)$ is $(-5, -3)$.
($(-8, 15)$ or $(-2, 7)$ or $(-8, 7)$ or $(-2, -7)$)
- 10) The lateral area of the cube = Area of one face $\times \dots\dots\dots$ (2 or 4 or 6 or height)
- 11) The sum of measures of the angles of the sectors around the centre of the circle = $\dots\dots\dots$ (100° or 150° or 180° or 360°)
- 12) If \emptyset is empty set; then $P(\emptyset) = \dots\dots\dots$ (0 or 2 or 1 or 0.5)

2 Complete the following:

- 13) $|-5| + |7| = \dots\dots\dots$
- 14) $5 \times (-3 + 7) = 5 \times (-3) + 5 \times \dots\dots\dots$
- 15) In \mathbb{N} : $x + 4 < 7$, then S.S. = $\dots\dots\dots$

In the opposite coordinate plane:

- 16) A ($\dots\dots\dots$, $\dots\dots\dots$,)
- 17) The length of $\overline{AC} = \dots\dots\dots$ units.



18) If the lateral area of a cube is 100 cm^2 , then its total area = cm^2

19) If the perimeter of the base of a cuboid is 10 cm, its height is 4 cm,
then its lateral area = cm^2

20) When tossing a die once, then the probability of getting the number 5 =

3 Answer the following questions:

21) **Arrange** the following numbers in ascending order: -9 , 17 , $|-9|$, -15 , 16

The order is , , and

22) **Find** the result in the simplest form by using the basic laws of repeated multiplication:

$$\frac{(-5)^3 \times (-5)^2}{(-5)^4}$$

.....
.....
.....

23) A circle its diameter is 7 cm, **calculate** its surface area, where $\pi \approx \frac{22}{7}$.

.....
.....
.....

12

Menofia - Official Language Schools

1 Choose the correct answer:

- 1) If $3x = 27$, then $x = \dots\dots\dots$ (3 or 9 or 12 or 24)
- 2) The image of the point $(3, -4)$ by translation $(2, -1)$ is $\dots\dots\dots$
 $((1, -3) \text{ or } (5, -5) \text{ or } (6, 4) \text{ or } (-1, 3))$
- 3) $(-2)^2 \dots\dots\dots (3)^{\text{zero}}$ ($< \text{ or } > \text{ or } = \text{ or } \leq$)
- 4) If a die is tossed once, then the probability of getting a prime number = $\dots\dots\dots$
 $(0.2 \text{ or } 0.5 \text{ or } 0 \text{ or } 1)$
- 5) $\mathbb{Z}^+ \cup \{0\} = \dots\dots\dots$ ($\mathbb{N} \text{ or } \mathbb{Z}^- \text{ or } \mathbb{Z}^+ \text{ or } \mathbb{Z}$)
- 6) The ratio between the lateral area: the total area of the cube = $\dots\dots\dots$
 $(1 : 2 \text{ or } 1 : 3 \text{ or } 2 : 3 \text{ or } 3 : 1)$
- 7) A cuboid with square base, its lateral area = 200 cm^2 , and its height = 5 cm , then
the side length of its base = $\dots\dots\dots \text{ cm}$ (5 or 10 or 15 or 20)
- 8) $\{\frac{3}{9-4}\} \dots\dots\dots \mathbb{Z}$ ($\in \text{ or } \notin \text{ or } \subset \text{ or } \not\subset$)
- 9) If $A = S$, then $P(A) = \dots\dots\dots$ (0 or 1 or 0.5 or 0.3)
- 10) The measure of the central angle of a quarter of a circle is $\dots\dots\dots$
 $(60^\circ \text{ or } 90^\circ \text{ or } 180^\circ \text{ or } 360^\circ)$
- 11) The number of lines of symmetry of a square = $\dots\dots\dots$ (0 or 1 or 2 or 4)
- 12) The number which verifies the inequality $2x + 1 < -1$ is $\dots\dots\dots$ (4 or -2 or 0 or -1)

2 Complete the following:

- 13) The number which if added to its twice, the result will be 9 is $\dots\dots\dots$
- 14) $3 + |-3| = \dots\dots\dots$
- 15) The degree of the equation: $x^2 - 6 = 3$ is $\dots\dots\dots$
- 16) The greatest non-positive integer number is $\dots\dots\dots$
- 17) The sum of measures of the interior angles of a triangle = $\dots\dots\dots$
- 18) The solution set of the equation: $x - 2 \leq 1 \in \mathbb{N}$ is $\dots\dots\dots$
- 19) The additive inverse of $(-5)^2$ is $\dots\dots\dots$
- 20) $\mathbb{Z}^+ \cap \mathbb{Z}^- = \dots\dots\dots$

3 Answer the following questions:

21) Find the value of $\frac{2^4 \times (-2)^7}{(-2)^5 \times (-2)^2}$ (Show your steps.)

.....

.....

22) If the length of a cuboid box without a lid is 16 cm, its width is 7 cm and its height is 9 cm, calculate its lateral area and total area.

.....

.....

23) A square inscribed in a circle with radius 7 cm, find the surface area of the shaded part ($\pi \approx \frac{22}{7}$)

.....

.....



24) Find the solution set of the following, where $x \in \mathbb{Z}$.

a) $x + 8 = 19$

.....

.....

b) $1 - 2x > 5$

.....

.....

25) The following table shows the percentages of students who participated in school activities.

Activities	Sports	Social	Arts
Percentages	40%	35%	25%

Represent these data by circular sectors.

13

Gharbia - Directorate of Education

1 Choose the correct answer:

- 1) $\mathbb{Z} - \mathbb{N} = \dots\dots\dots$ (\mathbb{Z}^+ or $\{0\}$ or \mathbb{Z}^- or 0)
- 2) The equation $2x^3 = 4$ is of the degree. (1^{st} or 2^{nd} or 3^{rd} or 4^{th})
- 3) The image of the point A $(-4, 3)$ by translation $(-1, -4)$ is
 (($-5, 7$) or $(-5, -1)$ or $(-7, 3)$ or $(-3, -1)$)
- 4) Two consecutive natural numbers, the smaller one is x , then the greater is
 ($2x$ or $x + 1$ or $2x + 1$ or $x - 1$)
- 5) $(3)^0 + (-3)^0 = \dots\dots\dots$ (6 or 0 or 1 or 2)
- 6) A circle of diameter 8 cm, its area = cm^2 (9π or 8π or 16π or 64π)
- 7) If: $x \in \mathbb{N}$, then the S.S. of the inequality $-x > 3$ is
 ($\{4, 5, \dots\dots\dots\}$ or $\{3\}$ or $\{-4, -5, -6, \dots\dots\dots\}$ or \emptyset)
- 8) A basket contains cards numbered from 1 to 20. If a card is drawn randomly, then the probability that the number written on it is divisible by 6 =
 ($\frac{3}{20}$ or $\frac{4}{20}$ or $\frac{5}{20}$ or $\frac{6}{20}$)
- 9) The additive inverse of (-5) is (-10 or $\frac{1}{5}$ or $|-5|$ or 0)
- 10) The probability of success of a student is 70%, then the probability of his failure is
 (0.7 or 0.07 or 0.3 or 0.03)
- 11) The area of one face of the cube = its total area. ($\frac{1}{2}$ or $\frac{1}{8}$ or $\frac{1}{6}$ or $\frac{1}{4}$)
- 12) The S.S. of the inequality $-2x < 0$ in \mathbb{Z} is (\mathbb{N} or \mathbb{Z} or \emptyset or \mathbb{Z}^+)

2 Complete the following:

- 13) The lateral area of a cube = \times
- 14) If five times of a number equals 60, then the number is
- 15) The image of the point $(-1, 2)$ by translation $(2, -2)$ is
- 16) A circle, its circumference is 62.8 cm, then its area = cm^2 , where $(\pi = 3.14)$
- 17) $|-1| \times (-4) = \dots\dots\dots$
- 18) The lateral area of a cuboid with base in the shape of a square with side length 8 cm and height 5 cm = cm^2


19) $(-5)^2 \times (5)^3 = 5$

20) If the sum of edge lengths of a cube is 24 cm, then its lateral area = cm^2

3 Answer the following questions:

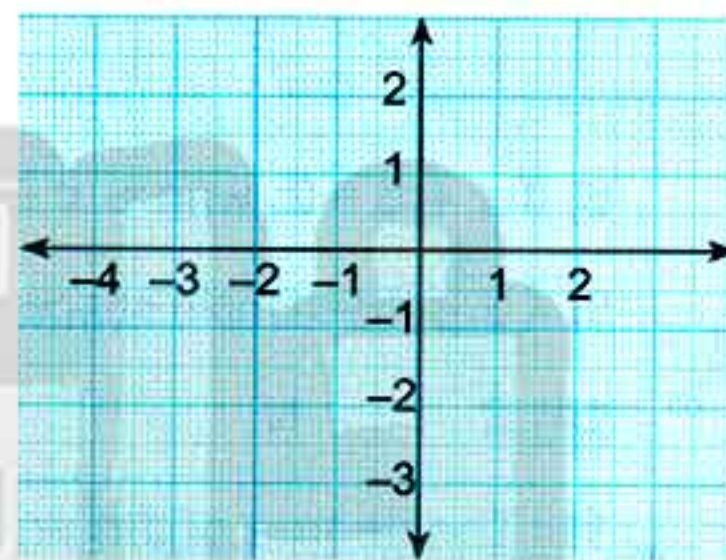
21) Find the value of: $\frac{(8)^3 \times (8)^5}{(-8)^8}$

22) In the opposite figure: If ABCD is a rectangle, whose length = 8 cm, and width = 7 cm, then calculate the area of the shaded part ($\pi \approx \frac{22}{7}$)

23) Draw $\triangle ABC$, where

A (1, 1), B (-3, -1)

and C (0, -5)



24) In an experiment of throwing a fair die once and observing the number on the upper face, find: the probability of each of the following events:

1) Getting a number greater than 6 =

2) Getting a prime number =

25) The following table shows the percentages of the production of chickens on four farms within one month: Represent by pie chart.

Farms	1 st	2 nd	3 rd	4 th
Percentage	10%	35%	30%	25%

14

Kafr El-Sheikh - Kafr El-Sheikh Educational Directorate

1 Choose the correct answer from those given:

- 1) The additive identity element in \mathbb{Z} is (1 or -1 or 0 or 10)
- 2) When tossing a coin once, the probability of getting a head = (Zero or 2 or 1 or 0.5)
- 3) represents an inequality. ($x > 7 - 5$ or $3x + 2 = 11$ or $2x = 24$ or $\frac{x}{5} = 4$)
- 4) $-|-45| = \dots\dots\dots$ (45 or -45 or $|45|$ or $|-45|$)
- 5) The image of the point $(-1, 2)$ by translation of magnitude 3 units in the positive direction of x -axis is ($(-3, 0)$ or $(2, 2)$ or $(-2, 2)$ or $(-1, 3)$)
- 6) The number which satisfies the inequality: $2x + 1 \leq -1$ (4 or 2 or 0 or -1)
- 7) If the total surface area of the cube is 726 cm^2 , then its lateral surface area = cm^2 (484 or 121 or 242 or 181.5)
- 8) If $x + 6 = 2$, where $x \in \mathbb{Z}$, then $x = \dots\dots\dots$ (4 or -4 or 12 or -12)
- 9) If S is the sample space of a random experiment, then $P(S) = \dots\dots\dots$ (zero or 2 or 1 or 0.8)
- 10) $\mathbb{Z}^+ \dots\dots\dots \mathbb{N}$ (\subset or $\not\subset$ or \in or \notin)
- 11) The degree of the equation $x^3 - 4x^2 = 0$ is (first or second or third or fourth)
- 12) The total surface area of the cube = area of one face $\times \dots\dots\dots$ (12 or 4 or 3.14 or 6)

2 Complete each of the following:

- 13) is neither positive nor negative.
- 14) The surface area of the circle = $\pi \times \dots\dots\dots$
- 15) The perimeter of the base of a cube is 24 cm, then its total area is cm^2 .
- 16) If $\{2, x\} \cup \{-4, 0, 4\} = \{0, 2, -2, -4, 4\}$, then $x = \dots\dots\dots$
- 17) A ball was selected without looking from a box that contains 8 white balls and 12 red balls, then the probability of selecting a white ball =
- 18) The image of the point $(8, -10)$ by translation $(-3, 4)$ is
- 19) If $\frac{x}{5} = 4$, then $x = \dots\dots\dots$.
- 20) The lateral surface area of the cuboid = perimeter of the base $\times \dots\dots\dots$

3 Answer the following:

21) Use the distributive property to find the value of:

$$63 \times 85 + 63 \times 15$$

.....

.....

.....

22) Find the solution set of the inequality $3x + 2 \leq 11$ in \mathbb{Z} :

.....

.....

.....

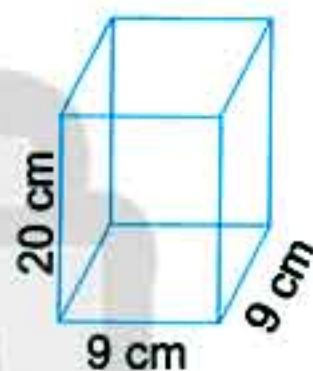
23) A cuboid shaped box with a square base its side length is 9 cm and its height is 20 cm. Calculate its lateral area and its total area.

.....

.....

.....

.....



24) Nahid is a clerk in an institution, she contributes with her husband by her salary as shown in the following table:.

House rent	Food	Savings
25%	50%	25%

Represent these data by circular sectors.

25) A circle of diameter length 12 cm. Calculate its surface area. ($\pi \approx 3.14$)

.....

.....

.....

15

Damietta - Official Language Schools

1 Choose the correct answer:

- 1) $\mathbb{Z} \cap \mathbb{N} = \dots\dots\dots$ (\mathbb{Z} or \mathbb{Z}^+ or $\{0\}$ or \mathbb{N})
- 2) The equation: $x^3 + 4 = 5$ is of the degree.
(first or second or third or fourth)
- 3) A circle, its radius is 4 cm, then its area = $\pi \text{ cm}^2$ (4 or 8 or 12 or 16)
- 4) The image of the point $(-3, 5)$ by translation $(x + 1, y - 2)$ is
($(-4, 3)$ or $(-2, 3)$ or $(-2, -3)$ or $(2, 3)$)
- 5) If a fair die is tossed once, then the probability of getting an odd number =
(0 or 1 or $\frac{1}{3}$ or $\frac{1}{2}$)
- 6) $|-4| - |4| \dots\dots\dots$ (zero or 1 or 8 or -8)
- 7) All the following numbers satisfy the inequality $x > -3$ except
(zero or -4 or -1 or 2)
- 8) The sum of edge lengths of a cube is 96 cm, then its lateral area = cm^2
(8 or 64 or 256 or 384)
- 9) A circular sector represents $\frac{1}{3}$ of a circle, then the measure of its central angle = °
(90 or 120 or 180 or 270)
- 10) If $3x = -9$, then: $x \in \dots\dots\dots$ (\mathbb{N} or \mathbb{Z}^+ or \emptyset or \mathbb{Z})
- 11) $(-1)^8 + (-1)^9 + (-1)^{\text{zero}} = \dots\dots\dots$ (zero or -1 or 1 or 2)
- 12) The solution set of the inequality: $2 \leq x < 3$ where $x \in \mathbb{N}$ is
($\{\text{zero}\}$ or $\{2\}$ or $\{3\}$ or $\{2, 3\}$)

2 Complete the following:

- 13) $\frac{(-2)^7 \times (-2)^5}{2^{10}} = \dots\dots\dots$
- 14) If: $x - 3 = |-7|$, then $x = \dots\dots\dots$
- 15) If: $x \in (-3, 2)$, $y \in (-3, -4)$, then the length of $\overline{xy} = \dots\dots\dots$ units.
- 16) The height of a cuboid whose lateral area is 160 cm^2 and dimensions of its base are 7 cm and 3 cm = cm.
- 17) A box contains 5 white balls, 3 blue balls and 8 red balls, all of them are symmetric, one ball is drawn from the box at random, then the probability that the drawn ball is red =

- 18) The multiplicative identity element in \mathbb{Z} is
- 19) The image of the point $(-1, 2)$ by translation of magnitude of 3 units in the positive direction of Y-axis is
- 20) The surface area of the circle =

3 Answer the following:

- 21) Find the solution set of inequality: $3x - 2 \geq 4$, where $x \in \mathbb{Z}$.

.....

.....

- 22) Use the properties of addition and subtraction in \mathbb{Z} .

Find: $115 + 390 + (-115)$ (Write the used property.)

.....

.....

- 23) A cube of edge length 12 cm. Find the total area.

.....

.....

- 24) A circle whose diameter is 14 cm, calculate its area (where $\pi \approx \frac{22}{7}$).

.....

.....

- 25) The following table shows the rate of the score of 200 students in one school of Cairo Governorate.

Rate	Excellent	Good	Pass	Weak
Percentage	15%	50%	25%	10%

Represent these data by circular sector.

.....

.....

16

Sharkia - Sharkia Educational Directorate

1 Choose the correct answer:

- 1) $(-1)^{105} + (-1)^{20} = \dots\dots\dots$ (2 or 1 or -1 or zero)
- 2) If $x + 2 = |-5|$, then $x = \dots\dots\dots$ (-7 or 7 or 3 or -3)
- 3) If $x \in \{2, -3\} \cap \{5, -3\}$, then $x = \dots\dots\dots$ (-2 or -1 or 3 or -3)
- 4) If a fair die is tossed once, then the probability of the appearance of the number 5 = $\dots\dots\dots$ (zero or $\frac{1}{6}$ or $\frac{5}{6}$ or 1)
- 5) $3^2 + 3^2 + 3^2 = \dots\dots\dots$ (3^6 or 9^2 or 3^3 or 9^6)
- 6) If $2x = -4$, $x \in \mathbb{Z}$, then the set of solution is $\dots\dots\dots$ ($\{2\}$ or $\{-2\}$ or $\{4\}$ or $\{-4\}$)
- 7) The image of the point $(-4, 3)$ by translation $(-1, -4)$ is $\dots\dots\dots$ ($(-5, 7)$ or $(-5, -1)$ or $(-7, 3)$ or $(-3, -1)$)
- 8) $\mathbb{Z}^+ \cap \mathbb{Z} = \dots\dots\dots$ (zero or 1 or -1 or \emptyset)
- 9) The sum of the measures of all angles accumulative at the centre of a circle equals $\dots\dots\dots$ (90° or 108° or 180° or 360°)
- 10) The number which satisfies the inequality $x > -2$ is $\dots\dots\dots$ (-1 or -2 or -3 or -4)
- 11) If $x = |-2|$, $y = -3$, then $xy = \dots\dots\dots$ (5 or -5 or 6 or -6)
- 12) The total area of the cube with 3 cm edge length = $\dots\dots\dots \text{cm}^2$ (12 or 27 or 36 or 54)

2 Complete the following:

- 13) $(-5) \times [7 + (-5)] = \dots\dots\dots$ (in the simplest form)
- 14) The degree of the equation: $3x^2 + 4x - 1 = 0$ is $\dots\dots\dots$
- 15) A circle of diameter length 8 cm, then its area = $\dots\dots\dots \pi \text{ cm}^2$.
- 16) $7^0 + (-7)^0 = \dots\dots\dots$
- 17) The additive inverse of $(-8)^0$ is $\dots\dots\dots$.
- 18) The greatest negative integer is $\dots\dots\dots$
- 19) At throwing a fair die and observing the upper face, then the probability of getting a number greater than 6 equals $\dots\dots\dots$
- 20) $\frac{a^m}{a^n} = a^{\dots\dots\dots}$ (where $m, n \in \mathbb{Z}^+$, $m \geq n$)

3 Answer the following:

21) Find the result of: $\frac{(2)^5 \times (-2)^3}{(-2) \times (2)^4}$

.....

.....

22) A cuboid, its length is 6 cm, its width is 4 cm and its height is 8 cm, find:

1) The lateral area.

2) The total area.

.....

.....

23) a) Find the solution set of the inequality: $x + 3 < 5$ (where $x \in \mathbb{Z}$).

.....

.....

b) Find the solution set of the equation: $2x + 1 = -9$ in \mathbb{Z} .

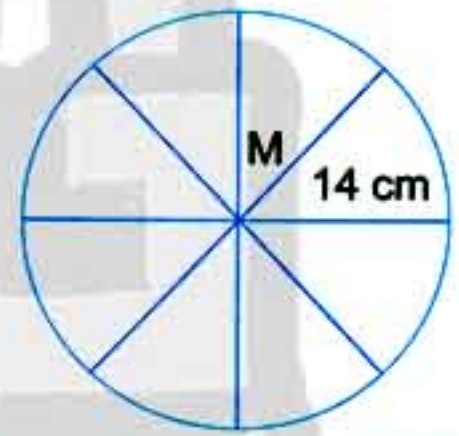
.....

.....

24) In the opposite figure:

M is a circle of radius length 14 cm is divided into 8 equal circular sectors. Find:

1) The surface area of the circle M.

2) The area of one circular sector. ($\pi \approx \frac{22}{7}$)

.....

.....

25) The following table shows the percentage of the production of a factory of electric sets (4 kinds):

Kinds of the sets	TV	Washing machine	Refrigerator	Cooker
Amount of the production	35%	25%	15%	25%

Represent these data by pie charts.

.....

.....

17

Port Said - Mathematics Inspection

1 Choose the correct answer:

- 1) The circumference of a circle = $\pi \times \dots\dots\dots$ (r or r^2 or $2r$ or 3.14)
- 2) If $-2x = 10$, then $x \in \dots\dots\dots$ (\mathbb{N} or \emptyset or \mathbb{Z}^+ or \mathbb{Z})
- 3) The number which satisfies the inequality $x - 2 > 3$ is $\dots\dots\dots$ (-1 or -2 or 6 or 4)
- 4) $(-1)^8 + (-1)^9 = \dots\dots\dots$ (zero or -1 or 1 or 2)
- 5) $|5 - 11| \dots\dots\dots \mathbb{Z}$ (\notin or \in or \subset or $\not\subset$)
- 6) $2^5 \times 2^2 = \dots\dots\dots$ (2^7 or 2^4 or 2^3 or 1)
- 7) When tossing a die, the probability of getting a number on the upper face more than 6 = $\dots\dots\dots$ (\emptyset or zero or 1 or 2)
- 8) $|-3| = \dots\dots\dots$ (3 or -3 or $-|3|$ or $3 - 3$)
- 9) The total area of a cube = area of one face $\times \dots\dots\dots$ (4 or 5 or 6 or 8)
- 10) The probability of impossible event = $\dots\dots\dots$ (\emptyset or zero or 1 or 2)
- 11) The image of the point (2, 3) by translation ($x + 1, y + 2$) is $\dots\dots\dots$ ((3, 4) or (3, 5) or (4, 3) or (5, 3))
- 12) If $x + 6 = 2$, $x \in \mathbb{Z}$, then $x = \dots\dots\dots$ (4 or -4 or -4 or $|4|$)

2 Complete the following:

- 13) $3 + |-3| = \dots\dots\dots$
- 14) The perimeter of the base of a cuboid is 10 cm and its height is 4 cm, then its lateral area = $\dots\dots\dots$
- 15) The probability of the sure event = $\dots\dots\dots$
- 16) The sum of measures of all accumulated angles of the sectors at the centre of a circle = $\dots\dots\dots$
- 17) The area of the circle = $\dots\dots\dots \times \pi$.
- 18) If the total area of a cube is 150 cm^2 , then the length of its edge is $\dots\dots\dots$ cm.
- 19) $\mathbb{Z}^+ \cup \{0\} = \dots\dots\dots$
- 20) If $3x = 9$, then $x = \dots\dots\dots$

74

GEM / MATHS / Primary 6

3 Answer the following:

21) Find the result of $(4 \times 3^2 \times 3^2) - 7 \times 3$

.....

.....

.....

22) In the coordinate plane, locate the points A (0 , 1), B (4 , 3), C (4 ,7), then find:

1) The length of \overline{BC} = units

2) The image of ΔABC by translation (0 , -4)

23) Find the solution set of the inequality $x - 2 \geq 3$, where $x \in \mathbb{Z}$, then represent it on the number line.

.....

.....

.....

24) A cuboid-shaped box with a square base, its length is 10 cm and its height is 7 cm. Calculate the lateral area.

.....

.....

.....

25) The following table shows the percentage of the production of a factory of house electric sets.

Kinds of sets	Washing machine	Heater	Oven	Mixer
Percentage	30%	15%	40%	15%

Represent these data by circular sectors.

1 Choose the correct answer:

- 1) $\mathbb{Z} - \mathbb{N} = \dots\dots\dots$ (\mathbb{Z}^+ or \mathbb{Z}^- or zero or \mathbb{N})
- 2) The probability of the certain event = $\dots\dots\dots$ (zero or 1 or 5 or $\frac{1}{2}$)
- 3) The image of the point (3, 5) by translation (2, -1) is $\dots\dots\dots$ ((5, 6) or (5, 4) or (1, 4) or (1, 6))
- 4) The sum of the measures of all the central angles of the sectors around the centre of the circle is $\dots\dots\dots$ (90° or 80° or 270° or 360°)
- 5) If $x = |-2|$, $y = -3$, then $xy = \dots\dots\dots$ (-5 or 5 or -6 or 6)
- 6) The degree of the equation: $x^2 + 3 = 4$ is of the $\dots\dots\dots$ degree. (first or second or third or fourth)
- 7) If the area of one face of a cube is 25 cm^2 , then its lateral area = $\dots\dots\dots \text{ cm}^2$ (150 or 20 or 25 or 100)
- 8) If $2x = 10$, $x \in \mathbb{N}$, then $x = \dots\dots\dots$ (3 or 4 or 5 or 6)
- 9) $(3)^{\text{zero}} + (-3)^{\text{zero}} = \dots\dots\dots$ (6 or 0 or 1 or 2)
- 10) All the following numbers satisfy the inequality $x > -3$ except $\dots\dots\dots$ (0 or -4 or -1 or -2)
- 11) A circle, its diameter length is 6 cm, then its surface area = $\dots\dots\dots \text{ cm}^2$ (3π or 6π or 9π or 36π)
- 12) The distance between two points A (-3, 2) and B (2, 2) = $\dots\dots\dots$ length units (-5 or 2 or 5 or 1)

2 Complete the following:

- 13) The greatest negative integer number is $\dots\dots\dots$
- 14) The probability of getting a head when tossing a regular coin once is $\dots\dots\dots$
- 15) The ratio between the lateral area of a cube and its total area = $\dots\dots\dots$; $\dots\dots\dots$
- 16) If the sum of all edge lengths of a cube is 144 cm, then its total area = $\dots\dots\dots \text{ cm}^2$
- 17) If $x - 2 = |-4|$, then $x = \dots\dots\dots$
- 18) The multiplicative identity element in \mathbb{Z} is $\dots\dots\dots$
- 19) If the base of a cuboid is in the shape of a square of side length 10 cm and its height is 7 cm, then its lateral surface area = $\dots\dots\dots \text{ cm}^2$
- 20) A circle's circumference is 88 cm, then its area = $\dots\dots\dots \text{ cm}^2$ ($\pi = \frac{22}{7}$)

3 Answer the following:

21) a) Simplify: $\frac{7^5 \times 7^3}{7^6}$

.....

.....

b) Use the properties to **find** the result: $116 + 190 + (-116)$

.....

.....

22) **Find** the solution set of the equation: $2x + 1 = -13$ in \mathbb{Z} .

.....

.....

23) A cuboid's length is 6 cm, its width is 4 cm and its height is 8 cm. **Find** its lateral area and total area.

.....

.....

24) A box contains 10 identical balls numbered from 1 to 10, one ball is drawn at random, write the sample space, then **find** the probability that the drawn ball has:

- 1) An odd number
- 2) A number divisible by 3
- 3) An even prime number
- 4) A number more than 6

.....

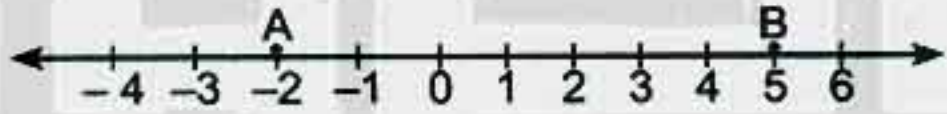
.....

25) **Draw** $\triangle ABC$ on a squared lattice, where A (4 , 4), B (0 , 2) and C (6 , -2), then **find** its image by translation $(x - 4, y + 1)$.

19

Suez - South of Suez Directorate

1 Choose the correct answer:

- 1) When tossing a die once, the probability of getting a number on its upper face more than 6 = (zero or $\frac{1}{6}$ or $\frac{1}{3}$ or \emptyset)
- 2) $\{0\}$ \mathbb{N} (\subset or $\not\subset$ or \in or \notin)
- 3) The equation $x^2 + 3 = 8$ is of the degree. (first or second or third or fourth)
- 4) $|-5|$ 5 (\geq or $=$ or $>$ or $<$)
- 5) $(-1)^8 + (-1)^9 =$ (-1 or zero or 1 or 2)
- 6) The sum of the measures of the accumulative angles at a point =° (90 or 180 or 270 or 360)
- 7) If $2x = -6$, then $x \in$ (\mathbb{N} or \emptyset or \mathbb{Z}^+ or \mathbb{Z})
- 8) $\frac{1}{7^5} \times 7^5$ 1 (\geq or $=$ or $>$ or $<$)
- 9) The total area of the cube = area of one face X (2 or 4 or 6 or 8)
- 10) $AB =$ units  (8 or 7 or 5 or -2)
- 11) $5 \times (-4) =$ (-20 or 20 or 9 or -1)
- 12) The image of the point $(-3, 4)$ by translation $(x, y - 4)$ is
($(-3, 0)$ or $(-7, 4)$ or $(-3, 8)$ or $(-1, 4)$)

2 Complete the following:

- 13) $\mathbb{Z} - \mathbb{N} =$
- 14) The circumference of the circle = $\times \pi$
- 15) $\frac{2^2 \times 2^5}{2^2} =$
- 16) If $x + 6 = 2$, $x \in \mathbb{Z}$, then $x =$
- 17) The lateral area of the cuboid = perimeter of the base \times
- 18) A cube of edge length 10 cm, then its lateral area =

19) = (length + width) \times 2

- 20) A box contains 5 white balls, 3 blue balls and 8 red balls all of them are symmetric. One ball is drawn from the box at random. Then the probability that the drawn ball is red =

3 Answer the following:

- 21) Use the properties of addition in \mathbb{Z} to **find** the result of:

$(-7) + 19 + 17$ (state the property used in each step)

.....

.....

.....

- 22) **Find** the solution set of the following inequality in \mathbb{Z} : $x - 2 \leq 3$

.....

.....

.....

- 23) A circle its radius is 7 cm, **calculate** its surface area (where $\pi \approx \frac{22}{7}$).

.....

.....

.....

- 24) A cuboid-shaped box with a square base, its length is 10 cm, its height is 7 cm. **Calculate** the lateral area.

.....

.....

.....

- 25) The following table shows the percentages of the production of a factory of house electrical sets.

Kinds of sets	Washing machine	Heater	Oven	Mixer
Percentage	25%	15%	40%	20%

Represent these data using circular sectors.

20

Fayoum - Directorate of Education

1 Choose the correct answer:

- 1) $\mathbb{N} \cup \mathbb{Z}$ (\mathbb{Z}^+ or \mathbb{Z} or \mathbb{Z} or \mathbb{N})
- 2) All the following numbers satisfy the inequality $x > -3$ except (0 or -2 or -1 or -4)
- 3) $(-1)^{11} + (-1)^{10} =$ (zero or -1 or 1 or 2)
- 4) If $\frac{x-1}{2} = 3$, $x \in \mathbb{Z}$, then $x =$ (5 or 7 or -7 or 6)
- 5) $|-7| + 3$ $|-7 + 3|$ ($>$ or $=$ or $<$ or \neq)
- 6) The additive inverse of $(-3)^0$ is (3 or -3 or 1 or -1)
- 7) If $x = 4$, $y = -3$, then the negative number of the following is
($x + y$ or $x - y$ or xy or y^x)
- 8) The image of the point (4 , -3) by translation ($x - 3$, $Y + 3$)
is ((-7 , -6) or (1 , 0) or (0 , 1) or (7 , 6))
- 9) The probability of appearing a head when tossing a coin once = (zero or 2 or 1 or $\frac{1}{2}$)
- 10) If the probability of success of a student in mathematics is 75%, then the probability
of his failure = (25 or 0.35 or 1 or $\frac{1}{4}$)
- 11) The ratio between the lateral surface area and the total surface area of a cube =
(2 : 3 or 3 : 4 or 6 : 4 or 1 : 2)
- 12) The total surface area of a cuboid = 100 cm^2 and the area of one base is 20 cm^2 , then
its lateral surface area = cm^2 . (40 or 60 or 80 or 140)

2 Complete the following:

- 13) The degree of the equation $x^3 + 3x^2 + x + 4 = 11$ is the degree.
- 14) The solution set of the inequality $x \leq 0$ in \mathbb{N}
- 15) The solution set of $x + 6 = 5$ in $\mathbb{N} =$
- 16) If the perimeter of one face of a cube is 20 cm, then its total surface area = cm^2
- 17) On the coordinates plane if the point A represents (-2 , 4) and the point B represents
(5 , 4), then the length of $\overline{AB} =$ units.

18) A cuboid its lateral area is 120 cm^2 , its length is 5 cm and its width is 4 cm, then its height = cm.

19) $\frac{\text{Circumference of the circle}}{2\pi} = \dots\dots\dots$

20) \leq the value of probability of any event \leq

3 Answer the following:

21) Find the result: $\frac{(-5)^5 \times (-5)^4}{(-5)^7}$

22) Find the solution set of the following equation in \mathbb{Z} : $3(x + 2) = 3$.

.....
.....

23) Calculate the area of a circle with radius 10 cm. ($\pi \approx 3.14$)

.....
.....

24) A box in the shape of a cuboid, its length 10 cm, width 5 cm and height is 8 cm.

Find its lateral surface area and its total surface area.

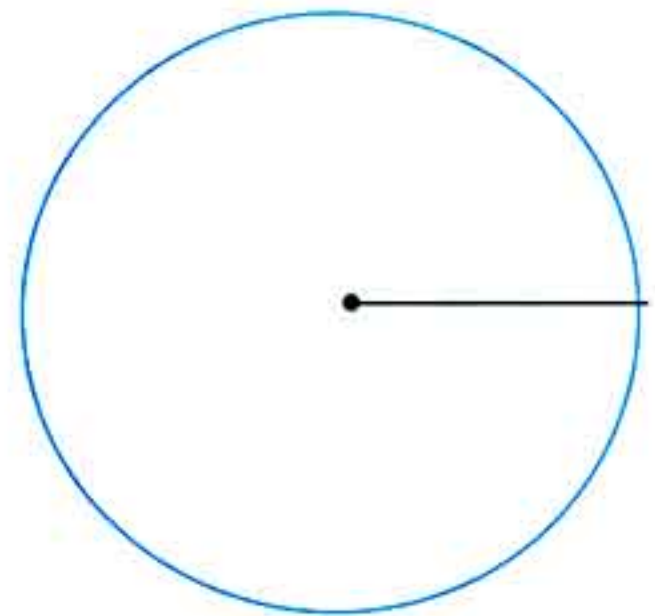
.....
.....

25) The following table shows the percentage of the favourite sports in a school.

Types of the sports	Football	Basketball	Handball
Percentage of students numbers	40%	35%	25%

Represent these data by the circular sectors.

.....
.....
.....
.....
.....



1 Choose the correct answer:

- 1) $|-9| + 3 \dots\dots\dots \mathbb{Z}$ (\in or \notin or \subset or $\not\subset$)
- 2) $\dots\dots\dots$ is the multiplicative identity (neutral) in \mathbb{Z} (2 or 1 or Zero or 3)
- 3) The number which satisfies the inequality $x > -2$ is $\dots\dots\dots$ (-1 or -4 or -3 or -2)
- 4) A fair die is thrown once, then the probability of appearing the number greater than 6 = $\dots\dots\dots$ (zero or 2 or 1 or 0.5)
- 5) If $2x + 9 = 5$ where $x \in \mathbb{Z}$, then $x = \dots\dots\dots$ (-4 or 4 or 2 or -2)
- 6) When tossing a die once, then the probability of getting a number divisible by 3 equals = $\dots\dots\dots$ (zero or $\frac{1}{3}$ or $\frac{1}{2}$ or 1)
- 7) $2^6 \times 2^2 = \dots\dots\dots$ (2^3 or 2^4 or 2^8 or 2^{12})
- 8) The lateral area of a cuboid is 130 cm^2 and the perimeter of its base is 26 cm, then the height = $\dots\dots\dots$ cm (5 or 6 or 9 or 10)
- 9) x is greater than or equal to 3, the symbolic expression of this situation is $\dots\dots\dots$ ($x > 3$ or $x < 3$ or $x \leq 3$ or $x \geq 3$)
- 10) A circle its diameter length is 14 cm, then its surface area = $\dots\dots\dots \text{cm}^2$. (where $\pi \approx \frac{22}{7}$) (49 or 21 or 154 or 7)
- 11) A cube of total area 150 cm^2 the length of the edge is $\dots\dots\dots$ cm. (5 or 25 or 50 or 125)
- 12) The solution set of equation $2x = 6$ in \mathbb{N} is $\dots\dots\dots$ ($\{3\}$ or $\{-3\}$ or $\{12\}$ or $\{-12\}$)

2 Complete the following:

- 13) $\mathbb{Z}^+ \cap \mathbb{Z}^- = \dots\dots\dots$
- 14) If $3y = 6$, then $5y = \dots\dots\dots$
- 15) A circle of diameter length 10 cm, then its area = $\dots\dots\dots \pi \text{ cm}^2$.
- 16) The image of the point (3, 5) by translation $(X + 2, y - 1)$ is $\dots\dots\dots$
- 17) If the perimeter of one face of a cube = 24 cm, then its total area = $\dots\dots\dots \text{cm}^2$.
- 18) The distance between two points A (-3, 2) and B (2, 2) = $\dots\dots\dots$ length units.
- 19) The equation $x^2 + 3 = 4$ is of the $\dots\dots\dots$ degree.
- 20) When tossing a die once, then probability of getting a number on the upper face more than 5 = $\dots\dots\dots$

3 Answer the following:

21) Find the solution set of the following inequality:

$$3x - 2 < 7$$

where $x \in \mathbb{N}$

.....

.....

22) Use the properties of addition in \mathbb{Z} to find the result of:


$$(-116) + 190 + 116 \text{ (State the property used in each step.)}$$

.....

.....

23) In the opposite figure:

ABCD is a rectangle, its length 12 cm and its width 7 cm. A circle is drawn to touch the sides \overline{AD} and \overline{BC} .

Calculate the area of the shaded part. (where $\pi \approx \frac{22}{7}$)

.....

.....

24) The following table shows the number of students participating in school activities.

Activity	Culture	Sport	Social	Art
Percentage	20%	40%	25%	15%

Represent these data by circular sectors.

Rainia-Sayed

25) On a coordinate plane, draw line segment \overline{AB} where: A (2 , 3), B (-2 , 0), then find its image by translation ($x + 3$, $y - 2$).

.....

.....

.....

.....

.....

22

Qena - Qeft Educational Directorate

1 Choose the correct answer:

- 1) $\mathbb{Z}^+ \cap \mathbb{Z}^- = \dots\dots\dots$ (N or \emptyset or \mathbb{Z}^+ or \mathbb{Z})
- 2) $19 - (-11) = \dots\dots\dots$ (8 or -8 or 30 or -30)
- 3) $2^3 + 2^2 = \dots\dots\dots$ (2^5 or 4^5 or 12 or 2)
- 4) If $x + 5 > 2$, then $x > \dots\dots\dots$ (-2 or -3 or -5 or -7)
- 5) If $2x = -6$, then $x \in \dots\dots\dots$ (N or \emptyset or \mathbb{Z}^+ or \mathbb{Z})
- 6) The circumference of a circle = $\dots\dots\dots \times \pi$ (r or 2r or r^2 or $r+2$)
- 7) The number which satisfies the inequality $x - 2 > 3$ is $\dots\dots\dots$ (3 or 4 or 5 or 6)
- 8) The edge length of a cube is 6 cm, then its lateral area = $\dots\dots\dots \text{cm}^2$ (144 or 216 or 24 or 36)
- 9) The image of the point $(-3, 1)$ by translation $(3, 2)$ is $\dots\dots\dots$ ((0, 1) or (0, 3) or (3, 0) or (1, 0))
- 10) The sum of the measures of all angles accumulated at the centre of a circle equals $\dots\dots\dots^\circ$ (630 or 180 or 306 or 360)
- 11) If a fair die is thrown once, then the probability of appearing an even number equals $\dots\dots\dots$ (zero or 2 or 1 or 0.5)
- 12) $\{0\} \dots\dots\dots \mathbb{N}$ (\in or \notin or \subset or $\not\subset$)

2 Complete the following:

- 13) $5^7 + (-5)^6 = \dots\dots\dots$
- 14) If $4x + 3 = 23$, then $x = \dots\dots\dots$
- 15) $\left| \frac{5-11}{3} \right| = \dots\dots\dots$
- 16) $54 \times 117 - 54 \times 17 = \dots\dots \times (\dots\dots - \dots\dots)$ (Use the distributive property.)
- 17) The circle whose diameter length is 14 cm, then the surface area = $\dots\dots \text{cm}^2$ ($\pi \approx \frac{22}{7}$)
- 18) The total area of a cube = the area of one face $\times \dots\dots\dots$
- 19) The additive identity is $\dots\dots\dots$, the multiplicative identity is $\dots\dots\dots$
- 20) The set of counting numbers $\dots\dots\dots \mathbb{N}$.

3 Answer the following questions:

21) Find the value of: $\frac{2^5 \times (-2)^3}{2^4 \times (-2)}$

.....

.....

.....

22) Find the S.S. of the inequality: $2x + 9 \leq 1$ and represent it on the number line if

1) $x \in \mathbb{N}$

2) $x \in \mathbb{Z}$

.....

.....

.....

23) A cuboid, its length is 6 cm, its width is 4 cm and its height is 8 cm, find

1) Its lateral area.

2) Its total area.

.....

.....

.....

24) A box contains 8 white balls, and 12 red balls where all balls are identical. If a ball is drawn randomly, calculate the probability of the following:

1) Drawing a white ball.

2) Drawing a red ball.

.....

.....

.....

25) Represent the following data by circular sectors.

Farm	First	Second	Third
Percentage	25%	35%	40%

23

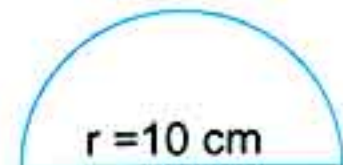
Sohag - City Private Schools

1 Choose the correct answer:

- 1) $\{15\} \dots \mathbb{Z}^-$ (\in or \notin or \subset or \supset)
- 2) The probability of getting an odd number when tossing a die once =
(zero or 2 or 1 or $\frac{1}{2}$)
- 3) The number which satisfies the equation $x - 2 = 3$ is
(3 or 4 or 5 or 6)
- 4) $(-1)^{100} + (-1)^{101} = \dots$
(zero or -2 or -3 or -4)
- 5) A cube of lateral area 36 cm^2 , then its total area = cm^2
(36 or 54 or 9 or 45)
- 6) The image of the point (4, 6) by translation $(x + 1, y - 3)$ is
((5, 7) or (6, 5) or (2, 5) or (5, 3))
- 7) The degree of the equation $3x^3 - 3 = 16$ is
(first or second or third or fourth)
- 8) If $3x = \text{zero}$, then $x = \dots$
(3 or zero or 1 or -3)
- 9) $\mathbb{Z}^+ - \mathbb{Z}^- = \dots$
(\mathbb{Z} or \mathbb{N} or \emptyset or \mathbb{Z}^+)
- 10) The multiplicative identity in \mathbb{Z} is
(zero or 1 or -1 or 2)
- 11) If the diameter of a circle = 14 cm, then its area = cm^2 ($\pi \approx \frac{22}{7}$)
(144 or 451 or 154 or 44)
- 12) When tossing a die once, then the probability of getting number 3 =
(zero or $\frac{3}{6}$ or $\frac{1}{2}$ or $\frac{1}{6}$)

2 Complete the following:

- 13) The probability of getting a tail when tossing a coin once =
- 14) $(-3) + |-3| = \dots$
- 15) $\frac{6^4 \times 6^5}{6^7} = \dots$
- 16) If $X = (-2, 1)$, $Y = (-2, 5)$, then the length of $\overline{XY} = \dots$
- 17) The area of the opposite figure = ($\pi \approx 3.14$)
- 18) The numbers lying between -5 and 0 are
- 19) $\mathbb{Z}^+ \cup \{0\} = \dots$
- 20) The greatest negative integer is



3 Answer the following:


21) Find the solution set of $3x + 1 > -5$ (where $x \in \mathbb{Z}$)

.....

.....

.....

22) In the opposite figure if ABCD is a square whose length = 10 cm, calculate the area of the shaded part.



.....

.....

.....

.....

23) A box without a lid is in the shape of a cuboid, its length is 16 cm, its width is 7 cm and its height is 19 cm. Calculate its lateral area.

.....

.....

.....

24) By using the distribution property, find: $(-11) \times [5 + (-3)]$

.....

.....

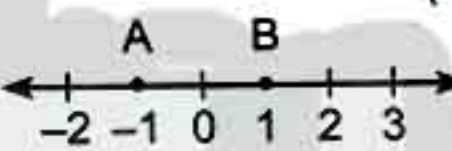
.....

25) The following table shows the percentage of the favourite sports for your class students:

Favourite sports	Football	Volleyball	Basketball	Ping-pong
Percentage	40%	20%	10%	30%

Represent these data by circular sectors.

1 Choose the correct answer:

- 1) When tossing a coin once, then the probability of getting a head is
(0 or 2 or 1 or 0.5)
- 2) $(-19)^0 + (19)^0 = \dots\dots\dots$
(-1 or zero or 1 or 2)
- 3) The image of the point (3, 5) by translation (2, -1) is ((2, 6) or (5, 4) or (1, 4) or (1, 6))
- 4) The equation: $x^2 + 3 = 4$ is of the degree. (first or second or third or fourth)
- 5) The smallest positive integer is
(0 or 1 or -1 or 2)
- 6) The perimeter of the base of a cuboid is 10 cm, its height is 4 cm its lateral area = cm^2 .
(30 or 40 or 50 or 60)
- 7) If $x + 2 = |-5|$, then $x = \dots\dots\dots$
(-7 or 7 or 3 or -3)
- 8) The distance between the point A and B =

(2 or 3 or 4 or 5)
- 9) $-7 \dots\dots\dots 2$
(> or < or = or ≤)
- 10) The solution set of the equation: $x + 2 = -5$ in \mathbb{Z} is {.....}
(-3 or -7 or -8 or -9)
- 11) The number which satisfies the inequality: $x < -1$ is
(0 or 1 or 3 or -2)
- 12) The sum of measures of all the central angles of the sectors about the centre of the circle = °.
(90 or 180 or 270 or 360)

2 Complete the following:

- 13) $\mathbb{Z}^+ \cap \mathbb{Z}^- = \dots\dots\dots$
- 14) If the sum of edges of a cube is 48 cm, then its edge length = cm
- 15) Probability of the impossible event =
- 16) If $x + 2 > 5$, then $x > \dots\dots\dots$
- 17) The lateral area of a cuboid = perimeter of a base $\times \dots\dots\dots$
- 18) The solution set of the equation: $x + 2 = 6$ in $\mathbb{N} = \{\dots\dots\dots\}$
- 19) The image of the point (.....,) by translation (3, 1) is (5, 3).
- 20) Area of the circle =

3 Answer the following:

21) Find the result in the simplest form: $\frac{2^3 \times 2^4}{2^7}$

.....

.....

.....

22) Find the solution set of the following inequality: $2x + 1 \geq 5$ in \mathbb{Z} .

.....

.....

.....

23) A circle of diameter 14 cm, calculate its area. ($\pi \approx \frac{22}{7}$)

.....

.....

.....

24) The following table represents the percentages of the production of three factories of washing machines:

Factory	First	Second	Third
Percentage	25%	25%	50%

Represent these data by pie charts.

Ra Nia SaYed

Answers of Model Tests from the School Book

Model Test

1

1. 1) 0 2) $(-3, 0)$ 3) \subset 4) 0

2. 1) \in 2) -4 3) 6 4) $\frac{8}{16} = \frac{1}{2}$

3. a) -17 b) $x \in \{5, 6, 7, \dots\}$

4. a) Area of one face = $10 \times 7 = 70 \text{ cm}^2$
The lateral surface = $70 \times 4 = 280 \text{ cm}^2$

b) The circumference = $2\pi r = 88$
 $\therefore 2 \times \frac{22}{7} \times r = 88 \Rightarrow r = 88 \times \frac{7}{44} = 14 \text{ cm}$
The area of the circle = $(14)^2 \times \frac{22}{7} = 616 \text{ cm}^2$

5. a) $3x + 9 = 3 \Rightarrow 3x = 3 - 9 = -6 \therefore x = -2$

b) Left to the student.


Model Test

2

1. 1) \mathbb{Z}^- 2) $2r$ 3) $\frac{1}{6}$ 4) -1

2. 1) $\frac{2^8}{2^2} = 2^6$ 2) \subset 3) 5 4) $\frac{1}{3}$

3. 1) -32 2) $\{5, 6, 7, 8, \dots\}$



4. a) $2x + 9 = 5$ $2x = 5 - 9$
 $x = -2$ Solution set = $\{-2\}$

b) Area of the rectangle ABCD = $L \times W = 8 \times 7$
 $= 56 \text{ cm}^2$

Area of the circle = $\pi r^2 = \frac{22}{7} \times \left(\frac{7}{2}\right)^2 = 38.5 \text{ cm}^2$

Area of the shaded part = $56 - 38.5 = 17.5 \text{ cm}^2$

5. Left to the student.

Model

3

1. 1) 3 2) zero 3) 1 4) 40

2. 1) 27 2) r^2 3) \mathbb{N} 4) $\frac{1}{2}$

3. 1) \checkmark 2) \times 3) \times 4) \checkmark

4. 1) 360° 2) \in 3) $\{0, 1, 2\}$ 4) $(4, 4)$

5. a) The total area = $6 \times 4 \times 4 = 96 \text{ cm}^2$

The lateral area = $4 \times 4 \times 4 = 64 \text{ cm}^2$

b) $\frac{2^3 \times 2^4}{2^5} = \frac{2^{3+4}}{2^5} = \frac{2^7}{2^5} = 2^{7-5} = 2^2 = 4$

Answers of some School Examinations

1

Cairo - El-Sahel Educational Zone

1. 1) \emptyset 2) $-(3)^2$ 3) second 4) $\frac{1}{6}$

5) -24 6) 4 7) 25 8) 1

9) $(-2, -7)$ 10) 2^5 11) 0.2 12) $\{4\}$

2. 13) 54 cm^2 14) $\mathbb{Z}^- \cup \{0\}$

15) $(-1, 2)$ 16) 18

17) 360 18) 50 19) $x < -3$ 20) 10

3. 21) $3x - 7 = 11, x \in \mathbb{Z}$

$3x = 11 + 7 = 18$

$\frac{3x}{3} = \frac{18}{3} \Rightarrow x = 6$

S.S. = $\{6\}$

22) The area of a circle = πr^2

$= \frac{22}{7} \times 7 \times 7 = 154 \text{ cm}^2$

The area of each sector = $154 \div 7 = 22 \text{ cm}^2$

23) $x - 2 \leq 3$ where $x \in \mathbb{N}$

$x \leq 3 + 2 \Rightarrow x \leq 5$

S.S. = $\{5, 4, 3, 2, 1, 0\}$

24) The side length of the cube = $28 \div 4 = 7 \text{ cm}$.

a) L.S.A. = perimeter of base \times height

$= 28 \times 7 = 196 \text{ cm}^2$

b) T.S.A. = $6 \times 7 \times 7 = 294 \text{ cm}^2$

25) The measure of the angle which represents

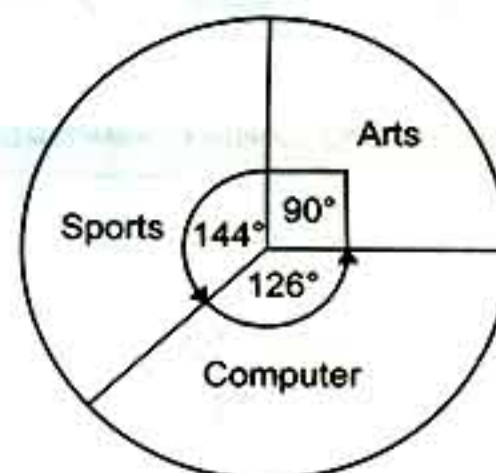
arts = $\frac{25}{100} \times 360^\circ = 90^\circ$

The measure of the angle which represents

sports = $\frac{40}{100} \times 360^\circ = 144^\circ$

The measure of the angle which represents

computer = $\frac{35}{100} \times 360^\circ = 126^\circ$



2 Cairo - Heliopolis Directorate - St. Joseph's School

1. 1) N 2) 3^2 3) $(-3, 0)$ 4) 120°
 5) -1 6) $>$ 7) $\frac{1}{6}$ 8) -1
 9) 400 10) $(-1)^7$ 11) \in 12) $2\pi r$

2. 13) height 14) -1 15) zero
 16) 3 17) 6 18) commutative
 19) $\{-1, 0, 1\}$ 20) $(-3, 0)$

3. 21) $2x + 11 = 3 \Rightarrow 2x = 3 - 11$

Then $\frac{2x}{2} = \frac{-8}{2}$ so $x = -4$

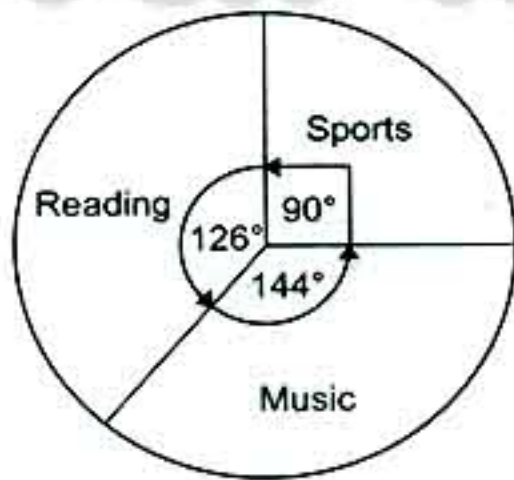
The S.S. = $\{-4\}$

22) $37 \times 17 + 37 \times (-17)$
 $= 37 \times [17 + (-17)] = 37 \times 0 = 0$

23) Area of carpet = $\pi r^2 = \frac{22}{7} \times (3.5)^2 = 38.5 \text{ m}^2$
 The price of the carpet = 38.5×100
 $= 3850$ pounds

24) The total area of the cuboid
 $= \text{lateral area} + \text{area of two bases}$
 $= (3 + 2) \times 2 \times 6 + 2 \times 3 \times 2$
 $= 60 + 12 = 72 \text{ cm}^2$

25) The measure of the angle of the sector that represents sports = $\frac{25}{100} \times 360^\circ = 90^\circ$
 The measure of the angle of the sector that represents reading = $\frac{35}{100} \times 360^\circ = 126^\circ$
 The measure of the angle of the sector that represents music = $\frac{40}{100} \times 360^\circ = 144^\circ$



3 Cairo - Rod El-Farag Educational Zone

1. 1) \notin 2) 5 3) 16 4) 9
 5) zero 6) -3 7) 54 8) zero
 9) 4 10) 9^2 11) third 12) 90°

2. 13) $(0, 1)$ 14) \emptyset 15) $\frac{1}{6}$ 16) height
 17) $(-2)^2$ 18) 64 19) -8 20) 6

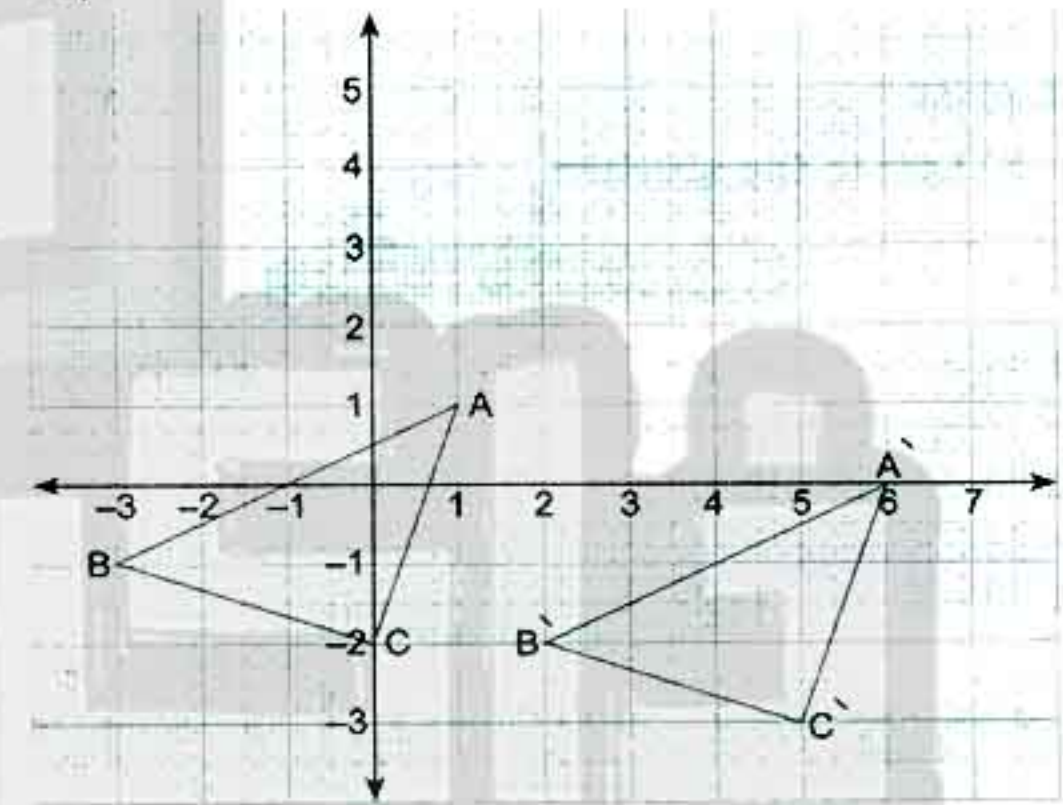
3. 21) $32 \times (117 - 17) = 32 \times 100 = 3200$

22) $2x - 2 \geq 4$ $2x \geq 4 + 2$
 $2x \geq 6$ then $x \geq \frac{6}{2}$
 $x \geq 3$
 then the S.S. = $\{3, 4, 5, \dots\}$

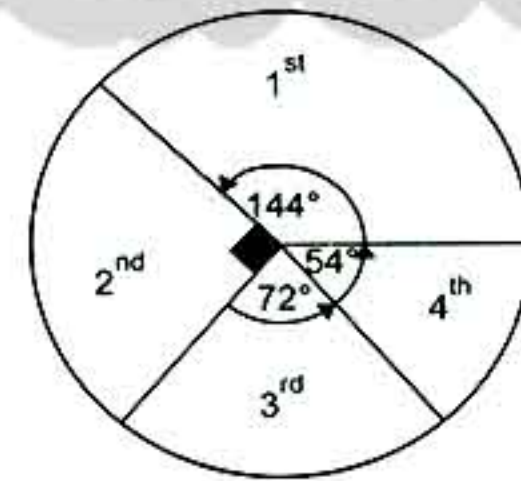
23) The lateral area = perimeter of base \times height
 $= 10 \times 4 \times 6 = 240 \text{ cm}$

the total area = 2 area of base + area lateral area
 $2 \times 10 \times 10 + 240 = 440 \text{ cm}^2$

24)



25) $1^{\text{st}} = \frac{40}{100} \times 360 = 144^\circ$ $2^{\text{nd}} = \frac{25}{100} \times 360 = 90^\circ$
 $3^{\text{rd}} = \frac{20}{100} \times 360 = 72^\circ$ $4^{\text{th}} = \frac{15}{100} \times 360 = 54^\circ$



4 Cairo - El Zeitoun Directorate - Special Republic School

1. 1) $<$ 2) \notin 3) 0 4) 1
 5) $\{-2\}$ 6) -3 7) \in 8) $(6, -3)$
 9) 25 10) L. area = $10 \times 4 = 40$
 11) 0.3 12) 0

2. 13) $\{0\}$ 14) \mathbb{Z}^+ 15) 14 cm 16) $2^4 = 16$
 17) 10 cm 18) 5 19) 1 20) 54 cm^2

3. 21) $3 \times [(-2) + 5] = 3 \times 3 = 9$

22) $3x = -15$

$x = -5$ S.S. = \emptyset

23) Lateral area = base $P \times h = (12 \times 4) \times 12 = 576 \text{ cm}^2$

T.S. area = $576 + (2 \times 12 \times 12) = 864 \text{ cm}^2$

24) Shaded part = area of square - area of circle
 $= (14 \times 14) - \left(\frac{22}{7} \times 7 \times 7\right)$
 $196 - 154 = 42 \text{ cm}^2$

25) Cultural activities = $\frac{25}{100} \times 360 = 90^\circ$

Sport = $\frac{50}{100} \times 360 = 180^\circ$

Social activities = $\frac{15}{100} \times 360 = 54^\circ$

Arts = $\frac{10}{100} \times 360 = 36^\circ$



5

Cairo - El-Marg Educational Directorate -
El-Shams Language School

1. 1) 0.5 2) 54 3) \emptyset 4) 30°
 5) 1 6) $\frac{1}{2}$ 7) 6 8) 1
 9) \in 10) $(-3, 5)$ 11) 314 12) 20
 13) 5^2 14) \subset

2. 15) commutative 16) 0 17) 5
 18) 256 19) second 20) -2 21) 1
 22) $\frac{2}{7}$

3. 23) a) $\{-5\}$

b) $3x \leq 9$

$x \leq 3$ $\{3, 2, 1, 0, -1, \dots\}$

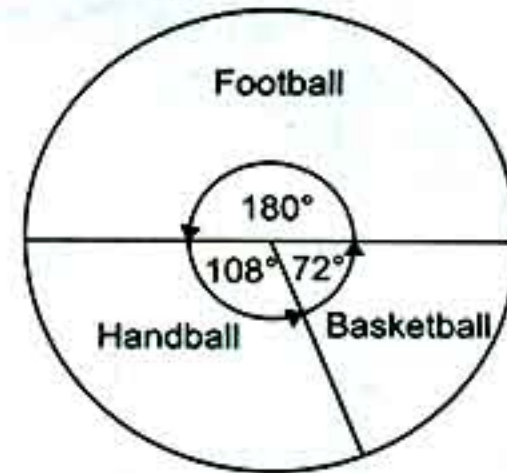
24) Lateral area = base perimeter \times height
 $= 20 \times 8 = 160 \text{ cm}^2$

Total S. area = $2 \times$ base area + L. area
 $= (24 \times 2) + 160$
 $= 208 \text{ cm}^2$

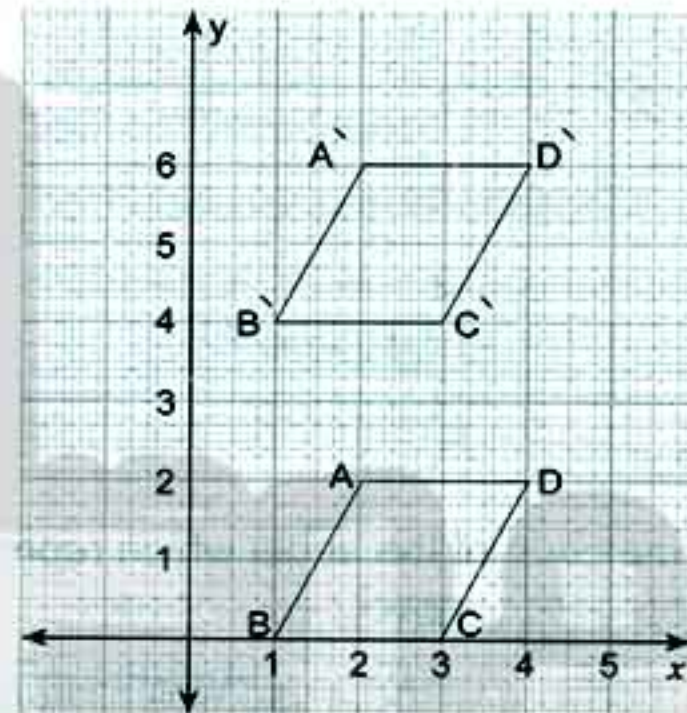
25) Football = $\frac{50}{100} \times 360 = 180^\circ$

Handball = $\frac{30}{100} \times 360 = 108^\circ$

Basketball = $\frac{20}{100} \times 360 = 72^\circ$



26)



The figure $A'B'C'D'$ is the image of ABCD
 ABCD is a parallelogram.

6

Giza - 6 October Directorate

1. 1) -1 2) \notin 3) 2 4) $(-3, 0)$
 5) \mathbb{Z} 6) 216 7) $\frac{1}{6}$ 8) 314
 9) 3 10) 14 11) 10 12) 180°

2. 13) zero 14) \emptyset 15) 3200 16) 96
 17) the centre 18) $\{3, 2, 1, 0\}$
 19) $\{-3\}$ 20) $2(L + w) \times h$

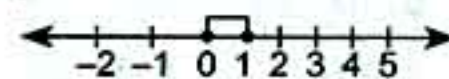
3. 21) a) $(-5) \times [2] = -10$ b) $7^{4+5-7} = 7^2 = 49$

22) $2x - 3 < 1$ $x \in \mathbb{N}$

$2x < 1 + 3$

$\frac{2x}{2} < \frac{4}{2} \Rightarrow x < 2$

S.S. = $\{0, 1\}$

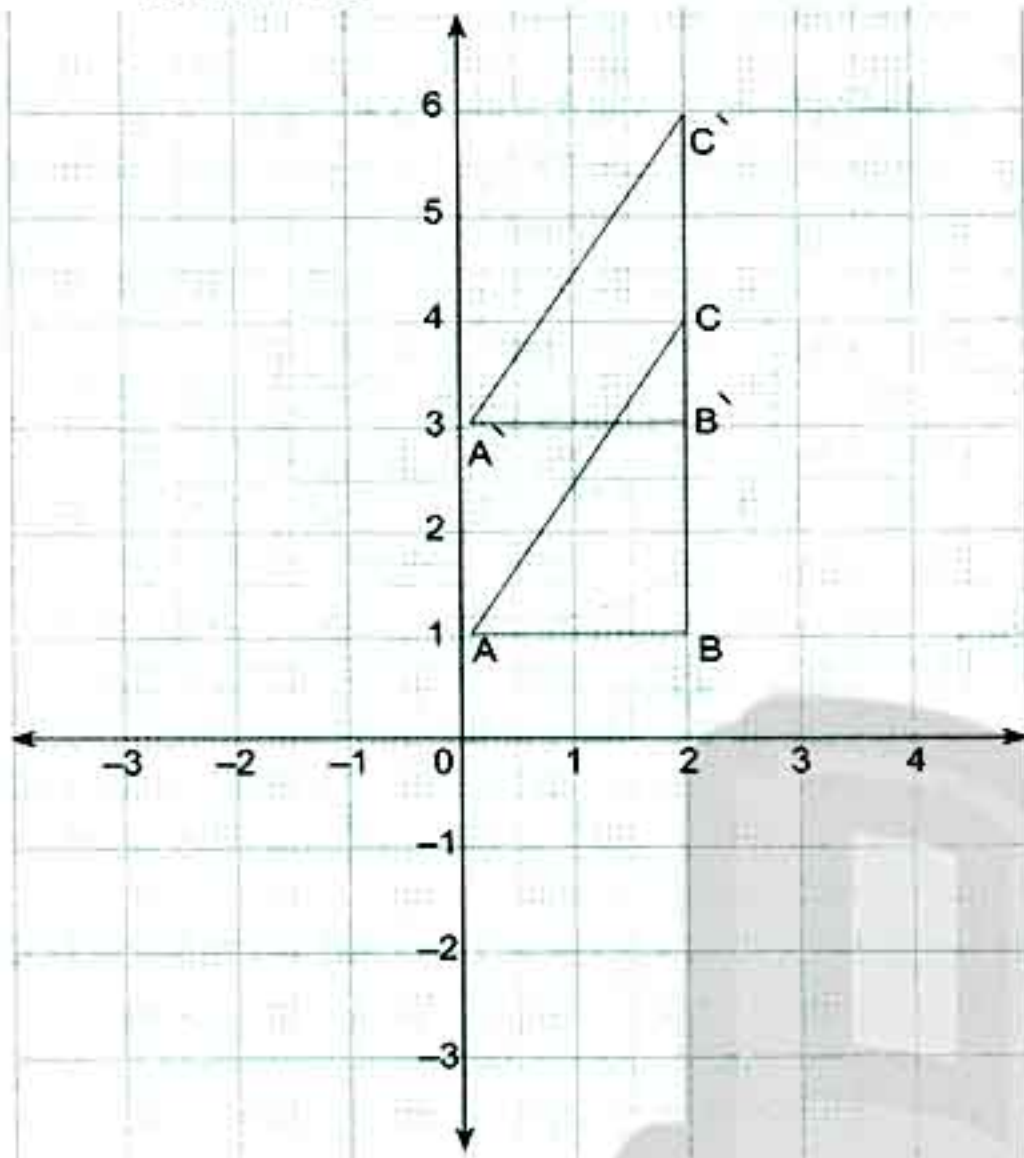


23) $x + 4 > 5$ $x \in \mathbb{Z}$

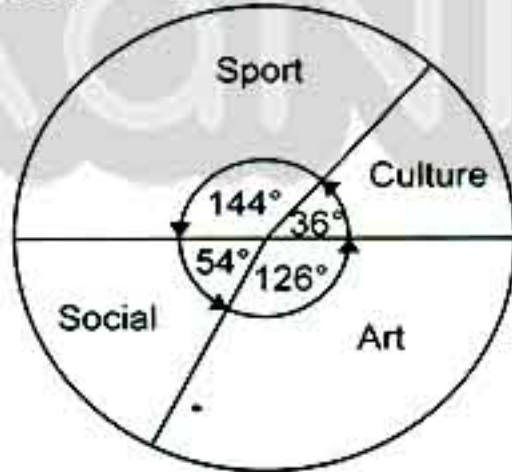
$x > 5 - 4 \Rightarrow x > 1$ S.S. = $\{2, 3, \dots\}$

24) a) The length of $\overline{BC} = 3$ units length.

- b) The image of $\triangle ABC$ by translation $(0, 2)$ is $\triangle A'B'C'$



- 25) The measure of the angle which represents culture = $\frac{10}{100} \times 360^\circ = 36^\circ$
 The measure of the angle which represents sport = $\frac{40}{100} \times 360^\circ = 144^\circ$
 The measure of the angle which represents social = $\frac{15}{100} \times 360^\circ = 54^\circ$
 The measure of the angle which represents art = $\frac{35}{100} \times 360^\circ = 126^\circ$



7

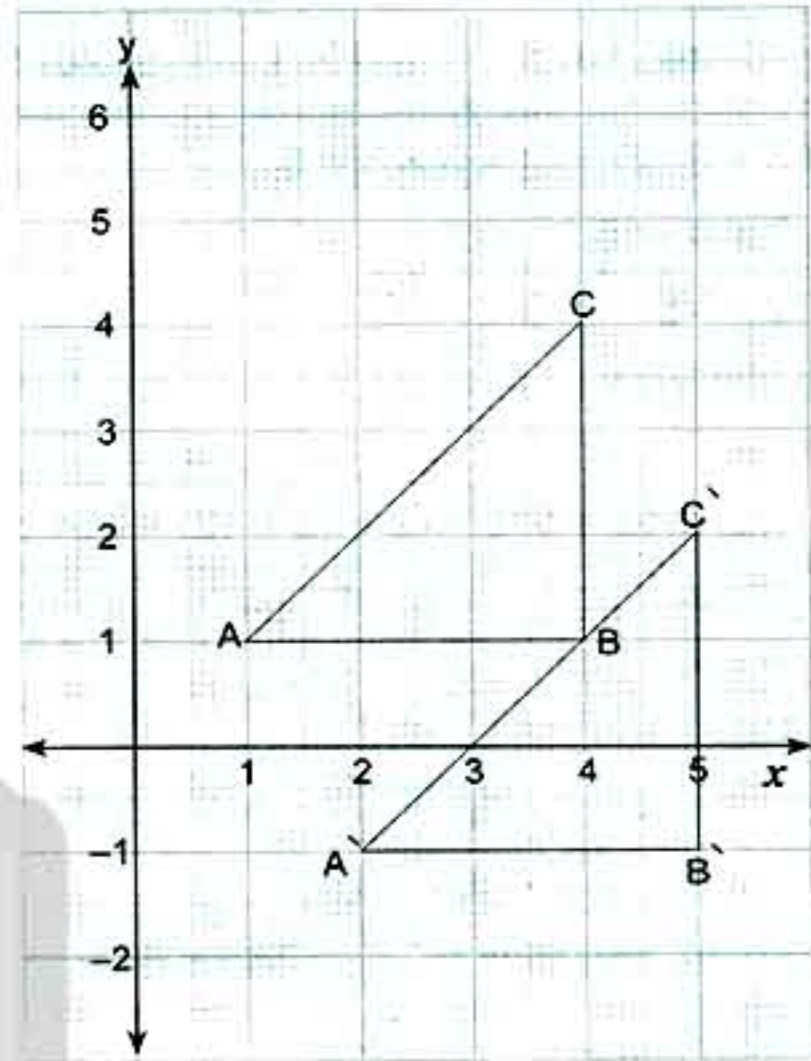
Giza - Al-Haram Educational Area - Sorour Language School

1. 1) \emptyset 2) -1 3) -2 4) 3^{rd}
 5) -4 6) (0, 0) 7) 1 8) zero
 9) $\frac{1}{2}$ 10) 6 11) 120° 12) 54
2. 13) 18 14) 7 15) 6
 16) L.S.A. = $(3 + 4) \times 2 \times 5 = 70$ 17) 7
 18) zero 19) 14 20) 4

38

3. 21) $7^{5+1-4} = 7^2 = 49$

22)



23) The area of the figure = $\frac{1}{2} \times \frac{22}{7} \times (7)^2 = 77 \text{ cm}^2$

24) $2x + 9 = 13$

a) $2x = 13 - 9$

$\frac{2x}{2} = \frac{4}{2}$ then $x = 2$ The S.S. = {2}

b) $x - 1 < 2$

then $x < 3$

$x < 2 + 1$

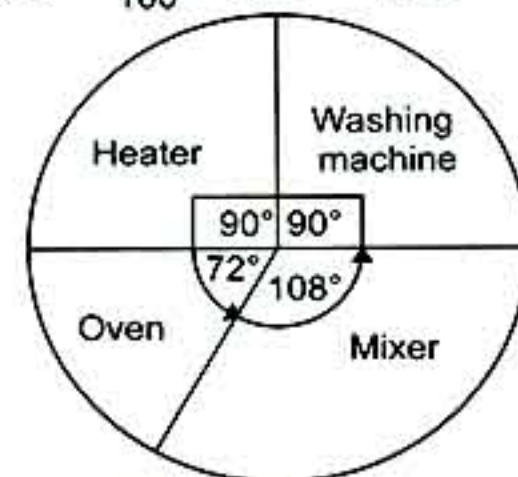
S.S. in N = {2, 1, 0}

- 25) The measure of the angle of the sector which represents washing machine = $\frac{25}{100} \times 360^\circ = 90^\circ$

The measure of the angle which represents the heater = $\frac{25}{100} \times 360^\circ = 90^\circ$

The measure of the angle which represents the oven = $\frac{20}{100} \times 360^\circ = 72^\circ$

The measure of the angle which represents the mixer = $\frac{30}{100} \times 360^\circ = 108^\circ$



8

Giza - Orman Private School - Maths Supervision

1. 1) \mathbb{Z} 2) $>$ 3) The side length
 4) 314 5) -2 6) 10 7) zero
 8) -1 9) (-3, 0) 10) 0 11) 3

12) third 13) 3.6 14) $\frac{1}{3}$ 2. 15) $2 \times (L + W)$ 16) \emptyset 17) 1

18) zero 19) 4 20) second

3. 21) $(-2)^{7+5-9} = (-2)^3 = -8$ 22) $2x - 3 = -9$

$$2x = -9 + 3$$

$$\frac{2x}{2} = \frac{-6}{2} \text{ then } x = -3$$

23) $2x - 1 \leq 5$

$$\text{s.s.} = \{-3\}$$

$$2x \leq 5 + 1, \text{ then}$$

$$\frac{2x}{2} \leq \frac{6}{2} \Rightarrow x \leq 3$$

The S.S. = $\{3, 2, 1, 0\}$ 24) The circumference = $2\pi r = 88$

$$\text{Then } \frac{2 \times 22}{7} r = 88$$

$$r = \frac{88 \times 7}{2 \times 22} = 14 \text{ cm}$$

$$\text{The area of the circle} = \pi r^2 = \frac{22}{7} \times (14)^2 = 616 \text{ cm}^2$$

25) The area of two bases = $132 - 112 = 20 \text{ cm}^2$

$$\text{Then the area of base} = \frac{20}{2} = 10 \text{ cm}^2$$

26) The angle of sector of the first

$$= \frac{15}{100} \times 360^\circ = 54^\circ$$

The measure of the angle of sector of the second

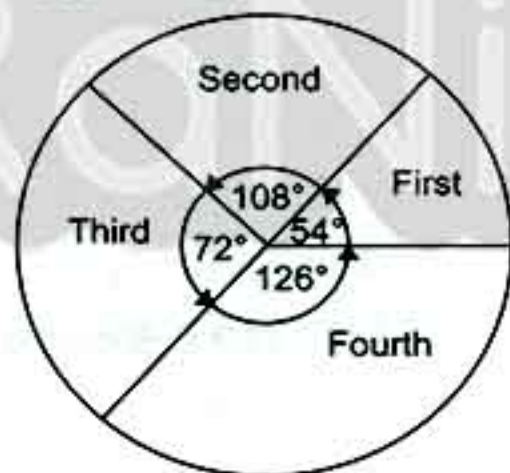
$$= \frac{30}{100} \times 360^\circ = 108^\circ$$

The measure of the angle of sector of the third

$$= \frac{20}{100} \times 360^\circ = 72^\circ$$

The measure of the angle of the fourth

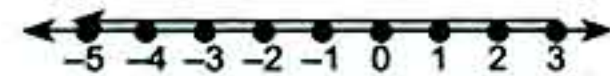
$$= \frac{35}{100} \times 360^\circ = 126^\circ$$



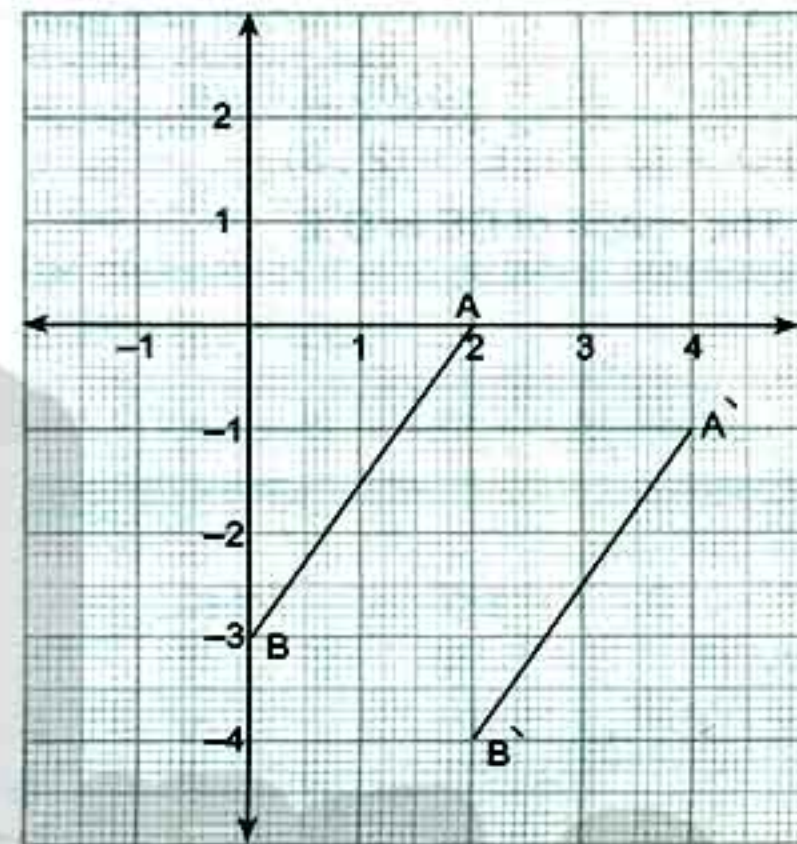
9 Alexandria - Educational Zone - Mathematics Inspection

1. 1) $x = 8$ 2) $\frac{5}{6}$ 3) 3000 4) 55) $\{-3\}$ 6) $\frac{r^2}{2}$ 7) 3 8) $(5, -1)$ 2. 9) $(-3)3$ 10) 12 or (-12) 11) $\{2\}$ 12) $3:2$ 13) \in 14) \mathbb{Z} 15) 0.7716) $-$ 17) zero 18) 154 cm^2 19) -20

20) 5

3. 21) S.S. = $\{2, 3, 1, 0, -1, \dots\}$ 

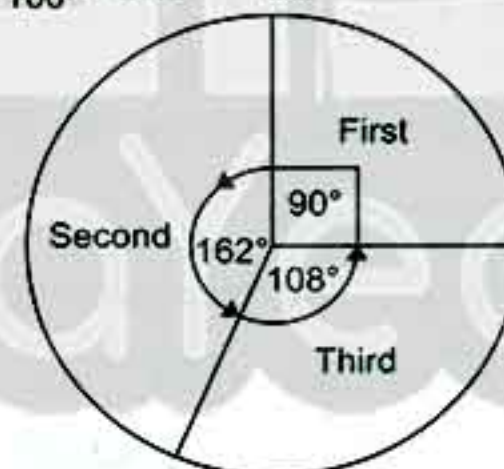
$$22) -(a+b)^c = -(-2-3)^0 = -(-5)^0 = -1$$

23) The area of one face = $468 + 6 = 78 \text{ cm}^2$
The L.S.A. = $4 \times 78 = 312 \text{ cm}^2$ 24) $A' = (4, -1)$, $B' = (2, -4)$ $A'B'$ is the image of AB 

Farm	First	Second	Third
Percentage	25%	45%	30%

The measure of the angle that represents the

$$\text{first} = \frac{25}{100} \times 360^\circ = 90^\circ$$



The measure of the angle that represents the

$$\text{second} = \frac{45}{100} \times 360^\circ = 162^\circ$$

The measure of the angle that represents the

$$\text{third} = \frac{30}{100} \times 360^\circ = 108^\circ$$

10 Alexandria - El Montazah Educational Zone - Maths Supervision

1. 1) zero 2) $(1, -3)$ 3) \in 4) $x \leq 2$ 5) $\frac{1}{6}$ 6) $49 \pi \text{ cm}^2$ 7) zero 8) -1 9) \emptyset 10) second 11) 90° 12) $<$ 2. 13) $2r$ 14) 6 15) 4 16) 1517) 400 18) $\frac{1}{2}$ 19) $\{0\}$ 20) $(-1, 2)$

3. 21) $2x - 1 = -3$

$$2x = -3 + 1 = -2$$

$$\frac{2x}{2} = \frac{-2}{2} \Rightarrow x = -1$$

S.S. $\{-1\}$

22) The area of one face $= 36 \div 4 = 9 \text{ cm}^2$

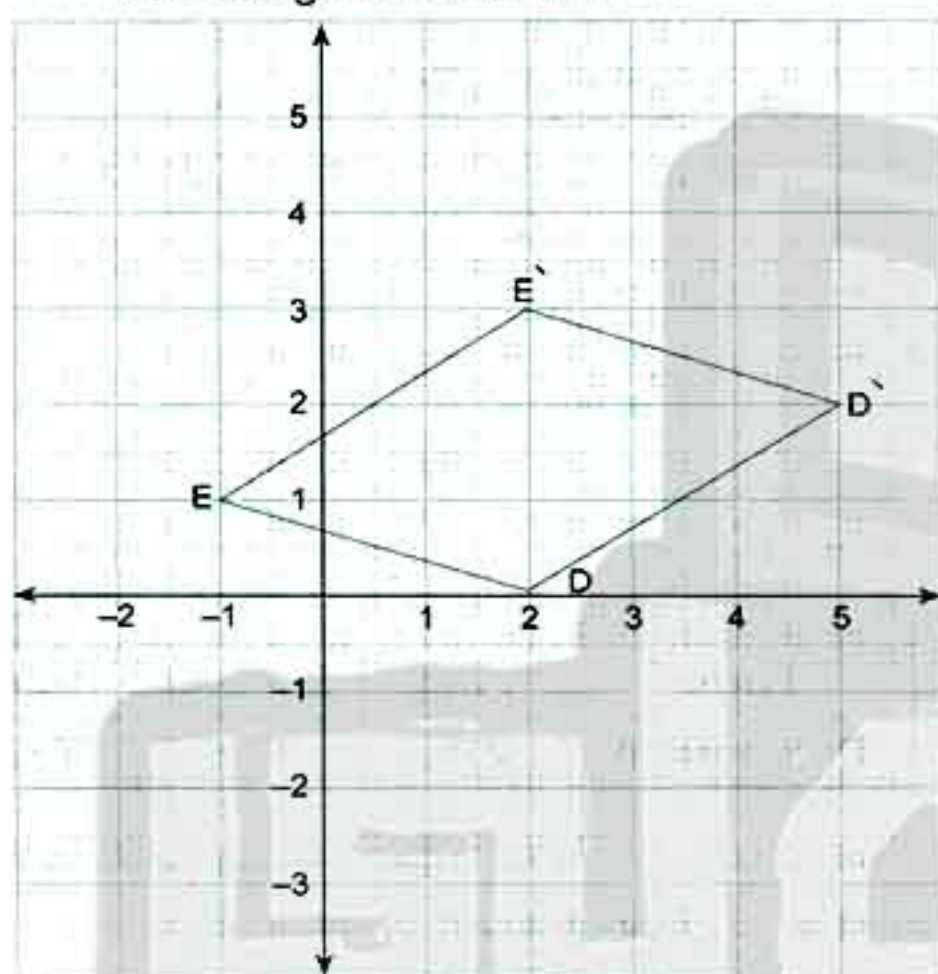
The T.S.A. $= 9 \times 6 = 54 \text{ cm}^2$

23) $4 \times (-33) \times 25$

$= (4 \times 25) \times (-33)$ commutative and associative

$= 100 \times (-33) = -3300$ closure

24) a) $D' = (5, 2)$, $E' = (2, 3)$

The image of \overline{DE} is $\overline{D'E'}$ 

b) The name of the shape $DD'E'E'$ is a parallelogram.

25) The measure of the angle which represents

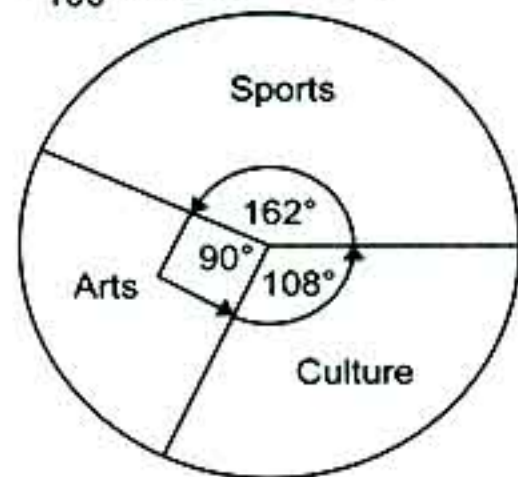
sports $= \frac{45}{100} \times 360^\circ = 162^\circ$

The measure of the angle which represents

arts $= \frac{25}{100} \times 360^\circ = 90^\circ$

The measure of the angle which represents

culture $= \frac{30}{100} \times 360^\circ = 108^\circ$



11 Alexandria - East Educational Directorate - Maths Inspectorate

1. 1) \mathbb{Z} 2) \subset 3) -3 4) $=$
 5) $<$ 6) 5 7) -1 8) 144
 9) $(-2, -7)$ 10) 4 11) 360° 12) zero

2. 13) 12 14) 7 15) $\{2, 1, 0\}$
 16) $(3, 5)$ 17) 6 18) 150 19) 40
 20) $\frac{1}{6}$

3. 21) The order is: $-15, -9, |-9|, 16, 17$

22) $(-5)^{3+2-4} = (-5)^1 = -5$

23) The area of the circle $= \pi r^2$
 $= \frac{11}{7} \times \frac{22}{7} \times \frac{7}{2} \times \frac{7}{2} = 38.5 \text{ cm}^2$

12 Menofia - El-Sadat Directorate - Mathematics Supervision

1. 1) $x = 9$ 2) $(5, -5)$ 3) $>$ 4) 0.5
 5) N 6) $2:3$ 7) 10 8) \neq
 9) 1 10) 90° 11) 4 12) -2

2. 13) 3 14) 6 15) Second
 16) zero 17) 180° 18) $\{3, 2, 1, 0\}$
 19) -25 20) \emptyset

3. 21) $2^4 \times (-2)^{7-5-2}$

$$2^4 \times (-2)^0 = 2^4 \times 1 = 16$$

22) L.S.A. = perimeter of base $\times h$

$$= 2(16 + 7) \times 9$$

$$= 46 \times 9 = 414 \text{ cm}^2$$

T.S.A. = L.S.A. + area of one base

$$= 414 + (16 \times 7)$$

$$414 + 112 = 526 \text{ cm}^2$$

23) Area of the shaded part

$$= \text{area of circle} - \text{area of square}$$

$$= \pi r^2 - \frac{d^2}{2} = \frac{22}{7} (7)^2 - \frac{(14)^2}{2} = 154 - 98 = 56 \text{ cm}^2$$

24) a) $x + 8 = 19$

$$x = 19 - 8 = 11 \quad \text{S.S.} = \{11\}$$

b) $1 - 2x > 5 \quad -2x > 5 - 1$

$$\frac{-2x}{-2} > \frac{4}{-2}$$

$$x < -2$$

S.S. $= \{-3, -4, \dots\}$

- 25) The measure of the angle which represents sports = $\frac{40}{100} \times 360 = 144^\circ$
 The measure of the angle which represents social activities = $\frac{35}{100} \times 360 = 126^\circ$
 The measure of the angle which represents arts = $\frac{25}{100} \times 360 = 90^\circ$



13 Gharbia - Educational Zone - Maths Inspectorate

1. 1) \mathbb{Z} 2) third (3^{rd}) 3) $(-5, -1)$ 4) $x + 1$
 5) 2 6) 16π 7) \emptyset 8) $\frac{3}{20}$
 9) $|-5|$ 10) 0.3 11) $\frac{1}{6}$ 12) \mathbb{Z}^+

2. 13) $4 \times$ the area of one face

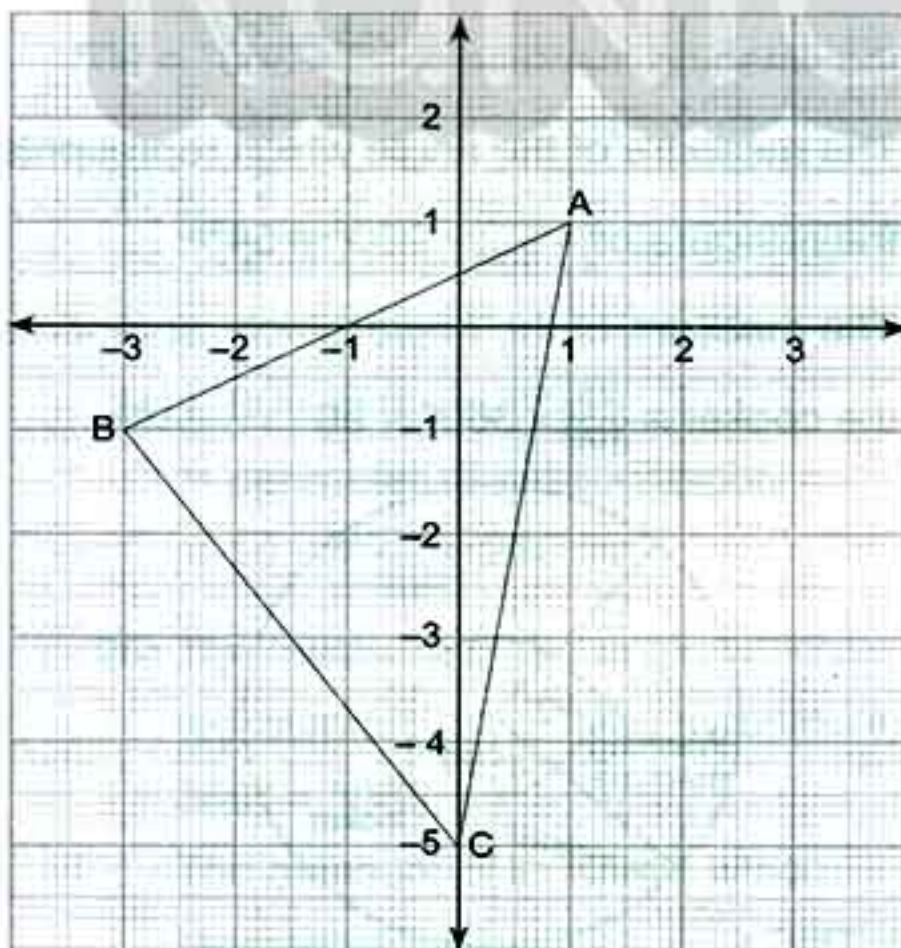
- 14) 12 15) $(1, 0)$ 16) 314 17) -4
 18) 160 19) 5 20) 16

3. 21) $8^{3+5-8} = 8^0 = 1$

- 22) The area of the shaded part

$$= 8 \times 7 - \frac{22}{7} \times \frac{7}{2} \times \frac{7}{2} = 56 - 38.5 = 17.5 \text{ cm}^2$$

- 23)



- 24) 1) The probability of getting a number greater than 6 = zero
 2) the probability of getting a prime number = $\frac{1}{2}$

- 25) The measure of the angle which represents the 1st = $\frac{10}{100} \times 360 = 36^\circ$

- The measure of the angle which represents the 2nd = $\frac{35}{100} \times 360 = 126^\circ$

- The measure of the angle which represents the 3rd = $\frac{30}{100} \times 360 = 108^\circ$

- The measure of the angle which represents the 4th = $\frac{25}{100} \times 360 = 90^\circ$

The drawing is left to the student.

14 Kafr El-Sheikh - Mathematics Supervision

1. 1) 0 2) 0.5 3) $x > 7 - 5$
 4) -45 5) $(2, 2)$ 6) -1 7) 484
 8) -4 9) 1 10) \subset 11) third
 12) 6

2. 13) zero 14) r^2 15) 216
 16) -2 17) $\frac{8}{20} = \frac{2}{5}$ 18) $(5, -6)$
 19) 20 20) height

3. 21) $63 \times (85 + 15) = 63 \times 100 = 6300$

- 22) $3x + 2 \leq 11$

$$x \in \mathbb{Z}$$

$$3x \leq 11 - 2$$

$$\frac{3x}{3} \leq \frac{9}{3} \Rightarrow x \leq 3$$

$$\text{S.S.} = \{3, 2, 1, 0, -1, -2, \dots\}$$

- 23) L.S.A. = $4 \times 9 \times 20 = 720 \text{ cm}^2$

$$\text{T.S.A.} = 720 + 2 \times 9 \times 9 = 720 + 162 = 882 \text{ cm}^2$$

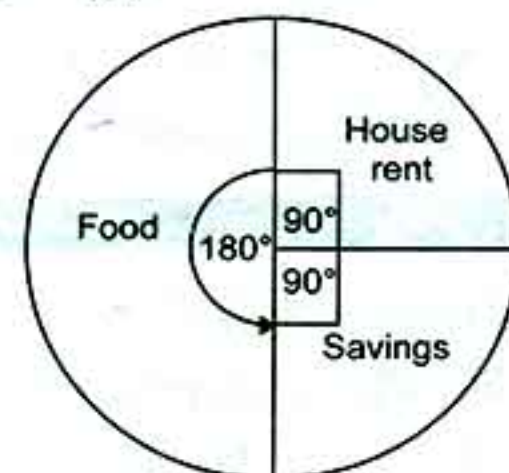
- 24) The measure of the angle that represents the rent of the house = $\frac{25}{100} \times 360 = 90^\circ$

The measure of the angle that represents

$$\text{food} = \frac{50}{100} \times 360 = 180^\circ$$

The measure of the angle that represents

$$\text{savings} = \frac{25}{100} \times 360 = 90^\circ$$



25) The area of the circle = πr^2
 $= 3.14 \times 6 \times 6 = 113.04 \text{ cm}^2$

15 Damietta - Directorate of Official Language Schools

1. 1) N 2) third 3) 16 4) (-2, 3)
 5) $\frac{1}{2}$ 6) zero 7) -4 8) 256
 9) 120 10) Z 11) 1 12) {2}

2. 13) $\frac{(-2)^{7+5}}{2^{10}} = \frac{(-2)^{12}}{2^{10}} = 2^{12-10} = 2^2 = 4$

- 14) 10 15) 6 16) 8 17) $\frac{8}{16} = \frac{1}{2}$
 18) 1 19) (-1, 5) 20) πr^2

3. 21) $3x - 2 \geq 4$

$3x \geq 6 \Rightarrow x \geq 2$

S.S. = {2, 3, 4,}

22) $115 + 390 + (-115) = [115 + (-115)] + 390$
 Commutative and associative property
 $= 0 + 390$ additive inverse = 390 closure

23) The total area of cube = $12 \times 12 \times 6 = 864 \text{ cm}^2$

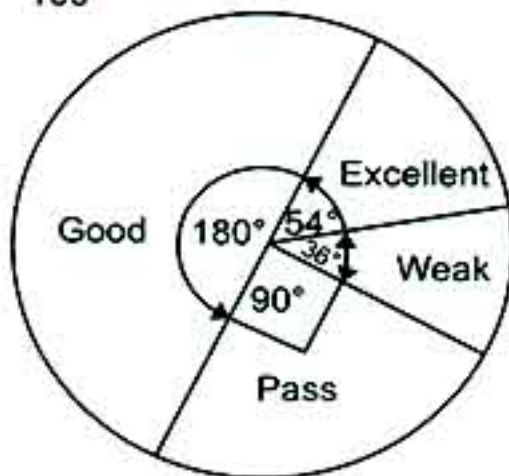
24) The area of the circle
 $= \pi r^2 = \frac{22}{7} \times 7 \times 7 = 154 \text{ cm}^2$

25) The measure of the angle which represents
 excellent = $\frac{15}{100} \times 360^\circ = 54^\circ$

The measure of the angle which represents
 good = $\frac{50}{100} \times 360^\circ = 180^\circ$

The measure of the angle which represents
 pass = $\frac{25}{100} \times 360^\circ = 90^\circ$

The measure of the angle which represents
 weak = $\frac{10}{100} \times 360^\circ = 36^\circ$



16 Sharkia - Directorate of Education - Mathematics Department

1. 1) zero 2) 3 3) -3 4) $\frac{1}{6}$
 5) 3^3 6) {-2} 7) {-5, -1} 8) \emptyset
 9) 360° 10) -1 11) -6 12) 54

2. 13) $(-5) \times [7 + (-5)] = (-5) \times 2 = -10$

14) Second degree 15) 16 16) 2

17) -1 18) -1 19) zero 20) $m - n$

3. 21) $\frac{2^5 \times (-2)^3}{(-2) \times 2^4} = 2^{5-4} \times (-2)^{3-1} = 2 \times (-2)^2$
 $= 2 \times 4 = 8$

22) 1) The lateral area of the cuboid
 $= 2(6 + 4) \times 8 = 2 \times 10 \times 8 = 160 \text{ cm}^2$

2) The total surface area
 $= \text{L.S.A.} + \text{area of two bases}$
 $= 160 + 2 \times 6 \times 4 = 160 + 48 = 208 \text{ cm}^2$

23) a) $x + 3 < 5, x \in \mathbb{Z}$

$x < 5 - 3 \quad x < 2$

Then the S.S. = {1, 0, -1, -2,}

b) $2x + 1 = -9, x \in \mathbb{Z}$

$2x = -9 - 1 \quad \frac{2x}{2} = \frac{-10}{2}$

$x = -5 \quad \text{The S.S.} = \{-5\}$

24) 1) The surface area of the circle $M = \pi r^2$
 $= \frac{22}{7} \times 14 \times 14 = 616 \text{ cm}^2$

2) The area of one circular sector
 $= 616 \div 8 = 77 \text{ cm}^2$

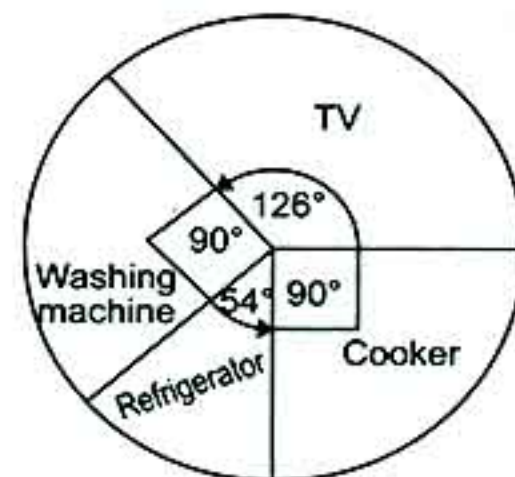
25) The measure of the angle which represents

TV = $\frac{35}{100} \times 360^\circ = 126^\circ$

The measure of the angle which represents
 the washing machine = $\frac{25}{100} \times 360^\circ = 90^\circ$

The measure of the angle which represents
 the refrigerator = $\frac{15}{100} \times 360^\circ = 54^\circ$

The measure of the angle which represents
 the cooker = $\frac{25}{100} \times 360^\circ = 90^\circ$



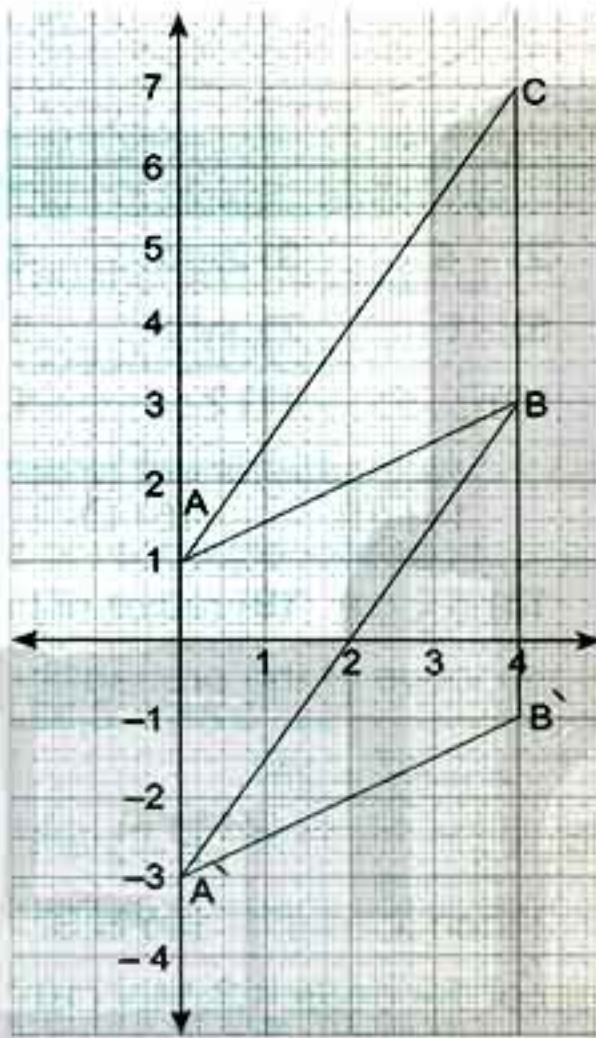
17 Port Said - Educational Directorate - Mathematics Inspectorate

1. 1) $2r$ 2) Z^- 3) 6 4) zero
 5) \in 6) 2^7 7) zero 8) 3
 9) 6 10) zero 11) (3, 5) 12) -4

2. 13) 6 14) 40 cm^2 15) 1 16) 360°
 17) r^2 18) 5 19) N 20) 3

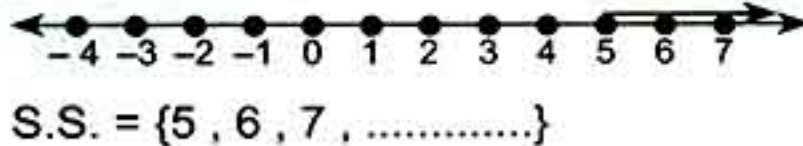
3. 21) $(4 \times 3^2 \times 3^2) - 7 \times 3 = 4 \times 81 - 21$
 $= 324 - 21 = 303$

22)



- 1) 4
 2) $A' = (0, -3)$, $B' = (4, -1)$
 $C' = (4, 3)$
 $\Delta A'B'C'$ is the image of ΔABC

23) $x - 2 \geq 3 \Rightarrow x \geq 5$



- 24) L.S.A. of the cuboid
 $= \text{perimeter of base} \times \text{height}$
 $= 10 \times 4 \times 7 = 280 \text{ cm}^2$

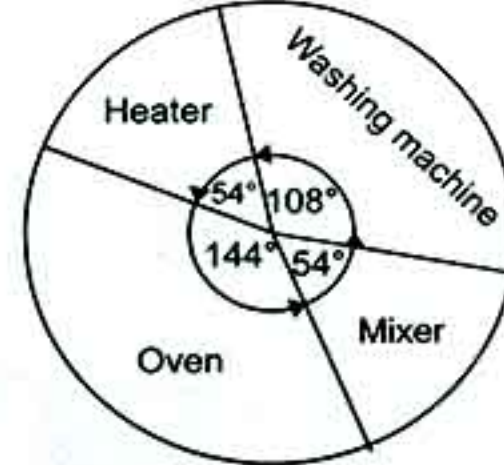
- 25) The measure of the angle which represents the washing machine $= \frac{30}{100} \times 360^\circ = 108^\circ$
 The measure of the angle which represents the heater $= \frac{15}{100} \times 360^\circ = 54^\circ$

The measure of the angle which represents

the oven $= \frac{40}{100} \times 360^\circ = 144^\circ$

The measure of the angle which represents

the mixer $= \frac{15}{100} \times 360^\circ = 54^\circ$



18 Ismailia - Directorate of Education

1. 1) Z^- 2) 1 3) (5, 4) 4) 360°
 5) -6 6) second 7) 100 8) 5
 9) 2 10) -4 11) 9π 12) 5

2. 13) -1 14) $\frac{1}{2}$ 15) 2 : 3
 16) 864 17) 6 18) 1 19) 280
 20) 616

3. 21) a) $7^{5+3-6} = 7^2 = 49$

b) $116 + 190 + (-116) = [116 + (-116)] + 190$
 commutative and associative property
 $= \text{zero} + 190 \text{ (additive identity)} = 190 \text{ closure}$

22) $2x + 1 = -13$ $2x = -13 - 1$
 $2x = -14$ $x = \frac{-14}{2} = -7$
 The S.S. = $\{-7\}$

23) L.S.A. = perimeter of base \times height
 $= 2 \times (6 + 4) \times 8 = 160 \text{ cm}^2$
 The T.S.A. = L.S.A. + area of 2 bases
 $= 160 + 2(6 \times 4) = 160 + 48 = 208 \text{ cm}^2$

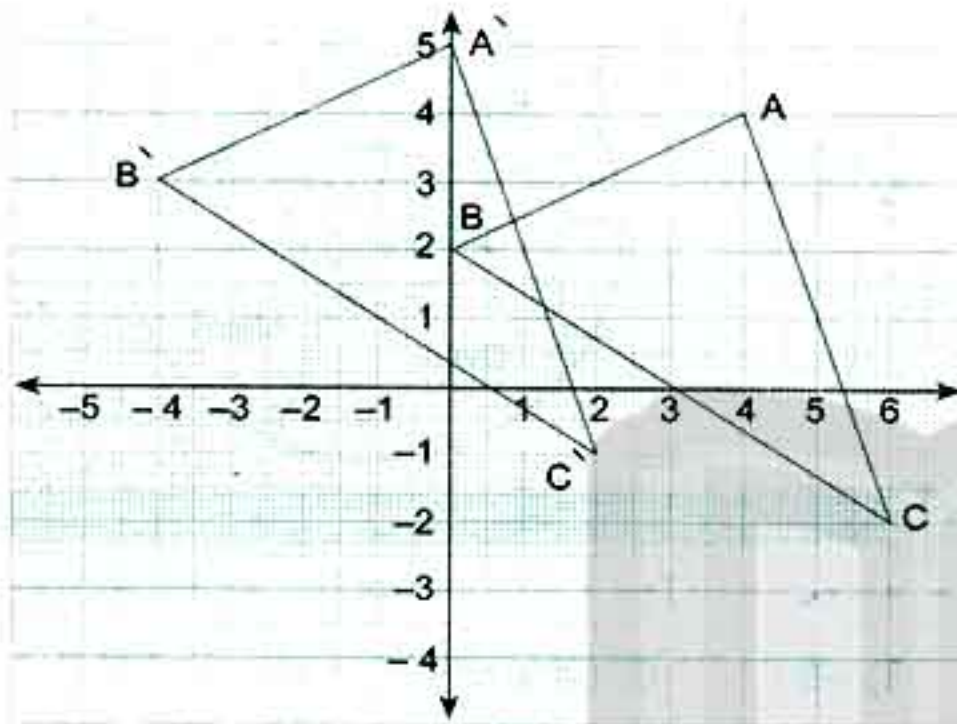
24) $S = \{1, 2, 3, 4, 5, 6, 7, 8, 9, 10\}$

- 1) The probability that the drawn ball has an odd number $= \frac{5}{10} = \frac{1}{2}$
 2) The probability that the drawn ball has a number divisible by 3 $= \frac{3}{10}$

3) The probability that the drawn ball is an even prime number = $\frac{1}{10}$

4) The probability that the drawn ball has a number more than 6 = $\frac{4}{10} = \frac{2}{5}$

25) $A' = (0, 5)$, $B' = (-4, 3)$, $C' = (2, -1)$



19 Suez - Maths Inspectorate

1. 1) zero 2) C 3) second 4) =
5) zero 6) 360° 7) Z^- 8) =
9) 6 10) 7 11) -20
12) $(-3, 0)$

2. 13) Z^- 14) diameter 15) 2^5
16) -4 17) height 18) 400 cm^2
19) perimeter of the rectangle 20) $\frac{8}{16} = \frac{1}{2}$

3. 21) $(-7) + 19 + 17$
 $= [(-7) + 17] + 19$
commutative and associative properties
 $= 10 + 19 = 29$ closure.

- 22) $x - 2 \leq 3 \Rightarrow x \leq 3 + 2$
 $x \leq 5$ S.S. in $Z = \{5, 4, \dots, -1, -2, \dots\}$

- 23) The surface area of the circle = πr^2
 $= \frac{22}{7} \times 7 \times 7 = 154 \text{ cm}^2$

- 24) L.S.A. = perimeter of base \times height
 $= 10 \times 4 \times 7 = 280 \text{ cm}^2$

- 25) The measure of the angle which represents the washing machine = $\frac{25}{100} \times 360^\circ = 90^\circ$
The measure of the angle which represents

the heater = $\frac{15}{100} \times 360^\circ = 54^\circ$

The measure of the angle that represents the oven = $\frac{40}{100} \times 360^\circ = 144^\circ$

The measure of the angle which represents the mixer = $\frac{20}{100} \times 360^\circ = 72^\circ$



20 Fayoum - Directorate of Education - Mathematics Supervision

1. 1) Z 2) -4 3) zero 4) 7
5) > 6) -1 7) xy 8) (1, 0)
9) $\frac{1}{2}$ 10) $\frac{1}{4}$ 11) 2 : 3 12) 60

2. 13) third 14) $\{0\}$ 15) \emptyset 16) 150
17) 7 18) $6\frac{2}{3} \text{ cm}$ 19) radius of the circle
20) zero \leq the value of the probability ≤ 1

3. 21) $(-5)^{5+4-7} = (-5)^2 = 25$

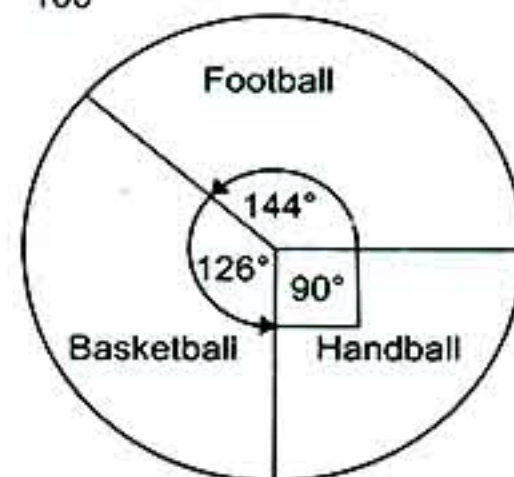
- 22) $\frac{3}{5}(x+2) = \frac{3}{5}$ $x+2=1$
 $x=1-2$ then $x=-1$ the S.S. = $\{-1\}$

- 23) The area of the circle = $3.14 \times (10)^2 = 314 \text{ cm}^2$

- 24) L.S.A. = $(10+5) \times 2 \times 8 = 240 \text{ cm}^2$

- T.S.A. = L.S.A. + area of bases
 $= 240 + 2 \times 10 \times 5 = 340 \text{ cm}^2$

- 25) The measure of the angle which represents the football = $\frac{40}{100} \times 360^\circ = 144^\circ$
The measure of the angle which represents basketball = $\frac{35}{100} \times 360^\circ = 126^\circ$
The measure of the angle which represents handball = $\frac{25}{100} \times 360^\circ = 90^\circ$



21

Assuit - Administration of Distinguished Language Schools

1. 1) \in 2) 1 3) -1 4) zero5) -2 6) $\frac{1}{3}$ 7) 2^8 8) 59) $x \geq 3$ 10) 154 11) 5 12) {3}2. 13) \emptyset 14) 10 15) 25 16) (5, 4)17) 216 18) 5 units 19) second 20) $\frac{1}{6}$

3. 21) S.S. = {2, 1, 0}

22) $(-116) + 190 + 116 = [(-116) + 116] + 190$

commutative and associative property

 $= 0 + 190$ the additive neutral $= 190$ closure property

23) The area of the shaded part

 $= \text{area of rectangle} - \text{area of circle}$

$$= 12 \times 7 - \left(\frac{7}{2}\right)^2 \times \frac{22}{7}$$

$$= 84 - 38.5 = 45.5 \text{ cm}^2$$

24) The measure of the angle which represents

$$\text{the cultural activities} = \frac{20}{100} \times 360^\circ = 72^\circ$$

The measure of the angle which represents


$$\text{sport} = \frac{40}{100} \times 360^\circ = 144^\circ$$

The measure of the angle which represents

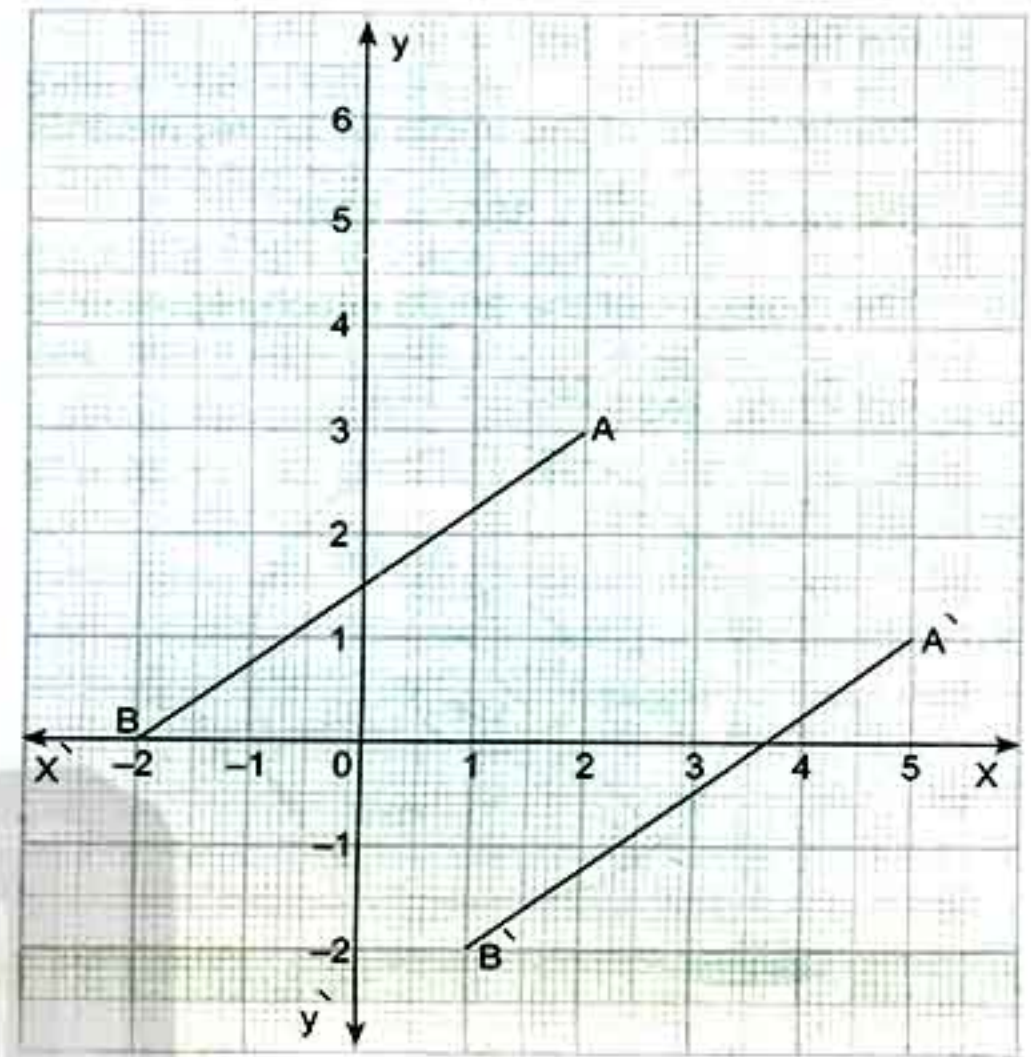
$$\text{social activities} = \frac{25}{100} \times 360^\circ = 90^\circ$$

The measure of the angle which represents

$$\text{arts} = \frac{15}{100} \times 360^\circ = 54^\circ$$



25)



22

Qena - Qeft Educational Directorate

1. 1) \emptyset 2) 30 3) 12 4) -35) \mathbb{Z} 6) $2r$ 7) 6 8) 1449) (0, 3) 10) 360° 11) 0.5 12) C

2. 13) 5 14) 5 15) 2

$$16) 54 (117 - 17) = 54 \times 100 = 5400$$

17) 154 cm^2 18) 6

19) zero, 1 20) C

$$3. 21) 2^{5-4} \times (-2)^{3-1} = 2 \times (-2)^2 = 2 \times 4 = 8$$

$$22) 2x + 9 \leq 1$$

$$2x \leq 1 - 9 \Rightarrow 2x \leq -8$$

$$\text{then } x \leq -4$$

$$1) \text{ S.S.} = \{-4, -5, -6, \dots\} \quad x \in \mathbb{Z}$$

$$2) \text{ The S.S. in } \mathbb{N} = \emptyset$$

$$23) 1) \text{ L.S.A.} = 2 \times (6 + 4) \times 8 = 20 \times 8 = 160 \text{ cm}^2$$

$$2) \text{ T.S.A.} = 160 + 2 \times 6 \times 4 = 160 + 48 = 208 \text{ cm}^2$$

24) 1) The probability of drawing a white ball

$$= \frac{8}{20} = \frac{2}{5}$$

2) The probability of drawing red ball

$$= \frac{12}{20} = \frac{3}{5}$$

25) The measure of the angle which represents

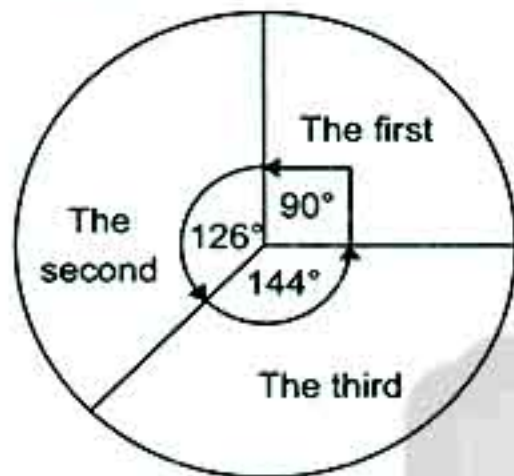
$$\text{the first} = \frac{25}{100} \times 360^\circ = 90^\circ$$

The measure of the angle which represents

$$\text{the second} = \frac{35}{100} \times 360^\circ = 126^\circ$$

The measure of the angle which represents

$$\text{the third} = \frac{40}{100} \times 360^\circ = 144^\circ$$



23) Sohage - Educational Directorate City Private Schools

- | | | | |
|----------------|------------------|----------|-------------------|
| 1. 1) \angle | 2) $\frac{1}{2}$ | 3) 5 | 4) zero |
| 5) 54 | 6) (5, 3) | 7) third | 8) zero |
| 9) Z^+ | 10) 1 | 11) 154 | 12) $\frac{1}{6}$ |

- | | | | |
|------------------------|----------------------|--------|-------|
| 2. 13) $\frac{1}{2}$ | 14) zero | 15) 36 | 16) 4 |
| 17) 157 cm^2 | 18) (-1, -2, -3, -4) | | |
| 19) N | 20) -1 | | |

3. 21) $3x + 1 > -5$ $3x > -6 \Rightarrow x > -2$
S.S. = $\{-1, 0, 1, 2, \dots\}$

- 22) The area of the shaded part
= area of square - area of circle
= $10 \times 10 - \frac{22}{7} \times 5 \times 5$
= $100 - 78 \frac{4}{7} = 21 \frac{3}{7} \text{ cm}^2$

- 23) L.S.A. = perimeter of base \times height
= $(16 + 7) \times 2 \times 19 = 46 \times 19$
= 874 cm^2

- 24) $(-11) \times [5 + (-3)] = (-11) \times 5 + (-11) \times (-3)$
= $-55 + 33 = -22$

- 25) The measure of the angle that represents
football = $\frac{40}{100} \times 360^\circ = 144^\circ$
The measure of the angle that represents
volleyball = $\frac{20}{100} \times 360^\circ = 72^\circ$
The measure of the angle that represents

$$\text{basketball} = \frac{10}{100} \times 360^\circ = 36^\circ$$

The measure of the angle that represents

$$\text{ping pong} = \frac{30}{100} \times 360^\circ = 108^\circ$$



24) Luxor - Educational Directorate - El-Salam Language School

- | | | | |
|---------------------|--------|-----------|-----------|
| 1. 1) $\frac{1}{2}$ | 2) 2 | 3) (5, 4) | 4) second |
| 5) 0 | 6) 40 | 7) 3 | 8) 2 |
| 9) $<$ | 10) -7 | 11) -2 | 12) 360 |

- | | | | |
|--------------------|-------|------------|---------------|
| 2. 13) \emptyset | 14) 4 | 15) zero | 16) 3 |
| 17) height | 18) 4 | 19) (2, 2) | 20) πr^2 |

3. 21) $2^{3+4-7} = 2^0 = 1$

- 22) $2x + 1 \geq 5$ in Z

$$2x \geq 5 - 1$$

$$2x \geq 4 \Rightarrow x \geq 2$$

$$\text{S.S.} = \{2, 3, 4, \dots\}$$

- 23) The area of the circle = $\pi r^2 = \frac{22}{7} \times 7 \times 7 = 154 \text{ cm}^2$

- 24) The measure of the angle which represents

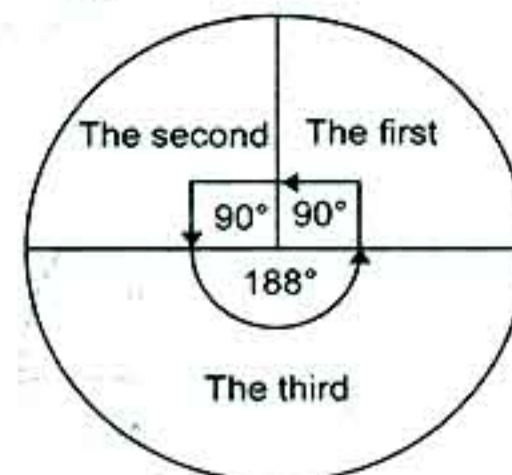
$$\text{the first} = \frac{25}{100} \times 360^\circ = 90^\circ$$

The measure of the angle which represents

$$\text{the second} = \frac{25}{100} \times 360^\circ = 90^\circ$$

The measure of the angle which represents

$$\text{the third} = \frac{50}{100} \times 360^\circ = 180^\circ$$



Pre-exam Final Revision

- | | | | |
|-------------|-------|-----------------|--------|
| 1. 1) Z^- | 2) -1 | 3) -1 | 4) -12 |
| 5) $(-3)^3$ | 6) 50 | 7) $A = \{-3\}$ | 8) Z |

Combined Model Exams (Selected from Previous Years Exams)

Model 1

1 Choose the correct answer:

- 1) $\mathbb{Z} \cap \mathbb{N} = \dots\dots\dots$ (\mathbb{Z} or \mathbb{Z}^+ or $\{0\}$ or \mathbb{N})
- 2) The equation $x^3 + 4 = 5$ is of the $\dots\dots\dots$ degree.
(first or second or third or fourth)
- 3) A circle, its radius is 4 cm, then its area = $\dots\dots\dots \pi \text{ cm}^2$. (4 or 8 or 12 or 16)
- 4) The image of the point $(-3, 5)$ by translation $(x + 1, y - 2)$ is $\dots\dots\dots$
($(-4, 3)$ or $(-2, 3)$ or $(-2, -3)$ or $(2, 3)$)
- 5) If a fair die is tossed once, then the probability of getting an odd number = $\dots\dots\dots$
(0 or 1 or $\frac{1}{3}$ or $\frac{1}{2}$)
- 6) $|-4| - |4| = \dots\dots\dots$ (zero or 1 or 8 or -8)
- 7) All the following numbers satisfy the inequality $x > -3$ except $\dots\dots\dots$
(zero or -4 or -1 or 2)
- 8) The sum of edge lengths of a cube is 96 cm, then its lateral area = $\dots\dots\dots \text{ cm}^2$.
(8 or 64 or 256 or 384)
- 9) A circular sector represents $\frac{1}{3}$ of a circle, then the measure of its central angle = $\dots\dots\dots^\circ$
(90 or 120 or 180 or 270)
- 10) If $3x = -9$, then $x \in \dots\dots\dots$ (\mathbb{N} or \mathbb{Z}^+ or \emptyset or \mathbb{Z}^-)
- 11) $(-1)^8 + (-1)^9 + (-1)^{\text{zero}} = \dots\dots\dots$ (zero or -1 or 1 or 2)
- 12) The solution set of the inequality $2 \leq x < 3$, where $x \in \mathbb{N}$ is $\dots\dots\dots$
($\{\text{zero}\}$ or $\{2\}$ or $\{3\}$ or $\{2, 3\}$)

2 Complete each of the following:

- 13) The lateral area of the cuboid = the perimeter of the base $\times \dots\dots\dots$
- 14) The greatest negative integer is $\dots\dots\dots$
- 15) The probability of the impossible event = $\dots\dots\dots$



- 16) $\frac{(-3)^7 \times (-3)^2}{(-3)^6} = (-3)^x$, then $x = \dots\dots\dots$
- 17) If A $(-3, 2)$ and B $(-3, -4)$, then the length of $\overline{AB} = \dots\dots\dots$ length unit(s).
- 18) $3 \times (-5) = (-5) \times 3$ is called the $\dots\dots\dots$ property.
- 19) $\{x : x \in \mathbb{Z}, -2 < x \leq 1\} = \dots\dots\dots$ in listing method.
- 20) The image of the point $(0, -2)$ by translation $(x - 3, y + 2)$ is $\dots\dots\dots$

3 Answer the following questions:

- 21) Find the result of $(4 \times 3^2 \times 3^2) - 7 \times 3$
 $\dots\dots\dots$
- 22) On the coordinate plane, **locate** the points A $(0, 1)$, B $(4, 3)$ and C $(4, 7)$, then **find**:
 a) The length of $\overline{BC} = \dots\dots\dots$ units.
 b) The image of $\triangle ABC$ by translation $(0, -4)$.
 $\dots\dots\dots$
- 23) Find the solution set of the inequality $x - 2 \geq 3$, where $x \in \mathbb{Z}$, then **represent** it on the number line.
 $\dots\dots\dots$
 $\dots\dots\dots$
 $\dots\dots\dots$
- 24) A cuboid-shaped box with a square base, its length is 10 cm and its height is 7 cm. **Calculate** the lateral area.
 $\dots\dots\dots$
 $\dots\dots\dots$
 $\dots\dots\dots$
- 25) The following table shows the percentage of the production of a factory of house electric sets.

Kinds of sets	Washing machine	Heater	Oven	Mixer
Percentage	30%	15%	40%	15%

Represent these data by using the circular sectors.

Model 2

1 Choose the correct answer:

- 1) $\mathbb{Z} - \mathbb{N} = \dots\dots\dots$ (\mathbb{Z}^+ or \mathbb{Z}^- or \mathbb{Z} or \mathbb{N})
- 2) $(-1)^8 \dots\dots\dots (-1)^9$ ($>$ or $<$ or $=$ or \leq)
- 3) The area of the square = side length $\times \dots\dots\dots$
(side length or diagonal or height or width)
- 4) If the length of the radius of a circle is 10 cm, then its surface area equals $\dots\dots\dots \text{cm}^2$.
Given that ($\pi \approx 3.14$) (3.14 or 31.4 or 314 or 3140)
- 5) If $x - 2 = -4$, then $x = \dots\dots\dots$ where $x \in \mathbb{Z}$. (2 or 4 or -2 or -4)
- 6) A circle of diameter length 10 cm, its circumference = $\dots\dots\dots \pi \text{ cm}$.
(5 or 10 or 15 or 25)
- 7) The probability of the impossible event = $\dots\dots\dots$ (zero or 1 or 0.5 or 1.2)
- 8) The number which satisfies the inequality $x > -2$ is $\dots\dots\dots$ (-1 or -2 or -3 or -4)
- 9) The image of the point $(-3, 4)$ by translation $(x, y - 4)$ is $\dots\dots\dots$
($(-3, 0)$ or $(-7, 4)$ or $(-3, 8)$ or $(-1, 4)$)
- 10) The smallest non-negative integer number is $\dots\dots\dots$ (1 or 0 or -1 or 2)
- 11) If $x - 1 = 2$, then $x = \dots\dots\dots$ (3 or 13 or 17 or 11)
- 12) The equation $3x^3 + 5 = 5$ is of the $\dots\dots\dots$ degree.
(first or second or third or fourth)

2 Complete each of the following:

- 13) The solution set of inequality $x - 1 < 0$ in \mathbb{N} is $\dots\dots\dots$
- 14) $\mathbb{Z}^+ - \mathbb{Z}^- = \dots\dots\dots$
- 15) A circle, its circumference is 88 cm, then its radius length = $\dots\dots\dots \text{cm}$. ($\pi \approx \frac{22}{7}$)
- 16) $\frac{2^2 \times 2^5}{2^3} = \dots\dots\dots$
- 17) A cube of volume 1000 cm^3 , its edge length is $\dots\dots\dots \text{cm}$.
- 18) Having A $(-2, 1)$ and B $(3, 1)$, then the length of $\overline{AB} = \dots\dots\dots$ length unit(s).
- 19) The probability of the certain event = $\dots\dots\dots$
- 20) If the area of one face of a cube is 9 cm^2 , then its total area = $\dots\dots\dots \text{cm}^2$.

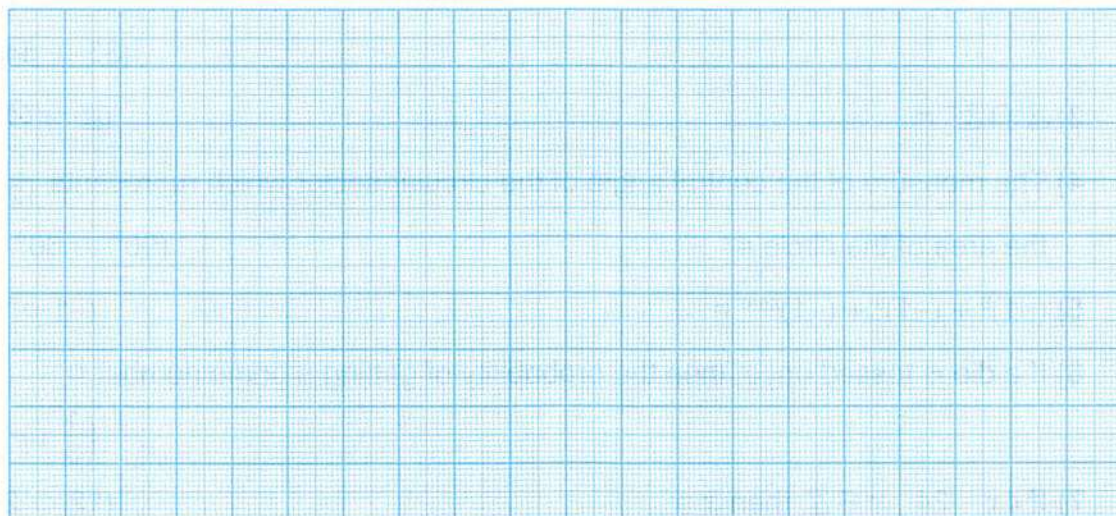


3 Answer the following questions:

21) Simplify: $\frac{7^5 \times 7}{7^4}$ (Show the steps.)

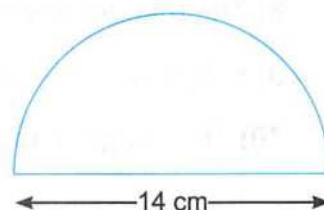
.....

22) On the Cartesian coordinate plane, **draw** $\triangle ABC$ where A (1 , 1), B (4 , 1) and C (4 , 4), then **find** the image of $\triangle ABC$ by translation (1 , -2).



23) Find the area of the given figure. $(\pi \approx \frac{22}{7})$

.....



24) Find the solution set of each of the following:

a) $2x + 9 = 13$ ($x \in \mathbb{Z}$)

b) $x - 1 < 2$ ($x \in \mathbb{N}$)

25) The following table shows the percentage of production of a factory of home electric appliances.

Kinds of appliances	Washing machine	Heater	Oven	Mixer
Percentage	25%	25%	20%	30%

Represent these data by using the circular sectors.

.....

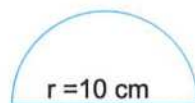
Model 3

1 Choose the correct answer:

- 1) When tossing a coin once, then the probability of getting a head is
(0 or 1 or 0.5)
- 2) If the area of one face of a cube is 9 cm^2 , then its total surface area is cm^2 .
(36 or 54 or 81)
- 3) $\mathbb{Z}^+ \cap \mathbb{Z}^- = \dots\dots\dots$ (\mathbb{Z} or \emptyset or \mathbb{Z}^-)
- 4) The measure of the central angle of the circular sector which represents $\frac{1}{12}$ from the area of the circle =
(90° or 60° or 30°)
- 5) $(-1)^8 + (-1)^9 + (-1)^{\text{zero}} = \dots\dots\dots$ (-1 or 1 or 0)
- 6) If a die is tossed once, then the probability of getting a prime number =
($\frac{1}{3}$ or $\frac{1}{2}$ or 1)
- 7) If $4x = 24$, $x \in \mathbb{Z}$, then $x = \dots\dots\dots$ (12 or 24 or 6)
- 8) The multiplicative neutral element in \mathbb{Z} is (0 or 1 or 2)
- 9) $|-5| + 3 \dots\dots\dots \mathbb{Z}$ (\in or \subset or \notin)
- 10) The image of the point $(-1, 2)$ by translation $(-2, 3)$ is
($(0, 5)$ or $(1, 3)$ or $(-3, 5)$)
- 11) If the diameter length of a circle is 20 cm, then its area = cm^2 . ($\pi \simeq 3.14$)
(314 or 3.14 or 0.314)
- 12) $5 \times |-4| = \dots\dots\dots$ (20 or -20 or 9)

2 Complete each of the following:

- 13) The probability of getting a tail when tossing a coin once =
- 14) $(-3) + |-3| = \dots\dots\dots$
- 15) $\frac{6^4 \times 6^5}{6^7} = \dots\dots\dots$
- 16) If $X = (-2, 1)$, $Y = (-2, 5)$, then the length of $\overline{XY} = \dots\dots\dots$ length units.
- 17) The area of the opposite figure = ($\pi \simeq 3.14$)



18) The numbers lying between -5 and 0 are

19) $\mathbb{Z}^+ \cup \{0\} = \dots\dots\dots$

20) The greatest negative integer is

3 Answer the following questions:

21) Find the solution set of the following inequality:

$$3x - 2 < 7 \quad (x \in \mathbb{N})$$

.....

22) Use the properties of addition in \mathbb{Z} to find the result of:


$$(-116) + 190 + 116 \quad (\text{State the property used in each step.})$$

.....

23) In the opposite figure:

ABCD is a rectangle, its length 12 cm and its width 7 cm. A circle is drawn to touch the sides \overline{AD} and \overline{BC} .

Calculate the area of the shaded part. (where $\pi \approx \frac{22}{7}$)



.....

24) The following table shows the number of students participating in school activities.

Activity	Culture	Sports	Social	Art
Percentage	20%	40%	25%	15%

Represent these data by using the circular sectors.

.....

25) On a coordinate plane, draw \overline{AB} where $A(2, 3)$, $B(-2, 0)$, then find its image by translation $(x + 3, y - 2)$.

.....

Model

4

1 Choose the correct answer:

- 1) $\mathbb{Z} - \mathbb{N} = \dots\dots\dots$ (\mathbb{Z}^+ or $\{0\}$ or \mathbb{Z}^- or 0)
- 2) The equation $2x^3 = 4$ is of the degree. (1^{st} or 2^{nd} or 3^{rd} or 4^{th})
- 3) The image of the point A $(-4, 3)$ by translation $(-1, -4)$ is
 $((-5, 7)$ or $(-5, -1)$ or $(-7, 3)$ or $(-3, -1))$
- 4) Two consecutive natural numbers, the smaller one is x , then the greater is
 $(2x$ or $x + 1$ or $2x + 1$ or $x - 1)$
- 5) $(3)^0 + (-3)^0 = \dots\dots\dots$ (6 or 0 or 1 or 2)
- 6) A circle of diameter 8 cm, its area = cm^2 . (9π or 8π or 16π or 64π)
- 7) If $x \in \mathbb{N}$, then the S.S. of the inequality $-x > 3$ is
 $(\{4, 5, \dots\dots\dots\}$ or $\{3\}$ or $\{-4, -5, -6, \dots\dots\dots\}$ or \emptyset)
- 8) A basket contains cards numbered from 1 to 20. If a card is drawn randomly, then the probability that the number written on it is divisible by 6 =
 $(\frac{3}{20}$ or $\frac{4}{20}$ or $\frac{5}{20}$ or $\frac{6}{20})$
- 9) The additive inverse of (-5) is (-10 or $-\frac{1}{5}$ or $|-5|$ or 0)
- 10) The probability of success of a student is 70%, then the probability of his failure is (0.7 or 0.07 or 0.3 or 0.03)
- 11) The area of one face of the cube = its total area. ($\frac{1}{2}$ or $\frac{1}{8}$ or $\frac{1}{6}$ or $\frac{1}{4}$)
- 12) The S.S. of the inequality $-2x < 0$ in \mathbb{Z} is (\mathbb{N} or \mathbb{Z} or \emptyset or \mathbb{Z}^+)

2 Complete each of the following:

- 13) $3 + |-3| = \dots\dots\dots$
- 14) The perimeter of the base of a cuboid is 10 cm and its height is 4 cm, then its lateral area =
 $\dots\dots\dots$
- 15) The probability of the sure event =
 $\dots\dots\dots$
- 16) The sum of measures of all accumulated angles of the sectors at the centre of a circle =
 $\dots\dots\dots$

17) The area of the circle = $\times \pi$.

18) If the total area of a cube is 150 cm^2 , then the length of its edge = cm.

19) $\mathbb{Z}^+ \cup \{0\} = \dots\dots\dots$

20) If $3x = 9$, then $x = \dots\dots\dots$

3 Answer the following questions:

21) **Use** the distribution property to find $3 \times (-2) + 3 \times 5$

.....

22) **Find** the solution set in \mathbb{N} : $3x - 2 = -17$

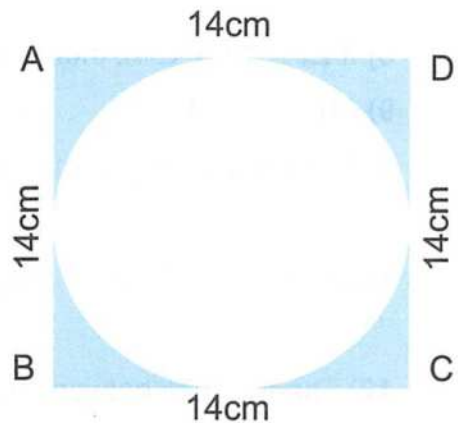
.....

23) The sum of edge lengths of a cube is 144 cm. **Find** its lateral area and its total area.

.....

24) **Find** the area of the shaded part. $(\pi \approx \frac{22}{7})$

.....



25) The following table shows the number of students participating in school activities.

Activities	Cultural	Sports	Social	Arts
Percentage	25%	50%	15%	10%

Represent these data by a pie chart.

.....

Model

5

1 Choose the correct answer:

- 1) $\mathbb{Z} - \mathbb{N} = \dots\dots\dots$ (\mathbb{Z}^+ or \mathbb{Z}^- or zero or \mathbb{N})
- 2) The probability of the certain event = $\dots\dots\dots$ (zero or 1 or 5 or 12)
- 3) The image of the point (3, 5) by translation (2, -1) is $\dots\dots\dots$
(5, 6) or (5, 4) or (1, 4) or (1, 6)
- 4) The sum of the measures of all the central angles of the sectors around the centre of the circle is $\dots\dots\dots$ (90° or 80° or 270° or 360°)
- 5) If $x = |-2|$, $y = -3$, then $xy = \dots\dots\dots$ (-5 or 5 or -6 or 6)
- 6) The degree of the equation $x^2 + 3 = 4$ is of the $\dots\dots\dots$ degree.
(first or second or third or fourth)
- 7) If the area of one face of a cube is 25 cm^2 , then its lateral area = $\dots\dots\dots \text{ cm}^2$.
(150 or 20 or 25 or 100)
- 8) If $2x = 10$, $x \in \mathbb{N}$, then $x = \dots\dots\dots$ (3 or 4 or 5 or 6)
- 9) $(3)^{\text{zero}} + (-3)^{\text{zero}} = \dots\dots\dots$ (6 or 0 or 1 or 2)
- 10) All the following numbers satisfy the inequality $x > -3$ except $\dots\dots\dots$
(0 or -4 or -1 or -2)
- 11) A circle, its diameter length is 6 cm, then its surface area = $\dots\dots\dots \text{ cm}^2$.
(3π or 6π or 9π or 36π)
- 12) The distance between two points A (-3, 2) and B (2, 2) = $\dots\dots\dots$ length units.
(-5 or 2 or 5 or 1)

2 Complete each of the following:

- 13) The image of the point (-1, 4) by translation $(x + 1, y - 3)$ is $\dots\dots\dots$
- 14) $\mathbb{Z}^+ \cap \mathbb{Z}^- = \dots\dots\dots$
- 15) A fair die is thrown once, then the probability of getting the number 5 is $\dots\dots\dots$
- 16) The lateral area of the cuboid = the perimeter of a base $\times \dots\dots\dots$
- 17) $\frac{(-2)^7 \times (-2)^5}{(-2)^{10}} = \dots\dots\dots$
- 18) If the sum of edge lengths of a cube = 48 cm, then its lateral area = $\dots\dots\dots \text{ cm}^2$.



19) If $x = -2$, $y = |4|$, then $xy = \dots\dots\dots$

20) The cuboid of lateral area 120 cm^2 and the perimeter base 20 cm ,
its height = $\dots\dots\dots \text{ cm}$.

3 Answer the following questions:

21) Find the solution set in \mathbb{Z} of the equation $2x + 11 = 3$

$\dots\dots\dots$

22) Use the properties of addition and multiplication to find the result of:

$$37 \times 17 + 37 \times (-17)$$

$\dots\dots\dots$

23) A carpet in the shape of a circle of radius length 3.5 m . If the price of one square metre of this carpet is 100 pounds, find the price of the whole carpet. $(\pi \approx \frac{22}{7})$

$\dots\dots\dots$

24) Find the total area of a cuboid box of dimensions 3 cm , 2 cm and 6 cm .

$\dots\dots\dots$

25) The following table shows the percentages of a number of students participating in some favourite school activities:

Activities	Sports	Reading	Music
Percentage	25%	35%	40%

Represent these data by a pie chart.

$\dots\dots\dots$

$\dots\dots\dots$

Model 9

- (1) 10 (2) 90° (3) $>$ (4) -2
 (5) $\frac{1}{2}$ (6) $>$ (7) 0.35 (8) 7
 (9) -1 (10) 6 (11) 7 (12) $x \geq 3$
 (13) (5, 4) (14) -6 (15) 5

Model 10

- (1) second (2) 360° (3) 1 (4) 100
 (5) \mathbb{Z} (6) 2:3 (7) 154 (8) 40
 (9) (-1, -1) (10) -2 (11) $2 \times 3 - 7$ (12) 60°
 (13) \notin (14) 4 (15) 0.5

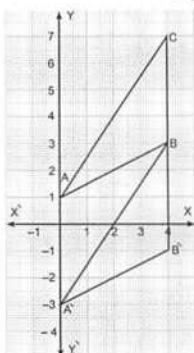
Combined model exams (Selected from Previous year Exams)

Model 1

1. 1) \mathbb{N} 2) third 3) 16 4) (-2, 3)
 5) $\frac{1}{2}$ 6) 0 7) -4 8) 256
 9) 120 10) \mathbb{Z}^- 11) 1 12) {2}
 13) height 14) -1 15) zero
 16) 3 17) 6 18) commutative
 19) {-1, 0, 1} 20) (-3, 0)

3. 21) $(4 \times 3^2 \times 3^2) - 7 \times 3 = 4 \times 81 - 21$
 $= 324 - 21 = 303$

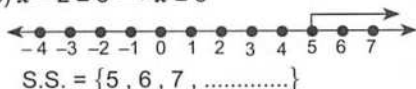
22)



- a) 4 b) $A' = (0, -3)$, $B' = (4, -1)$
 $C' = (4, 3)$

$\Delta A'B'C'$ is the image of ΔABC

23) $x - 2 \geq 3 \Rightarrow x \geq 5$



24) Lateral area of the cuboid
 $= \text{perimeter of base} \times \text{height}$
 $= 10 \times 4 \times 7 = 280 \text{ cm}^2$

25) The measure of the angle which represents the washing machine
 $= \frac{30}{100} \times 360^\circ = 108^\circ$

The measure of the angle which represents the heater $= \frac{15}{100} \times 360^\circ = 54^\circ$

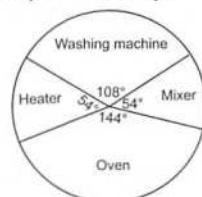
The measure of the angle which represents the oven

$= \frac{40}{100} \times 360 = 144^\circ$

The measure of the angle which represents the mixer

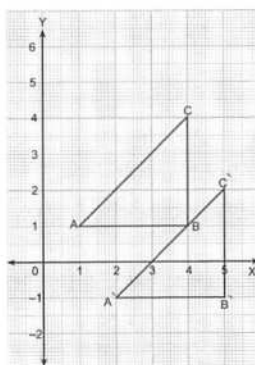
$= \frac{15}{100} \times 360 = 54^\circ$

that can be represented by:



Model 2

1. 1) \mathbb{Z}^- 2) $>$ 3) side length 4) 314
 5) -2 6) 10 7) zero 8) -1
 9) (-3, 0) 10) 0 11) 3 12) third
 13) {0} 14) \mathbb{Z}^+ 15) 14cm 16) $2^4 = 16$
 17) 10 cm 18) 5 19) 1 20) 54
 21) $7^{5+1-4} = 7^2 = 49$
 22)



23) The area of the figure $= \frac{1}{2} \times \frac{22}{7} \times (7)^2 = 77 \text{ cm}^2$

24) a) $2x + 9 = 13$ $2x = 13 - 9$

$\frac{2x}{2} = \frac{4}{2}$, then $x = 2$ The S.S. = {2}

b) $x - 1 < 2$ $x < 2 + 1$
 ,then $x < 3$ S.S. in $\mathbb{N} = \{2, 1, 0\}$

25) The measure of the angle of the sector which represents washing machine $= \frac{25}{100} \times 360^\circ = 90^\circ$

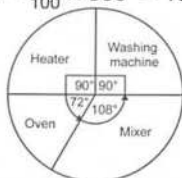
The measure of the angle which represents the heater $= \frac{25}{100} \times 360^\circ = 90^\circ$

The measure of the angle which represents

the oven = $\frac{20}{100} \times 360^\circ = 72^\circ$

The measure of the angle which represents

the mixer = $\frac{30}{100} \times 360^\circ = 108^\circ$



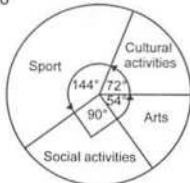
Model 3

1. 1) 0.5 2) 54 3) \emptyset 4) 30°
5) 1 6) $\frac{1}{2}$ 7) 6 8) 1
9) \in 10) $(-3, 5)$ 11) 314 12) 20
2. 13) $\frac{1}{2}$ 14) zero 15) 36 16) 4
17) 157 cm^2 18) $(-1, -2, -3, -4)$
19) \mathbb{N} 20) -1

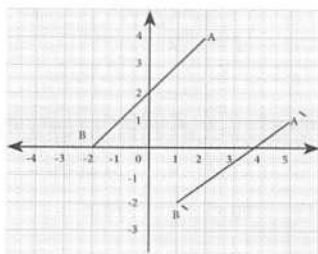
3. 21) S.S. = $\{2, 1, 0\}$
22) $(-116) + 190 + 116 = [(-116) + 116] + 190$
(commutative and associative property)
= $0 + 190$ (the additive neutral)
= 190 (closure property)

- 23) The area of the shaded part
= area of rectangle - area of circle
= $12 \times 7 - \left(\frac{7}{2}\right)^2 \times \frac{22}{7}$
= $84 - 38.5 = 45.5 \text{ cm}^2$

- 24) The measure of the angle which represents the cultural activities = $\frac{20}{100} \times 360^\circ = 72^\circ$
The measure of the angle which represents sport = $\frac{40}{100} \times 360^\circ = 144^\circ$
The measure of the angle which represents social activities = $\frac{25}{100} \times 360^\circ = 90^\circ$
The measure of the angle which represents arts = $\frac{15}{100} \times 360^\circ = 54^\circ$



25)



Model 4

1. 1) \mathbb{Z}^- 2) (3^{rd}) 3) $(-5, -1)$ 4) $x + 1$
5) 2 6) 16π 7) \emptyset 8) $\frac{3}{20}$
9) $|-5|$ 10) 0.3 11) $\frac{1}{6}$ 12) \mathbb{Z}^+

2. 13) 6 14) 40 cm^2 15) 1 16) 360
17) r^2 18) 5 19) \mathbb{N} 20) 3

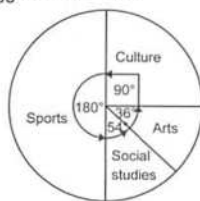
3. 21) $3 \times [(-2) + 5] = 3 \times 3 = 9$
22) $3x = -15$ $x = -5$ S.S. = \emptyset
23) Lateral area = $4 \times 12 \times 12 = 576 \text{ cm}^2$
total area = $6 \times 12 \times 12 = 864 \text{ cm}^2$
24) Shaded part = area of square - area of circle
= $(14 \times 14) - \left(\frac{22}{7} \times 7 \times 7\right)$
= $196 - 154 = 42 \text{ cm}^2$
25) The measure of central angle which represents:

Culture = $\frac{25}{100} \times 360 = 90^\circ$

Sports = $\frac{50}{100} \times 360 = 180^\circ$

Social studies = $\frac{15}{100} \times 360 = 54^\circ$

Arts = $\frac{10}{100} \times 360 = 36^\circ$



Model 5

1. 1) \mathbb{Z}^- 2) 1 3) $(5, 4)$ 4) 360°
5) -6 6) second 7) 100 8) 5
9) 2 10) -4 11) 9π 12) 5

2. 13) $(0, 1)$ 14) \emptyset 15) $\frac{1}{6}$ 16) height
17) 4 18) 64 19) -8 20) 6

3. 21) $2x + 11 = 3 \Rightarrow 2x = 3 - 11$

Then $\frac{2x}{2} = \frac{-8}{2}$ so $x = -4$

The S.S. = $\{-4\}$

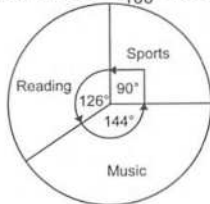
22) $37 \times 17 + 37 \times (-17)$
= $37 \times [17 + (-17)] = 37 \times 0 = 0$

23) Area of the carpet = $\pi r^2 = \frac{22}{7} \times (3.5)^2 = 38.5 \text{ m}^2$

The price of the carpet = 38.5×100
= 3850 pounds

24) The total area of the cuboid
= lateral area + area of two bases
= $(3 + 2) \times 2 \times 6 + 2 \times 3 \times 2$
= $60 + 12 = 72 \text{ cm}^2$

- 25) The measure of the angle of the sector that represents sports = $\frac{25}{100} \times 360^\circ = 90^\circ$
 The measure of the angle of the sector that represents reading = $\frac{35}{100} \times 360^\circ = 126^\circ$
 The measure of the angle of the sector that represents music = $\frac{40}{100} \times 360^\circ = 144^\circ$



Combined Model Exams (Selected from 2019 Governorate Exams)

1 Cairo - El-Sahel Educational Zone

1. 1) \emptyset 2) $-(3)^2$ 3) second 4) $\frac{1}{6}$
 5) -24 6) 4 7) 25 8) 1
 9) $(-2, -7)$ 10) 2^5 11) 0.2 12) $\{4\}$

2. 13) 54 14) $\mathbb{Z} \cup \{0\}$
 15) $(-1, 2)$ 16) 18
 17) 360 18) 50 19) $x < -3$ 20) 10

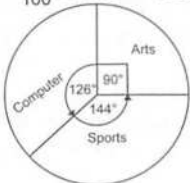
3. 21) $3x - 7 = 11, x \in \mathbb{Z}$ $3x = 11 + 7 = 18$
 $\frac{3x}{3} = \frac{18}{3} \Rightarrow x = 6$ S.S. = $\{6\}$

- 22) The area of a circle = πr^2
 $= \frac{22}{7} \times 7 \times 7 = 154 \text{ cm}^2$
 The area of each sector = $154 \div 7 = 22 \text{ cm}^2$

- 23) $x - 2 \leq 3$ where $x \in \mathbb{N}$
 $x \leq 3 + 2 \Rightarrow x \leq 5$
 S.S. = $\{5, 4, 3, 2, 1, 0\}$

- 24) The side length of the cube = $28 \div 4 = 7 \text{ cm}$.
 a) Lateral area = $4 S^2 = 4 \times 7 \times 7 = 196 \text{ cm}^2$
 b) Total area = $6 S^2 = 6 \times 7 \times 7 = 294 \text{ cm}^2$

- 25) The measure of the angle which represents arts = $\frac{25}{100} \times 360^\circ = 90^\circ$
 The measure of the angle which represents sports = $\frac{40}{100} \times 360^\circ = 144^\circ$
 The measure of the angle which represents computer = $\frac{35}{100} \times 360^\circ = 126^\circ$



2 Giza - 6 October Directorate

1. 1) -1 2) \notin 3) 2 4) $(-3, 0)$
 5) \mathbb{Z} 6) 216 7) $\frac{1}{6}$ 8) 314
 9) 3 10) 14 11) 10 12) 180°

2. 13) zero 14) \emptyset 15) 3200 16) 96
 17) the centre 18) $\{3, 2, 1, 0\}$
 19) $\{-3\}$ 20) $2(L + w) \times h$


3. 21) a) $(-5) \times [2] = -10$ b) $7^4 + 5^{-7} = 7^2 = 49$

- 22) $2x - 3 < 1$ where $x \in \mathbb{N}$

$$2x < 1 + 3$$

$$\text{S.S.} = \{0, 1\}$$

$$\frac{2x}{2} < \frac{4}{2} \Rightarrow x < 2$$

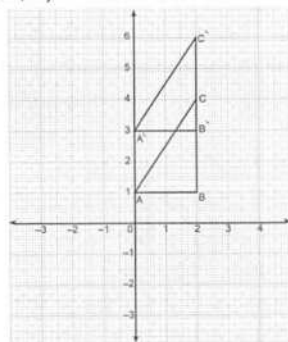


- 23) $x + 4 > 5$ $x \in \mathbb{Z}$

$$x > 5 - 4 \Rightarrow x > 1 \quad \text{S.S.} = \{2, 3, \dots\}$$

- 24) a) The length of BC = 3 length units.

- b) The image of $\triangle ABC$ by translation $(0, 2)$ is $\triangle A'B'C'$.

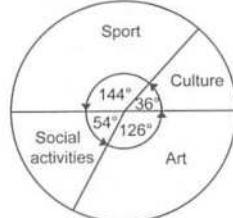


- 25) The measure of the angle which represents culture = $\frac{10}{100} \times 360^\circ = 36^\circ$

The measure of the angle which represents sport = $\frac{40}{100} \times 360^\circ = 144^\circ$

The measure of the angle which represents social activities = $\frac{15}{100} \times 360^\circ = 54^\circ$

The measure of the angle which represents art = $\frac{35}{100} \times 360^\circ = 126^\circ$



3 Alexandria - Mathematics Inspection

1. 1) $x = 8$ 2) $\frac{5}{6}$ 3) 3000 4) 5
 5) $\{-3\}$ 6) $\frac{r^2}{2}$ 7) 3 8) $(5, -1)$